

NAME:

SCHOOL:.....

DATE:

CIRCULAR MOTION

INSTRUCTIONS TO CANDIDATES

Answer **ALL** questions in this paper in the spaces provided.

1. A stone on a string is whirled in a vertical circle of radius 80 cm at a constant angular speed of 16 radians per second.

Calculate the speed of the stone along its circular path.

.....

.....

.....

.....

.....

.....

Speed =

(2)

Calculate its centripetal acceleration when the string is horizontal.

.....
.....
.....

Acceleration = (2)

Calculate the resultant acceleration of the stone at the same point.

.....
.....
.....

Resultant acceleration = (3)

Explain why the string is most likely to break when the stone is nearest the ground.

.....
.....
.....
.....
.....
.....

(2)
(Total 9 marks)

2. State the period of the Earth about the Sun.

.....
.....
.....

Use this value to calculate the angular speed of the earth about the Sun in rad s⁻¹.

.....
.....
.....

Angular speed = (2)

The mass of the Earth is 5.98×10^{24} kg and its average distance from the Sun is 1.50×10^{11} m. Calculate the centripetal force acting on the Earth.

.....
.....
.....

(2)

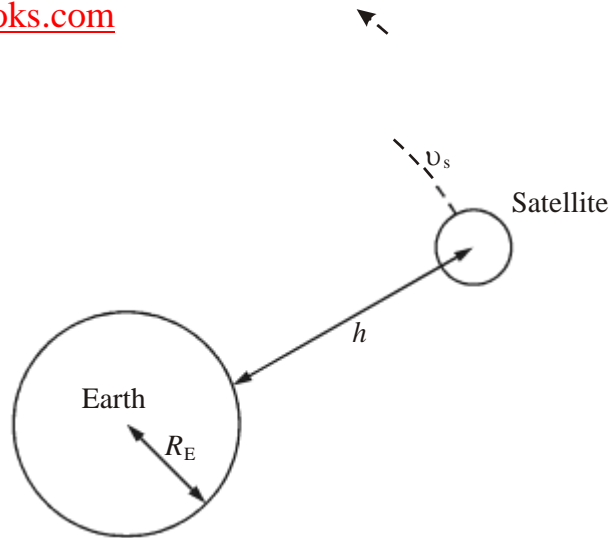
What provides this centripetal force?

.....
.....
.....

(1)

(Total 5 marks)

3. The diagram (not to scale) shows a satellite of mass m_s in circular orbit at speed v_s around the Earth, mass M_E . The satellite is at a height h above the Earth's surface and the radius of the Earth is R_E .



Using the symbols above write down an expression for the centripetal force needed to maintain the satellite in this orbit.

.....

.....

.....

(2)

Write down an expression for the gravitational field strength in the region of the satellite.

.....

.....

.....

State an appropriate unit for this quantity.

.....

(3)

Use your two expressions to show that the greater the height of the satellite above the Earth, the smaller will be its orbital speed.

.....



.....

.....

.....

.....

(3)

Explain why, if a satellite slows down in its orbit, it nevertheless gradually spirals in towards the Earth's surface.

.....

.....

.....

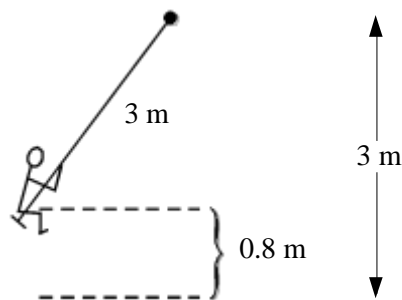
.....

.....

.....

(2)
(Total 10 marks)

4. A child of mass 21 kg sits on a swing of length 3.0 m and swings through a vertical height of 0.80 m.



Calculate the speed of the child at a moment when the child is moving through the lowest position.

.....

.....

.....

(2)

Calculate the force exerted on the child by the seat of the swing at a moment when the child is moving through the lowest position.

.....
.....
.....

Force =

(3)

Explain why, as the amplitude of the motion increases, children may lose touch with the seat of the swing.

.....
.....
.....

(2)
(Total 7 marks)

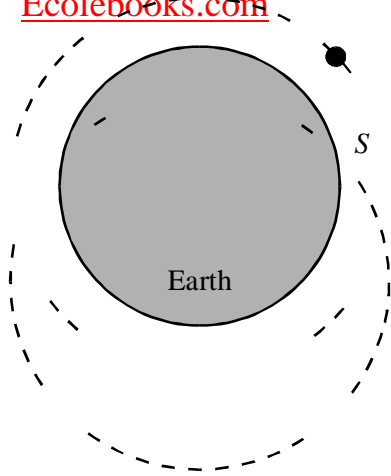
5. A satellite S orbits the Earth once every 87 minutes.

Show that its angular speed is approximately 1×10^{-3} radians per second.

.....
.....
.....
.....
.....
.....

(2)

In the space on the right draw a free-body force diagram for the satellite in the position shown.



(1)

With reference to your free-body force diagram, explain why the satellite is accelerating.

.....

.....

.....

(1)

The radius of the satellite's orbit is 6500 km. Calculate the magnitude of its acceleration.

.....

.....

.....

.....

.....

.....

Acceleration =

(2)

(Total 6 marks)

