



TIMER NATIONAL SERIES {6} EVALUATION TEST

STD 6 SOCIAL STUDIES & RE

aaZ

CODE0072021

Time: 2 hrs 15 min

DESA AREA

KEY

em Tarmac road
"n road

4

ps

N
f/cc

Post office
Market
wm:ill
Tea collection centre
P.S Police station

0 1 2 3 4 5 6 7 8 9
t : .i i ± .i i i i

S
C
A
L
E:

ikm

10

L
a
w
c
o
u
r
t
s
A
i
r
f
i
e
l
d

undary
CGO County Government
Offices

H
C
H
e
a
l
t
h
c
e
n
t
r
e

C
h
u
r
c
h

- .

To
w
n
bo



Study the map of a rural area and answer the following questions.

Which one of the following shows that there is administration of justice in Desa town?

The presence of a

- A. prison
- B. County government office
- C. Law court
- D. Police station

Which one of the following economic activities is not carried out in Desa area?

- A. Agriculture
- B. Mining
- C. Trading
- D. Fishing

The main religion of the people of Desa area is

- A. Christianity
- B. Hinduism
- C. Islam
- D. African traditional Religion

5. Ito7 is the direction of Haki market from the

airfield?

- A. South East
- B. North East
- C. South West
- D. North west

Traders at Sasa market get their trade licences from the

- A. police station
- B. county government offices
- C. law courts
- D. chief's camp

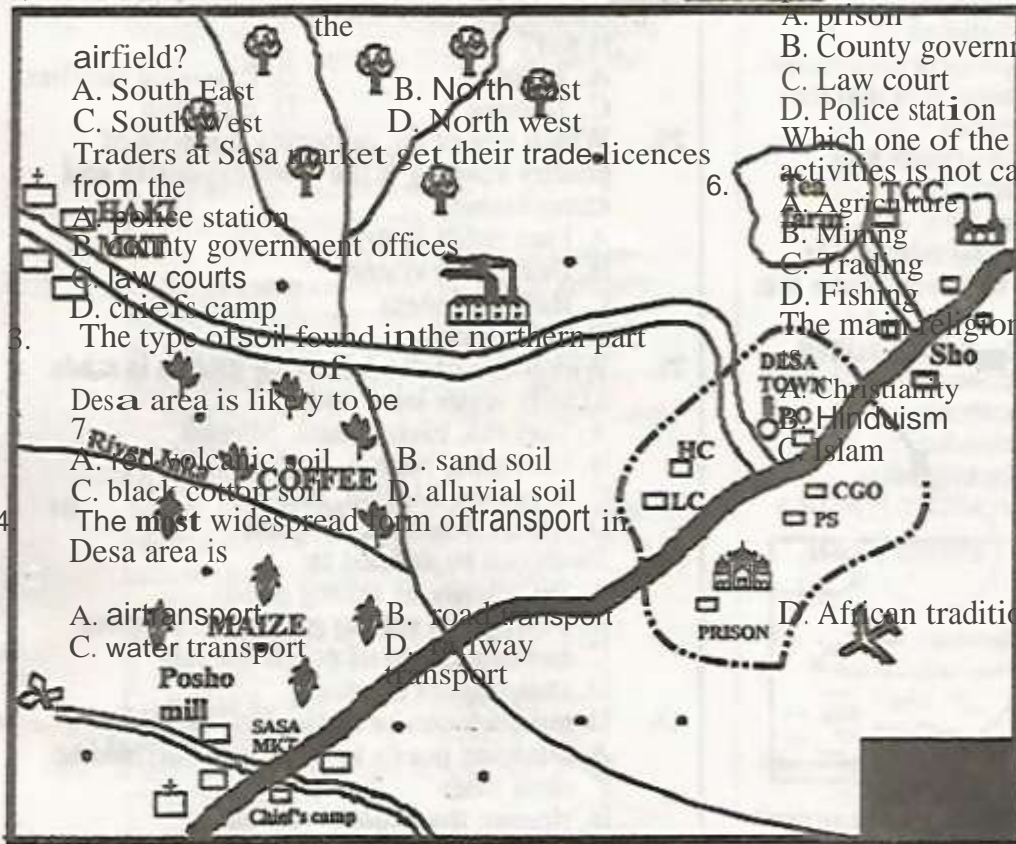
6. The type of soil found in the northern part of

Desa area is likely to be

- A. red volcanic soil
- B. sand soil
- C. black cotton soil
- D. alluvial soil

7. The most widespread form of transport in Desa area is

- A. air transport
- B. road transport
- C. water transport
- D. railway transport



	Murrum
	Forest
	Sand pit
	River and bridge
	Permanent buildings
	P.O
	MKT
	Sa
	Tea factory
	LC

questions

What

2.

8.

Which one of the following statements is not true about longitudes?

9.

A. They begin from the north pole to south pole.

B. They are also called meridians.

C. They are parallel to each other.

D. They are measured up to 180° to the East and also to the west.

The main language group living in South Sudan are the

A. Bantus B. Nilotes

C. Cushites D. Semites

10.

The Ruwenzori and Kipengere mountains have one thing in common. It is that they

A. are located on boundaries.

B. have mineral deposits at their foot.

C. are examples of horsts.

D. are extinct volcanoes.

11.

Which one of the following minerals is match with the area where it is mined?



A. Limestone

Kimwarer

B. Sait

Ngomeni

C. Diatomite

Kariandusi

D. Soda ash

Lake magadi

12.

The diagram below represents a type of a breeze



15.

At what time does the above breeze occur?

A. In the evening

B. At night

C. At dawn

D. Day time

13.

Which one of the following communities is the odd one out?

A. Wadawida

B. Pokomo

C. Abakuria

D. Agiriama

The type of vegetation described above is

A. mangrove forests

B. woodland savannah

C. mountain vegetation

D. equatorial vegetation

18.

Which one of the following was the title given to traditional Nandi rulers in the past?

A. Nabongo

B. Orkoiyot

C. Ntemi

D. Oloibon

19.

Three of the following are aspects of our culture that need to be preserved. Which one is not?

A. Taboos

B. Extended families

C. Tattoing

D. initiation

20.

Which one of the following methods of poultry keeping is the most expensive and complicated?

A. Free range system

B. Deep litter system

C. Battery system

D. Fold system

21.

Which one of the following groups made

Which one of the following is

of the

14.

The type of climate experienced where cloves, sugarcane and coconuts grow is

A. cool and dry

B. hot and wet

ShE. laze

A. a councillor

B. people's representative

C. member of the county assembly

D. a sub-county commissioner

16.

In which one of the following sections of a

river are ox-bow lakes

formed? A. Senile stage B. Source

C. Youthful stage

D. Mouth

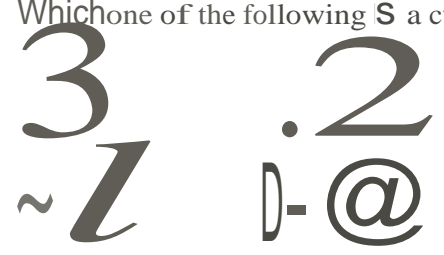
17.

Below are characteristics of a certain type of vegetation

i) It is evergreen.

ii) There are giant indigenous trees

iii) *Trees grow to a height of 40 metres and above*
i) *The trees form a canopy*

- of salty water lakes **only**?
A. Turkana, Elementaita, Magadi
B. Naivasha, Natron, Bogoria
C. Manyara, Magadi, Nakuru
D. Albert, Masinga, Bogoria
22. Trade can be defined as
A. the activity of selling goods
B. buying and selling goods and services
C. manufacturing of goods for sale
D. exchange of services
23. Democracy can be applied in school by
A. allowing pupils to participate in making class rules
B. singing the national anthem
C. awarding active pupils in class
D. choosing one class to entertain guests during a parents day.
24. Which one of the following is an early form of communication?
A. Letter writing
B. Use of trumpets
C. Screaming
D. Use of land line telephones
25. Which one of the following is a cultural symbol?

26. Below are statements about a prominent traditional leader in Kenya
i) *Administered oaths to people.*
ii) *Was a prophetess.*
iii) *Organised people to prevent grabbing of their land by the British.*
i) *Was arrested and deported to Gusiiland.*

The leader described above was

- A. Masaku
- B. Waiyaki wa Hinga
- C. Mekatilili wa menza
- D. Koitalel arap Samoei

27. The main tourist attraction along the coast of Kenya is

- A. sandy beaches
- B. historical monuments
- C. marine wildlife
- D. traditional dancers

28. Which one of the following communities collaborated with the British during the colonial rule in Kenya?

- A. Ameru and Agirima
- B. Abakusu and Nandi
- C. Agirima and Maasai

D. Abawanga and Agikuyu

29. Three of the following were positive results


of the coming of early visitors to eastern Africa. Which one was **not**?

- A. Introduction of formal education
- B. Erosion of African cultural practices
- C. Establishment of permanent settlement along the coast
- D. Abolishment of slave trade.

30. Which one of the following major towns in eastern Africa is incorrectly matched with the international organisation it hosts?

Town	Organisation
A. Daresalaam	UN HABITAT
B. Nairobi	EAC
C. Addis Ababa	AMREF
D. Arusha	EALA

31. Publishing books and magazines is an



- A. manufacturing industry
- B. processing industry
- C. service industry
- D. assembly industry

Use the map of Eastern Africa below to answer questions 32 to 35

34.

35.

The national park marked P is

- 36. A. Maasai Mara National Reserve
- B. Dodori National Reserve
- C. Ruma National Park
- D. Amboseli National park

37. The town marked Q is

- A. Dodoma
- B. Iringa
- C. Arusha
- D. Tabora

The practice of growing flowers is referred to as

- A. agriculture
- B. viticulture
- C. floriculture
- D. horticulture

You have witnessed a matatu overturning as you go home from school. The

immediate action you should take is to

- A. call the police to arrest the driver
- B. start screaming.
- C. run home and inform your parents.
- D. assist passers-by to rescue the victims.

38.

Which one of the following was not a characteristic of shifting cultivation?

- A. Farmers only grew crops for the family
- B. Land was left bare for some time
- C. Crop rotation was practised
- D. Farming activities were done manually

39.

The road sign shown below means



- A. no entry
- B. no overtaking
- C. no parking
- D. roundabout closed

A language group that lives in the shaded area marked N is

- A. Cushites
- B. Nilotes
- C. Bantus
- D. Semites

33. The river marked O is

- A. Galana
- B. Shibeli
- C. Katonga
- D. Juba

Stay Safe - Wash your hands and wear a mask!

3

3

2

T

h

e

m

a

i

40. B th's crust known as A. lines B. escarpments
l C. faults D. compression
o forces
c
41. k The floating vegetation on river Nile at
m Bahr•
o el-Ghazalis known as
u A.rivcine B. sudd
n C. water hyacinth D.
t reeds
42. a The main contribution of sugarcane to the
i economy of Sudan is that it has led to
n A. the country being selfreliant in sugar
s supply.
a B. creation of job opportunity.
r C. establishment of related industries.
e D. the caring of foreign exchange for the
f country.
43. o The climate of Eastern African is influenced
r by all the following factors **except**
m A. longitudes B. relief
e C. latitudes D. prevailing
d winds
44. The independent Electoral and
a Boundary Commission (IEBC) is
s composed of a
a maximum of
r A. five commissioners
e B. seven commissioners
s C. twenty commissioners
u D. ten commissioners
45. Who among the following people is an
l ex• officio member of the National
t Assembly? A. The president B. The
o chiefjustice C. The attorney General
f D. The speaker
w
e
a
k
c
r
a
c
k
s
o
n
t
h
e
e
a
r

STD 6 TIMER SST/RE 007 2021

46. Which one of the following is **not** a form of child abuse?
 A. Child cleaning the family car
 B. Child trafficking
 C. Children doing household chores
 D. Bullying
47. Which one of the following weather measuring instruments is used for measuring the **direction** of wind?
 A. Winds
 B. Barometer
 C. Windvane
 D. Anemometer
48. Which one of the following climatic regions of **east** Africa has double maximum rainfall pattern?
 A. Tropical climatic region
 B. Coastal tropical climatic region
 C. Equatorial climatic region
 D. Semi-desert climatic region
49. Which one of the following reasons **best** explains why functions of a clan are **limited** in modern society?
 A. Clans are no longer recognised
 B. Clan members live in different parts of the country
50. Large coffee plantations in Kenya are found in **all** the following places **except**
 A. Kitui
 B. Tika
 C. Kiambu
 D. Nakuru
51. The national flag of Kenya is important because
 A. it has beautiful colours
 B. it is found in all government offices
 C. it unites Kenyans
 D. our freedom fighters fought for it
52. Which one of the following is **not** a requirement for voters in Kenya?
 A. One must register with the T3BC.
 B. One must produce the national identity card on the polling day.
 C. One must be living in the constituency where he or she intends to vote.
 D. One must vote at the polling station
56. The total number of nominated members of parliament in the National Assembly is
 A. 12
 B. 350
 C. 47
 D. 290
57. The practice of giving favours in job opportunities to people from someone's community is referred to as
 A. corruption
 B. tribalism
 C. nepotism
 D. patriotism
58. Which one of the following is an example of direct democracy?
 A. Appointment of a class monitor by the class teacher.
 B. Citizens participating in a referendum.
 C. Games captain choosing members of a football team.
 D. Class teacher choosing a pupil to clean up the teachers table.
59. According to the constitution of Kenya, a person may apply for the national identity card after attaining the age of
 A. 20 years
 B. 30 years
 C. 18 years
 D. 35 years
60. One of the duties of the county assembly in Kenya is to
 A. collect taxes from traders
 B. reinforce county by-laws
 C. issue trade licences to business people
 D. make laws for the county
61. CHRISTIAN RELIGIOUS EDUCATION

- A. To protect them from the serpent
- B. To punish them for their disobedience
- C. So that they could take care of it
- D. So that they could pick leaves to cover

their
nakedness

where he or she
registered -

53. The Konza-Magadi branch of the Kenyan

Uganda railway was constructed mainly
in order to

- A. link up Kenya and Uganda.
- B. promote fast development of the Konza city.
- C. transport livestock to the coast for export.
- D. transport soda ash to the port of Mombasa.

54. The chairperson of the Independent Electoral

and Boundaries Commission (IEBC) in Kenya is

- A. Ezra Chiloba
- B. Wafu La Chebukati

55. Which one of the following arms of the

government makes and amends laws in Kenya?

- A. The Legislature
- B. The Constitution
- C. The Judiciary
- D. The Executive

Stay Safe - Wash your hands and wear a mask!

62. What was the main reason why God called

Abraham?

AT GXS h i ead.
Z # S i s : e

D. To make him famous.

63. Where did Moses flee to after killing the

Es

d t i a n ?

B. u,

C. Mizpah

D. Midian

The stone tablet on which laws

of God were written was to be carried in a special box called?

A. Tent

B. Ark

C. Tabernacle

D. Synagogue

65. — is the ability to notice something after thinking carefully.

A. Judgement

B. Reconciliation

C. Discernment

D. Co-operation

66. Gideon had a large army but the spirit of God helped him to win the battle using

A. 300 soldiers.

B. 3000

C. 30000

D. 3200

67. Who among the following was appointed king of Israel while still a young baby?

- A. Saul
- C. David

- B. Rehobom
- D. Jeremiah

69. Ahab's wife was called
 A. Jezreel B. Jezebel
 C. Rebecca D. Michele
 When Naaman the Syrian attacked Israel, he took _____ work for his wife.
 (2 Kg 5:2)
 A. a young girl B. a young boy
 C. a woman D. a young man
 70. The birth of Jesus Christ was prophesied by
 A. Jeremiah B. Isaiah
 C. Elijah D. Ezekiel
 71. _____ wanted _____ place for Jesus to be born in order to go and
 A. worship Him B. give Him gifts
 C. meet His parents D. kill Him
 On the night Jesus was born, angels appeared to
 A. the wisemen B. the pharisees
 C. the shepherds D. the sadduces
 73. In which city was Jesus born?
 A. Nazareth B. Capernaum
 C. Bethlehem D. Jerusalem
 74. Jesus' _____ His _____
 A. _____ B. _____
 C. _____ D. _____

5. EK » aa
 E + z . : + : + z z ' k
 parable of the
 & k
 B z 7 % a

76. "Do this in memory of me" Luke 22:18
 Jesus said those words during
 A. ascension B. the last supper
 C. resurrection D. baptism
 77. Jesus healed the man who had been born blind to show that
 A. sin causes blindness
 B. He is the light of the world
 C. _____
 D. _____

C. encouraging marriage through which the family name could be continued.
 P; a: ~ ? , z e s - l a - o v
 s a k { six

85. Marin, _____ pupil who comes from a rich family, _____ the members of the class. As a Christian, the best advice you would give him is that he should be
 A. trustworthy B. brave
 C. humble D. a peace maker
 P5. People who have run away from their country are called
 A. soldiers B. refugees
 C. aliens D. tourists
 87. Which of the following is not a result of HIV/AIDS infection?
 A. Depression
 B. _____
 C. _____
 D. _____

88. _____ inspired by _____ means "All scripture is _____ God," _____ Bible.

- B. The writers of the Bible were guided by
 A. God wrote them
 C. the Bible was written by Jesus Christ.
 D. the Bible was written by all prophets of God.

89. Which one of the following is the way in which
 A. _____
 B. _____
 C. blindness can be cured by washing
 D. He is jealous
 78. Judas was replaced by
 A. Matthias B. Barnabas
 C. Stephen D. Nicodemus
 79. Who among the following authored the book of Acts?
 A. Paul B. Peter
 C. Luke D. Matthew
 _____ said that faith without _____ is dead.

68.

which the church is involved in uniting people of different communities?

- A. By hosting weddings
- B. By having holy communion
- C. By having crusades
- D. By having prayer and fasting

90. The Bible says that we should take care of the needy. Who among the following people gave the best care of the needy?

- 72. A. Fau B. James

- 81. C. Peter D. Solomon
- were put in jail at Phillipi for preaching about Jesus Christ
- A. John and Peter B. Paul and Titus
- C. Peter and Andrew D. Paul and Silas

∴ 5: a: # ±. See =

% = .
ool

SS. 11 ~ 11, i A #ican ia ~ iii ~ al communities were mainly taught to have

- A. humility B. obedience
- C. tolerance D. courage

84. Our ancestors served the clan in the following ways except

- A. making sure that various families lived together in peace.
- B. teaching the young the ways of life of the community like farming, fishing or taking care of animals.

80.

82.

- A. Zablou: gave food to the hungry.
- B. Rose : prayed for the rains to come down
- C. David : advocated for the government to bring in financial help.
- D. Melsa : counselled those who were affected.

ISLAMIC RELIGIOUS EDUCATION

61. Surah Al-Bayyinah begins with

- A. Wamaa umiru illa liyabudullaha
- B. Lam yakunilladhina kafaru

- C. Fiyha kutubun Qayyimah
- D. Liylaf Qur'ishin

62. The Christians and Jews were given the books in order to

- A. prepare them for the coming of our prophet.

- B. learn only their religion not others.
- C. know the two religions.
- D. make them not accept other religions.

63. Which statement is not true about Qaarun?

- A. He became rich very fast
- B. He loved and helped the poor
- C. He became proud and difficult
- D. many people wanted to be like him

64. Swalatul Khusuf is a prayer said during

- A. the eclipse of the sun
- B. when it rains heavily
- C. the eclipse of the moon
- D. when the prophet's sons dies

65. Which of the following is **not** in surah Bayyinah?
 A. Fawaylan ilmusalim
 B. Rasulun minallahi ya thisuhufan
 C. Lam ykumladhinz Kafaru
 D. Wamaa uminu illa liyaabudulla
66. The main cause of the Battle of Uhud is
 A. the rush for the caravan of Syria.
 B. the defeat of the Quraish in the battle of Badr.
 C. because the Muslims wanted to crush the
 D. the prophet sent archers on top of mount Uhud.
67. The prophet sent archers on top of mount Uhud.
 A. 50 B. 100 C. 150 D. 200
68. Which statement is not true about the battle of Uhud?
 A. The prophet lost some of his teeth
 B. The prophet cursed the Quraish
 C. The Muslims were winners at first
 D. Khadil bini Walid made the Muslim suffer
69. One of these did not take place in muharram
 A. Imam Hussein was killed
 B. Nabii Musa was saved from Fir'aun
 C. Hijra of the prophet
 D. The war of Badr
70. Hind hired _____ to kill Hamza.
 A. Wahsi B. Jubair
 C. Lu'aim D. Khahid
71. Muslims move between swafa and marwa during Hajj in memory of
 A. Ibrahim B. Ismail
 C. Sarah D. Hajar
72. One of these is not among the miracles of Nabii Issa. Which one?
 A. Bringing the dead to life
 B. Making the blind see
 C. Knowing what a person ate and stored at home
 D. Making the dumb to talk
73. Nusaibah bint kaab bin Amru
 A. remained behind to look children.
 B. was making sure that the prophet was not attacked.
 C. was nursing the wounds of the prophet.
 D. killed Hindu Abu sufyani's wife.
74. A table full of food was a miracle of Nabii
75. The search for knowledge is fardh to Muslim man and woman. The hadith teaches
 A. men should be given a chance first then woman.
 B. men should be given a chance before the women.
 C. Women to be given a chance after the men.
 D. Both should be given an equal chance to learn.
76. Taqwa means
 A. praising Allah day and night.
 B. enjoying good and forbidding evil.
 C. fear of Allah.
 D. spending in the cause of Allah.
77. Lynching a thief (burning him to death) is
 A. against the teachings of Islam
 B. the right way to teach them a lesson
 C. is acceptable in Islam
 D. is part of the teachings of Islam
78. Allah is kind to all the attributes. Referring to this is
 A. Al-Adhim B. Al-fhafur
 C. Ash-shakur D. Allahif
79. Makkah was conquered in the month of
 A. Dhul Hijjah B. Rabiul Awwal
 C. Rajab D. Rammadhan
80. Just before migration the prophet list two important people
 A. Abubakar and Umar
 B. Abu Talib and Khadija
 C. Abubakar and uthuman
 D. Khadija and Abdul mutalib
81. Which one of the following does not refer to Allah's mercy?
 A. Musa B. Isa
 C. Ibrahim D. Yunus
82. Nabii Nuh was sent to the people of
 A. Iraq B. Makkah C. Israel D. Yemen
83. A Muslim fighter in Uhud did not kill Hindu because
 A. Hindu begged for mercy from him.
 B. Hindu hid behind another Muslim.
 C. he felt ashamed to kill her with the sword

- of the prophet.
D. Hindu was the wife of Abu sufyan
77. Which statement is **not** true about Firaun?
A. He was shown miracles by Nabii Musa
B. Its magicians defeated Nabii Musa
C. He promised his magicians reward if they won
D. He brought magicians to challenge Musa
- A. Rahim
C. Rahman
B. Ghafur
D. Alim
86. Nisab means
A. the right people to receive zakat.
B. the things on which zakat is compulsory.
C. the minimum amount to have before paying zakat.
D. people who are not allowed to receive zakat.
87. Ulul Azmi means prophets who
A. were murdered
B. were thrown out of their countries
C. served Allah never got married
D. had strong patience
88. Which is not true about Friday?
A. Qiyamah will take place on Friday
B. Adam was created on Friday
C. Hanna was created on Friday
D. Adam was admitted into Jannah
89. On entering the mosque on Friday we should
A. give salam
C. take udhu
B. pray two rakaas
D. read the quran
90. The leader of the archers was called
A. Khalid bin walid
B. Abdullah bin Jubair
C. Umar bin khattab
D. Abu Hudhifah