



TARGETER WINGS MONITORING
LEARNER'S PROGRESS GRADE 3 -
2020



MATHEMATICAL
ACTIVITIES

Name:.....:.....:.....

Gender:

LI

Girl

School name

The teacher to fill the grid below after marking the learner's work.

	y		

Strand

Geometr

Measurement

Numbers

Question numbers

1-2

3-5

6-12

Number of questions	7	13	30
Number of questions correct			

TW-001

1

MATHEMATICAL ACTIVITIES
GRADE. 3

1. Draw. (2mks)

a) Straight line.

b) Curved line.


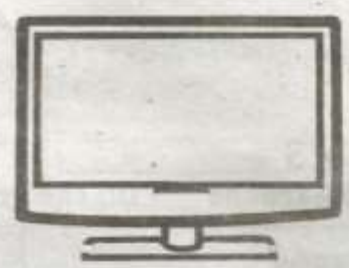
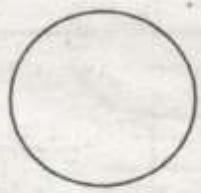
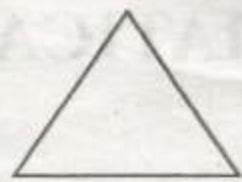

2. Name these shapes (5mks)

3. Circle the ones that are needs. (3mks)



TI_no!

MATH.MATICAL. ACTIVITIE



4. Fill in the missing. (5mks)

Month	Number of days
January	— d0yS.
February	28 or days. 31 days. 30 <i>days</i>
May	d0yS.

5. What is the time?

— — — o'clock — — — o'clock — — — — o'clock

— — — o'clock — — — o'clock

6. Divide. (5mks)

$9 \div 3 =$ — — — — $8 \div 4 =$ — — — — $16 \div 2 =$
 $10 \div 5 =$ — $42 \div$ — — — —

7. Share 20 oranges among 5 girls. Each will get _____ oranges.

8. Multiply.

(5mks)

$5 \times 3 =$ _____

$10 \times 6 =$ _____

$4 \times 4 =$ _____

$2 \times 3 =$ _____

$4 \times 4 \times 4 \times 4 =$ _____ \times _____ $=$ _____

P_a01

3

MATHEMATICAL ACTIVITIES


(5mks)



e) $55 + 47$

$$\begin{array}{r} 1 \\ 2 \\ + \\ 2 \\ 0 \\ \hline \end{array}$$

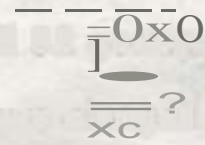
tens



ones

9 tens 6

ones =



60 = tens ones 1 hundreds 0 tens 0 ones =

Total = (50marks)

**MATHEMATICAL ACTIVITIES
GRADE.3**