


# DISTINCTION EARLY YEARS ASSESSMENT



## MONITORING LEARNER'S PROGRESS GRADE 3 - 2020 MATHEMATICS ACTIVITIES

# 3J

### SECTION A AND B

Learner's Name: .....

Learner's Number

Gender Boy   +LJ

County Name: \_\_\_\_\_ County Code:

Sub-County Name: ..... Sub-County Code:

School Name: \_\_\_\_\_ School Code:

## TEACHER'S SCORING GUIDE

	Level 1	Level 2	Level 3	Level 4
The grid below is to be filled by the teacher after marking the learner's work.				
<b>Section A:</b>				
Task 1				
Task 2				
<b>Section B:</b>				

Task 3

Task 4

003-2020

**GRADE 3 1**  
*Distinction Educational Publishers 2020*

**MATHEMATICS ACTIVITIES**

**SECTION A**

**TASK 1**

**Write in words**

1. 43 - \_\_\_\_\_

2. 17 - \_\_\_\_\_

3. 56 - \_\_\_\_\_

**What is the next number?**

4. 6, 8, 10, 12 ➔

5. 1, 6, 11, 16 ➔

6. 35, 40, 45, 50, \_\_\_\_\_

7. 18, 16, 14, 12, \_\_\_\_\_

**TASK 2**

**Write the number**

8. Twelve \_\_\_\_\_

9. Thirty eight \_\_\_\_\_

10. Sixty one \_\_\_\_\_

---

**003-2020**

**GRADE 3 2**  
*Distinction Educational Publishers 2020*

**MATHEMATICS ACTIVITIES**

**SECTION B**

**TASKJ**

**Arrange from the largest to the smallest**

11. 57,75, 45, 54

12. 61,63,81,91

**Fill in the place value numbers**

13. 92 =                    tens                    ones

14. 14 =                    tens                    ones

15. Shade a quarter of the figure below.

16. Draw a triangle in the box below.



17. Komora has 33 ducks. He added 19 more ducks. How many ducks did he have altogether? \_\_\_\_\_

---

003-2020

GRADE 3 3  
*Distinction Educational Publishers 2020*

**MATHEMATICS ACTIVITIES**



**TASK 4**

**Add:**

18.

$$\begin{array}{r} 18 \\ + 6 \\ \hline \end{array}$$

19.

$$20.3 + 15 =$$

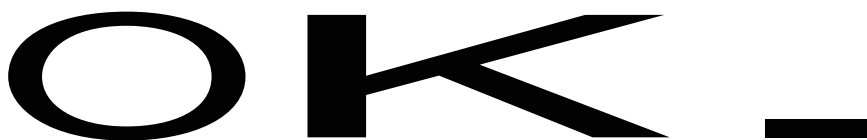
21. Rena bought 17 apples. She gave 9 of them to his sister. How many apples was she left with?

22. 5 ten-shilling coins = sh. \_\_\_\_\_

23. What is 7 less 3? \_\_\_\_\_

**Draw the next pattern**

24.



**Write the time shown on the clock face below.**

25.

@\_rut

\_\_\_\_\_ 18  
\_\_\_\_\_ + 6  
\_\_\_\_\_ o'clock \_\_\_\_\_

003-2020

GRADE 3 4  
*Distinction Educational Publishers 2020*

MATHEMATICS ACTIVITIES

