



COMPETENCY BASED CURRICULUM (G3) GRADE THREE 2021

FRONTRUNNER 007

MATHEMATICS ACTIVITIES

Learners name:

Gir

Learner's Number: „I _____“

Gender: Boy

L

County Name:

County OW

Sub-County Name: Sub-County Code:!

School Name:

School Code: | __ | __ | __

TEACHER'S SCORING GUIDE ASSESSMENT RUBRICS

EXCEEDS EXPECTATION	MEETS EXPECTATION	APPROACHING EXPECTATION	BELOW EXPECTATION
------------------------	----------------------	----------------------------	----------------------

4	3	2	1
The grid below is to be filled by the teacher after marking the learner's work			

Numbers

Measurements

Geometry

No. of Questions

No. of Questions Correct

Performance Level

MATHEMATICS ACTIVITIES 3

Match the months of the year

- | Month | Position |
|-------------|----------|
| 1. March | third |
| 2. June | twelfth |
| 3. December | sixth |

Fill in the missing number

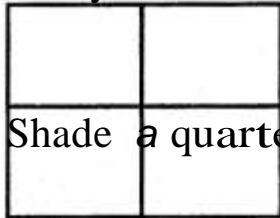
4. 91, 87, 85, 83, _ _ _
5. 470, 472, 474, 476, _ _ _

How many Tens *and* Ones

6. 84 = _____ tens and _____ ones

Write the number

7. thirty six _____



8. Shade a quarter

Add: _____

+ 526

9. 347

11. Mary had 18 pencils. She gave seven to her brother. How many was she left with?
- _____

Multiply:

12. $8 \times 5 = \square$

13. $\begin{array}{r} \square \\ \square \\ \hline 10 \\ \hline \end{array}$
x9

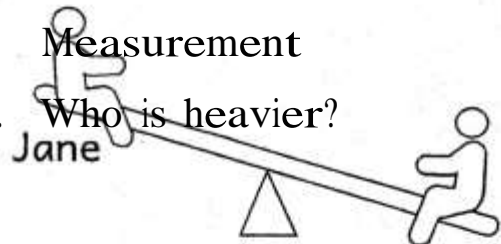
Divide

14. $20 \div 4 = \mathbf{L}$

15. $73 \div 3 = \mathbf{+}$

Measurement

16. Who is heavier?

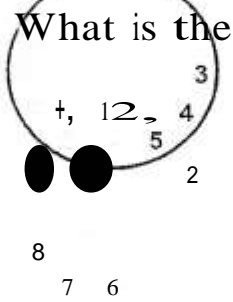


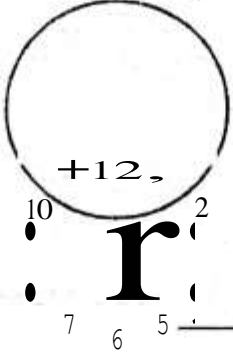
Subtract

17. $55 - 7 = \mathbf{L}$

**J
a
m
e
s**

**MATHEMATICS
ACTIVITIES 3**

17.  What is the time?
 17. _____ o'clock.

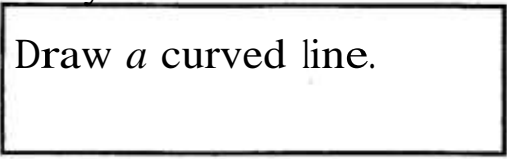
18.  Half past _____ o'clock.

19. John has a sh. 500 note. How many sh. 100 notes will he get?

20. Juma had sh. 100. He bought a book at sh. 40. What was his balance?


Geometry

21. Draw a curved line.



Draw the following shapes,

22. Triangle



23. Circle



24. Complete the pattern _____

ooal\looral\A _____

25. A triangle is made of _____ lines.

MATHEMATICS ACTIVITIES 3