

TARGETER WINGS



#00

MONITORING LEARNER'S PROGRESS


GRADE 3-2021

/wa.
es/

MATHEMATICAL ACTIVITIES

Name

Gender:



School name


The teacher to fill the grid below after marking the learner's work.

Strand	Numbers	Measurement	Geometry
Question numbers	1-6	7-9	10
Total Marks	36	12	2
Total Marks			

correct

A. Numbers (10marks)

1. Arrange from the smallest to the biggest (1mk)
97, 107, 65, 360, 630, 172,

2. What is the next number in the pattern? (1 mk)
75, 70, 65, 60, 55, 


3. Write in words and symbols (5marks)

(a) 0] _____

(b) Seventy five _____

(c) $\overset{1}{Z}$ _____

(d) 699

(e) Two hundred and sixty eight 

4. Place value (5marks)

(a) 73 = _____ hundreds _____ tens _____ ones.

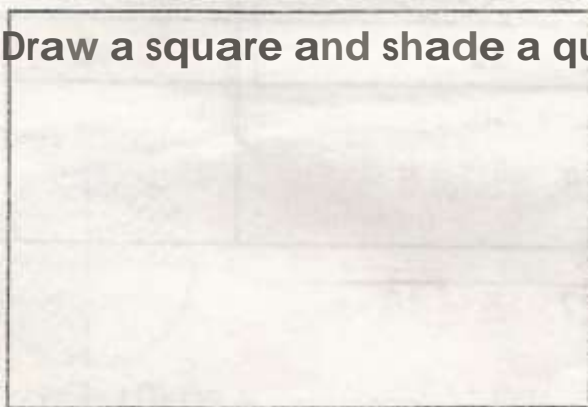
(b) 904 = _____ hundreds _____ tens _____ ones.

(c) 89 = _____ hundreds _____ tens _____ ones.

(d) _____ = 8 hundreds 2 tens 5 ones.

(e) _____ = 0 hundreds 3 tens 1 ones.

5. Draw a square and shade a quarter (2marks)



i 14A ± 429) **10** --

$$\begin{array}{r} 7. \quad \overline{967} \\ +43 \\ \hline \end{array}$$

$$\begin{array}{r} 8. \quad \overline{800} \\ +700 \\ \hline \end{array}$$

$$\begin{array}{r} 9. \quad \overline{708} \\ +435 \\ \hline \end{array}$$

10. Jane had 840 goats. She bought 160 more goats. How many goats did she have altogether? (2marks)

$$\begin{array}{r} 11. \quad \overline{841} \\ +9 \\ \hline \end{array}$$

$$\begin{array}{r} 12. \quad \overline{818} \\ +38 \\ \hline \end{array}$$

13. $165 + 165 = \text{--- ---}$

$$\begin{array}{r} 14. \quad \overline{76} \\ -34 \\ \hline \end{array}$$

$$\begin{array}{r} 15. \quad \overline{675} \\ -263 \\ \hline \end{array}$$

16. $89 - 51 =$

17. $929 - 606 =$

$$\begin{array}{r} 18. \quad \overline{72} \\ -19 \\ \hline \end{array}$$

19. $40 - 8 =$

20. $38 - 4 =$

21. Karimi bought 369 apples. She sold 200 apples. How many apples was she left with?

22. which one is smaller } or } ? =

23. $7 + 7 + 7 + 7 = 7 \times$

26. 7 - 5

24. • , - 7

28. $32 \div 8 =$

25. $10 \times 5 =$

27. $6 \quad | \quad 18$

29. $5 \quad | \quad 15$

SO **OOO** 0 0 0 0 0 0 0 0 0
 0 0 0 0 0 0 0 0 0 0 0 0

_____ x - - - - -

- 31. Share 10 bananas among 5 girls. Each girl will get _____ bananas.
- 32. One year has _____ months.
- 33. _____ is the first day of the week.
- 34. 2 weeks has _____ days.
- 35. **What is the time? (2mks)**
 (a) _____ (b) _____

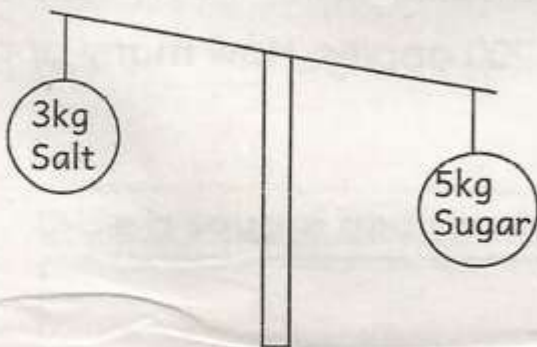
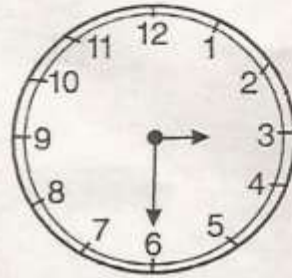
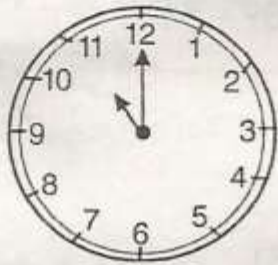
- 36. Tom had sh. 500 note. She bought a shirt for sh. 200. What was her balance? _____
- 38. Which is heavier sugar or salt?

40. $49\text{kgs} + 10\text{kgs} =$ _____ kgs.

TW-006

4

MATHEMATICAL ACTIVITIES GRADE. 3



39. What fraction is Unshaded?

