

# FRONTRUNNER EXAM

## STANDARD FIVE 2021

### SOCIAL STUDIES & RE

(\$

FRONTRUNNER 007

Time: 2 Hrs 15Mini

Use the map of Vimo Area to answer questions 1-7

### VIMO AREA

### KEY

N  
I 1

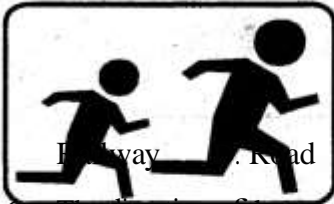
W&A  
g  
I

●  
60

- be** Tarmac Road
- W12** Ranch
- CD** Cattle Dip
- €** Quarry
- I** School
- O** Mosque
- ll** Scrubs
- TT** Tea Plantation
- Fishing Viage**

Scale: 0 1 2 3 4 5 6 7 8 9 10  
4 | 4 | | | | 1 | ] .Km

1. The **MAIN** factor that has influenced population distribution in Vimo area is  
A. River B. Religion C. Transport D. Farming
2. Which one of the following economic activities is **NOT** carried out in Vimo area?  
A. Mining B. Fishing C. Farming D. Lumbering
3. The people of Vimo area are **LIKELY** to be  
A. Pagans B. Christians C. Muslims D. Hindus
4. The climate of the North Eastern part of Vimo area is  
A. Hot and dry B. Cool and wet  
C. Cool and dry D. Hot and wet
5. The **MAIN** means of transport in Vimo area is  
A. Air B. Water  
C. \_\_\_\_\_
6. The following language groups in Kenya originated from Congo forest **EXCEPT**?  
A. Pokomo B. Taita C. Borana D. Abagusi
7. Natural forests that grow along the river valleys are known as  
A. Vegetation B. Marine forest  
C. Man made forest D. Natural forest
8. The relief feature below is called  
**EEEEFI**  
A. Plateaus B. Escarpment


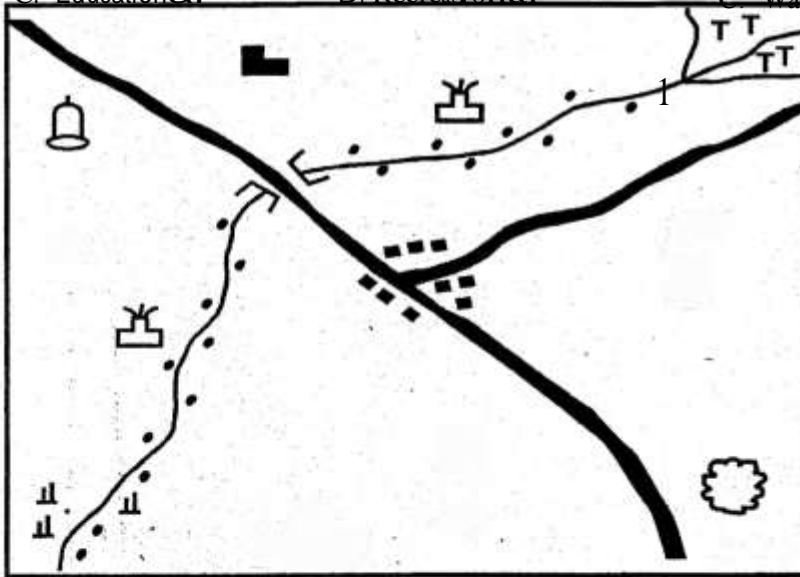


- C. The Rift Valley
- D. A hill

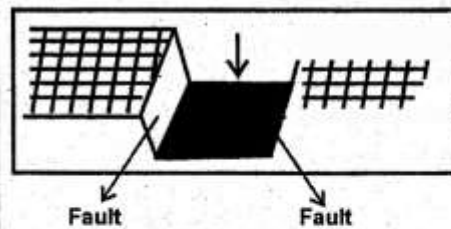
6. The direction of the quarry from the Bridge is  
 A. South East      B. North West  
 C. South West      D. North East

7. Which one of the following services should be immediately introduced in Vimo area?  
 A. Religious      B. Health  
 C. Educational      D. Recreational

11. In County government the head of county executive committee is  
 A. Governor      B. Speaker  
 C. Ward representative      D. Senator



Social Studies 5



12. Which one of the following industries is **NOT** a service industry?

- A. The stock market      B. Banking  
C. Hotel                      D. Textile

13. The title for Ameru religious leader was

A. Ntiba                      B. Njuri Ncheke  
C. Mugwe                    D. Nkomango

14. \_\_\_\_\_ is a staple good in Kenya

A. Vegetable    B. Maize    C. Rice    D. Banana

15. The following are climatic regions of Kenya **EXCEPT**

A. Mountain                  B. Hot and wet  
C. Cool and wet              D. Wet and dry

16. A dance of beds called tigo was traditionally performed by \_\_\_\_\_

- A. Women                      B. Girls  
C. Men                         D. Young men and women

17. The following are forms of child abuse. Which one is **NOT**?

- A. Bullying                    B. Doing some house duties  
C. **Early** marriage          D. Use of harsh language

18. The army of the Abawanga was called \_\_\_\_\_

- A. Nabongo                  B. Orkoiyot  
C. Wanga                      D. Olukuyaba

19. Which of the following factors are mainly responsible for high population density in Kisumu?

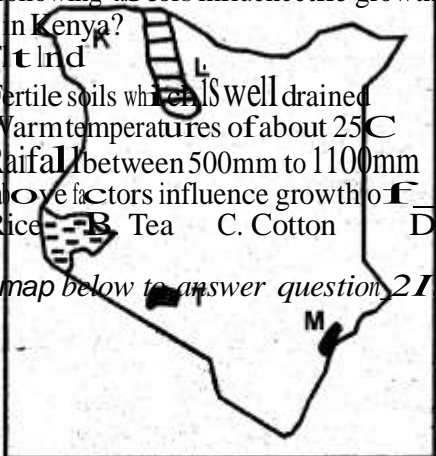
- A. High rainfall and fertile soils    B. Growth of towns  
C. Mining                          D. Government

20. The following factors influence the growth of a cash crop in Kenya?

- (i) Fertile soils which are well drained  
(ii) Warm temperatures of about 25°C  
(iii) Rainfall between 500mm to 1100mm  
(iv) The above factors influence growth of \_\_\_\_\_

- A. Rice    B. Tea    C. Cotton    D. Wheat

Use the map below to answer question 21 to 24



21. The physical feature found at the place marked K is called

- A. Awara plain                  B. Chalbi desert  
C. Merti plateau                D. Lotikipi plain

22. The **MAIN** form of transport from the mining area marked T is

A. Railway    B. Air    C. Road    D. Pipeline

23. The mineral mined at Misamis using method called

A. Dredge mining              B. Evaporation  
C. Open-cast mining          D. Adit mining

24. The **MAIN** type of fish caught in the place marked L is

A. Tilapia    B. Mud fish    C. Nile perch    D. Tuna

25. Mekatilili wa Menza was arrested and deported to

\_\_\_\_\_ by the British colonialists.

- A. Gusii    B. Taita    C. Uganda    D. Nairobi

26. The following are conditions for being a Kenyan citizen.

- (i) Has one parent as a Kenyan citizen  
(ii) Lived in Kenya for at least seven years  
(iii) Has knowledge of Kiswahili and English

(iv) Has good character

These are conditions for being a Kenyan citizen through

- A. **Dual** citizenship              B. Registration  
C. Birth                              D. Naturalization

27. Which one of the following is **NOT** a traditional method of teaching?

- A. Imitation                      B. Apprenticeship  
C. Reading                        D. Stories

28. The following are causes of disagreement among pupils. Which one is **NOT**?

- A. Not sharing playing materials  
B. Unfair punishments  
C. Taking of their pupils' things  
D. Missing classes

29. The Ex-officio member of parliament is \_\_\_\_\_

- A. Attorney General              B. Speaker  
C. President                        D. Chief Justice

30. The weather instrument is for measuring \_\_\_\_\_

- A. Temperature  
B. Speed of wind  
C. Direction of wind

D. Air pressure

31. Population density can be described as \_\_\_\_\_  
A. wide    B. small    C. few    D. medium
32. Cultural artifacts were made from the following materials **EXCEPT?**  
A. Wood    B. Stone    C. Iron    D. Clay
33. The main problem facing wildlife in Kenya is \_\_\_\_\_  
A. Drought    B. Poaching  
C. Inadequate funds    D. Fire outbreaks

Social Studies 5

34. Which one of the following was an item of trade exchanged at Masaku's place?  
 A. Tobacco    B. Salt    C. Rice    D. Animals
35. The following are cardinal point of a compass. Which one is **NOT**?  
 A. West    B. North East    C. East    D. South
36. The following are Coastal Bantu which one is **NOT**?  
 A. Pokomo    B. Taita    C. Kambe    D. Galla
37. The **MAIN** cause of road accident in Kenya is  
 A. Unroadworthy vehicles  
 B. Poor states of road  
 C. careless **driving**  
 D. Overloading
38. One of the following is a national reserve in Siaya County. Which one is it?  
 A. **Ruma**    B. Saiwa swamp  
 C. Yallaswamp    D. Lake Kanyaboli
39. The spiritual leader among the Nandi community was called  
 A. Orkoiy **ti**    B. Wahinga  
 C. Nabong **o D**    D. Kuria
40. Small rivers that join to form large rivers are called  
 A. Distributaries    B. Tributaries  
 C. Streams    D. Seasonal rivers
41. Kisumu city mainly started as  
 A. Fishing village    B. Trading centre  
 C. Agricultural centre    D. Lake port
42. Which one of the following is **NOT** an importance of democracy in school?  
 A. Choosing of good leaders  
 B. Increasing strikes in school  
 C. Promote a sense of belonging  
 D. Promote respect
43. The following are causes of soil erosion **EXCEPT**  
 A. Overstocking    B. Monocropping  
 C. Reforestation    D. Deforestation
44. The **MAIN** economic activity among the Cushites is  
 A. Farming    B. Trading  
 C. Cattle keeping    D. Fishing
45. The County assembly is elected after \_\_\_\_\_ years.  
 A. 10    B. 4    C. 2    D. 5
48. The following are early forms of communication **EXCEPT**?  
 A. Posters    B. Messengers  
 C. Ululation    D. Whistling
49. Who among the following is not a member of county assembly?  
 A. Governor  
 B. Speaker  
 C. Member from the youth  
 D. Elected member from the wards
50. Which one of the following is **NOT** a type of soil?  
 A. Alluvial soil'    B. Fertile soils  
 C. Black cotton soils    D. Sandy soils
51. \_\_\_\_\_ is the condition of the atmosphere of a place at a particular time.  
 A. Climate    B. Relief    C. Weather    D. Altitude
52. Trade carried out between Kenya and other countries is known as  
 A. Domestic trade    B. Barter trade  
 C. Monetary trade    D. Foreign trade
46. Who was made a paramount chief during colonial rule?

53. The following are responsibilities of a Kenyan citizen. Which one is NOT?  
 A. Paying taxes                      B. Voting  
 C. Being loyal                         D. Being unfair
54. Which one of the following is NOT a way of applying democracy in school?  
 A. Choosing clubs  
 B. Sharing ideas  
 C. Nominating prefects  
 D. participating in making class rules
55. The following are causes of lawlessness EXCEPT  
 A. Patriotism                            B. Tribalism  
 A. Chief Waiyaki                      B. Koitalel  
 C. Muria                                 D. Masaku
47. One of the following is not a Kalenjin age-set. Which one is it?  
 A. Maina    B. Chonyi    C. Nyongi    D. Chumo
56. The traditional leader among the Giriama was \_\_\_\_  
 A. Orkoiyot                              B. Mkatili  
 C. Masaku                                D. Nabongo Mumia
57. The MAIN function of executive is to  
 A. Make laws  
 B. Implement government policies  
 C. Administer justice  
 D. Amend laws
58. Who among the following resisted colonial rule?  
 A. Masaku                                B. Waiyaki  
 C. Karuri Wagikure                    D. Nabongo Mumia
59. In Kenya the head of state is  
 A. Deputy president                    B. Governor  
 C. Prime minister                        D. President
60. The following are cities in Kenya EXCEPT ?  
 A. Kisumu    B. Nairobi    C. Eldoret    D. Mombasa

Social Studies 5



**CRE SECTION**

61. Our bodies are created and wonderfully designed by God in our mothers  
A. Fouse B. **Body** C. Womb D. Kitchen
62. Who among the following people accepted to sacrifice his son on the mountain?  
A. Abraham B. Isaac C. Jacob D. Joseph
63. Which one of the following statement is **TRUE** about Jacob? He  
A. Was sold by his brothers  
B. Went to Canaan with Lot  
C. Was the son of Noah  
D. Took his brothers birth right
64. Which one of the following commandments is the greatest?  
A. Honour your father and mother  
B. Love God with all your heart, soul and mind  
C. Remember the Sabbath day and keep it holy  
D. Do not covet your neighbours property
65. Who among the following people led the Israelites out of Egypt?  
A. Joshua B. Aaron C. Moses D. Joseph
66. Who among the following king was anointed by Samuel?  
A. Solomon B. Saul C. Ahab D. Jeroboam
67. Elkanah and Hannah were the parents of \_\_\_\_\_  
A. Nathan B. Solomon C. Eli D. **Musa**
68. Who among the following made a prophecy that Jesus would be born in Bethlehem?  
A. Micah B. Isaiah C. Jeremiah D. Ezekiel
69. Who among the following prophets disobeyed the commandment "Do not commit murder"?  
A. Saul B. Ahab C. Solomon D. Rehoborn
70. The wisemen from the East were led to where Jesus was born by \_\_\_\_\_  
A. Angel B. Shepherds C. Star D. Herod
71. The following statement was made by God during Jesus' baptism. Which one?  
A. "This is my own dear son, with whom I am pleased to listen to him"  
B. "You are my dear son, I am pleased with you"  
C. "The son of man must suffer and be rejected by elders"  
D. "You are God's Messiah"
72. Which one of the following statement is found in the prayer of the Apostles creed?  
A. "Give us this day our daily bread"  
B. "Glory to the father, to the son and to the Holy Spirit"  
C. "He shall come to judge the living and the dead"  
D. "Do not bring us to the test"
73. The two disciples of Jesus who were tax collectors are  
A. Andrew and Peter B. Judas and Thomas  
C. Phillip and Matthew D. James and John
74. Which one of the following is a fruit of the Holy Spirit?  
A. Wisdom B. Preaching C. Healing D. Humility
75. Which one of the following may cause a great conflict in the society?  
A. Self control B. Unselfishness  
C. Jealousy D. Kindness
76. Which one of the following is the first book in the New Testament?  
A. Matthew B. Mark C. Luke D. John
77. Who among the following people buried the body of Jesus?  
A. Simon of Cyrene B. Judas Iscariot  
C. Joseph of Arimathea D. Simon Peter
78. Easter Sunday every year is celebrated by Christians for it marks the  
A. Resurrection of Jesus B. Death of Jesus  
C. Birth of Jesus D. New year eve
79. Jesus was brought up in the city of \_\_\_\_\_  
A. Jericho B. Jerusalem C. Nazareth D. Bethlehem
80. Eternal life means life  
A. That starts after death  
B. Which has a beginning and an end  
C. That is enjoyed in heaven  
D. Which has a beginning but has no end
81. Which one of the following statements **BEST** shows how Christian should live well with other people?  
A. Respecting their neighbours property  
B. Stealing from members of the community  
C. Sharing what you have with your friends only  
D. Love your friends in the community and hate others
82. Which one of the following was a place of worship in the African traditional religion?  
A. Church B. Temples C. Mosques D. Shrines
83. Who among the following people are able to lead worship in BOTH Christianity and traditional African religion?  
A. Priests B. Wizards C. Witchdoctors D. Herbalists
84. Which one of the following is a way of worship in traditional African society and Christianity?  
A. Worshiping many gods  
B. Baptizing their members  
C. Offering animal sacrifices  
D. Showing respect to God
95. Your friend John always escapes from doing manual work in school. As a Christian what advice would you give him?  
A. To continue with the habit  
B. Threaten him that you will report him to the prefect  
C. Tell him the importance of work  
D. Chase him together with other pupils out of school
86. Jane a standard 5 is found stealing in class during lunch time by a class prefect. What action should a class prefect take?  
A. Share the loot with her  
B. Report the matter to the duty master  
C. Tell her to stop the habit  
D. Tell her to stop the habit

- D. Tell everybody about is
87. Your friend Lucy boasts in class that she is the toughest girl who is able to beat everyone in class. Your friend Lucy lacks \_\_\_\_\_
- A. Humility    B. Love    C. Charity    D. Faith
88. Irresponsible boy-girl relationship can lead to \_\_\_\_\_
- A. Happy marriage    B. Passing exams
- A. Genesis    B. Matthew
- C. Malachi    D. Revelation

- C. Contracting ST/AIDS    D. Happy life
89. Peter and Jane are friends. Which one of the following is a good quality that BOTH of them should maintain to remain good friends?
- A. Always telling the truth    B. Loving what is evil
- C. Being unkind    D. Being selfish
90. Missionaries came to Kenya so that they may \_\_\_\_\_
- A. Build the railway    B. Preach the gospel
- C. Build schools    D. Stop slave trade

Social Studies 5