

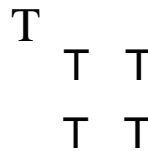

SCHOOL BASED ASSESSMENT TEST  
STANDARD FIVE YEAR 2020  
SOCIAL STUDIES & C.R.E

{5}

Time: 2hrs 15mins

TORO AREA

N



— 3 River and bridge

#4 Forest

TT T Tea

C.D Cattle dip

TT scrubs

. / % e=ave

■ sonool

Tarmac road

DD Permanent buildings

Study the map of Toro area and answer questions 1-7

- What is the direction of the mosque from the school?  
A North                      8. South  
C. West                      D. East
- The small channels joining R. Roto are known as  
A channel                      B. tributaries  
C. confluence                D. drainage
- The people in Toro area worship on which day

- River Roto flows from which direction?  
A North East                8. South East  
C. North West              D. South West
- The climate of South Western part of the map is **likely** to be  
A hot and dry                B. hot and wet  
C. cool and wet              D. dry
- Which of the following types of soil is a raw material for making pots?  
A Black cotton              8. Alluvial  
C.Loamy                      D. Sandy

of the week?

- A. Friday
- C. Sunday

- 8. Saturday
- D. Wednesday

9. Hills, lakes, rivers, mountains are collectively called

- A. drainage features
- 8. land marks
- C. creations
- D. physical features

4. How many tributaries are joining river Roto?

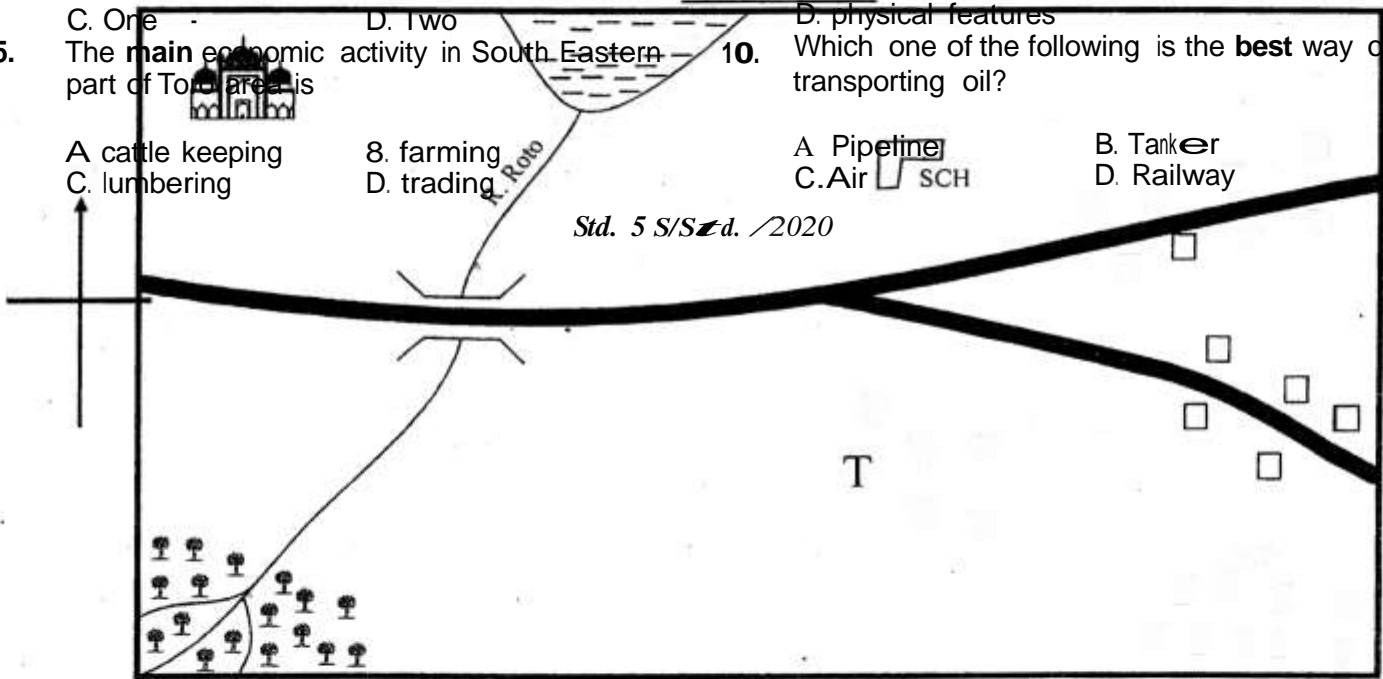
- A. Four
- B. Three
- C. One
- D. Two

5. The main economic activity in South Eastern part of Togo area is

- A. cattle keeping
- 8. farming
- C. lumbering
- D. trading

10. Which one of the following is the best way of transporting oil?

- A. Pipeline
- B. Tanker
- C. Air
- D. Railway



KEY:

<p>Blank space for student answers to questions 4-10.</p>	<p>Blank space for student answers to questions 4-10.</p>
---	---

11. Passing message from one person to another is called  
A. transport                      B. communication  
C. messaging                      D. trade
12. The type of trade where goods are exchanged for goods is  
A. currency trade                  B. goods trade  
C. barter trade                    D. money trade
13. The magnetic needle of a compass always points to the  
A. South                              B. North  
C. West                                D. East
14. Which of the following groups of people **does not** belong to the Bantu speakers?  
A. Aembu                              B. Akamba  
C. Kipsigis                          D. Abaluhya
15. Which cultural aspects are **not** supposed to be preserved?  
A. Teaching and learning good morals  
B. Protection of environment  
C. Female circumcision  
D. Traditional forms of entertainment
16. Which one of the following skills were taught to both boys and girls in the past?  
A. Iron working                      B. Cooking  
C. Herding                              D. Herbalist
- Use the diagram below to answer questions 17 and 18.**

**W**

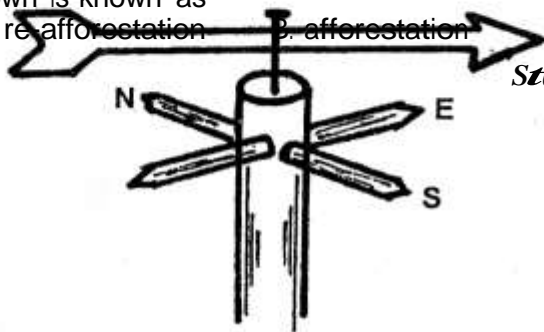
17. The weather instrument above is used to measure  
A. direction of a place from another  
B. the speed and direction of wind  
C. the strength of wind  
D. the direction of wind
18. In which direction is the wind blowing from in the above weather instrument?  
A. South                              B. West  
C. North                                D. East

Use the diagram below to answer questions 20 and 21.

X.

Z

20. The point marked Q is \_\_\_\_\_  
 A. South South East B. East South East  
 C. South East D. West South West
21. The needle point marked X is called  
 A. East B. South  
 C. West D. North
22. Cultural artifacts are preserved in one of the following areas. Which one?  
 A. Game parks B. Museum  
 C. National archives D. Bomas
23. Planting of trees where they have been cut down is known as  
 A. re-afforestation B. afforestation



Sst. 5 S/Szd. /2020

24. The most form of initiation practised by many communities in Kenya was  
 A. blood shedding B. teeth removal  
 C. tattooing D. paddocking
25. Which one of the following methods of fish preservation is the most expensive?  
 A. Sun drying B. Smoking  
 C. Refrigeration D. Salting
26. Love for one's country is known as  
 A. citizenship B. patriotism  
 C. loyalty D. democracy
27. The head-of the county assembly is the  
 A. county governor B. county speaker  
 C. county deputy speaker D. MCA
28. All of the following are found in Kenya flag. Which one is **not**?  
 A. Spears B. Shield  
 C. Lion D. Colours
29. Small rivers forming big rivers are called  
 A. streams B. valleys  
 C. distributaries D. tributaries
30. The growing of crops using water is  
 A. erosion B. migration  
 C. irrigation D. farming
31. When we vote for county representatives and governors, we are practising  
 A. justice B. democracy  
 C. lawlessness D. corruption

- C-----
32. The **best** way of solving problems is by \_\_\_\_.
- A. arguing                      B. fighting  
C. negotiation                D. revenging
33. A place where wild animals are kept is called
- A. lake                              8. garage  
C. store                            D. national park
34. People wear light clothes during the weather.
- A. hot                                8. cold  
C. cloudy                         D. rainy
35. The amount of rainfall is measured in
- A. degree celsius            B. cm  
C. km                                D. mm
36. The first deputy president of Kenya is .
- A. Raila Odinga                B. Isaac Ruto  
C. Kalonzo Musyoka        D. William Ruto
37. Which of the following is **not** an element of weather?
- A. Temperature                8. Rainfall  
C. Wind                            D. Longitude
38. Which one of the following is a pack animals?
- A. Cow                              8. Donkey  
C. Goat                             D. Cat
39. How many sub-counties makes up Kisii county?
- A. 47                                B. 7  
C. 10                                0. 4
40. Height above sea level is called
- A. valley                            B. altitude  
C. convectional                D. relief
41. The cheapest means of transport in our county is
- A. railway                         B. water  
C. road                              D. air
42. Rivers that flow throughout the year are called
- A. permanent                    8. dry rivers  
C. seasonal rivers              D. wet rivers
43. The cheapest way of transporting oil is by
- A. water                            8. road  
C. air                                D. pipeline
44. The low - lying area is called
- A. valley                            8. plain  
C. convectional                D. relief
45. How many counties make up a country
48. Which one of the following is a daily animal?
- A: Dog                              B. Donkey  
C. Cow                              D. Cat
49. Which one of the following is **not** an element of weather?
- A. Temperature                B. Rainfall  
C. Wind                            D. Longitude
50. The following are uses of forests. Which one is **not**?
- A. Attracting rainfall  
8. Encouraging wind erosion  
C. Reducing soil erosion  
D. A source of rivers
51. The first president of Kenya is
- A. Oginga Odinga              B. Raila Odinga  
C. William Ruto                D. Jomo Kenyatta
52. The Abagusii initiated young boys into men by
- A. removing teeth              B. circumcision  
C. cutting toes                  D. cutting hair
53. Rules made by the community are known as
- A. county laws                  B. parliamentary laws  
C. morals laws                  D. constitution
54. Which one of the following is **not** an element of a map?
- A. Frarfe                            B. Title  
C. Key                                D. Lake
55. Which among the following- ceremonies comes first in life?
- A. Death                            B. Birth
- Ke  
ny  
a?
- 56.
- 57.
- 58.
- 59.
- 60.

- C. otic citizen is the one who  
 A. disobeys the laws  
 B. goes to church always  
 C. loves his country  
 O. hates his country
- D. The growing of crops for home use is called  
 A. erosion B. subsistence  
 C. irrigation D. farming
- People who treat the sick using  
 herbal medicines are known as

- A. 40 B. 70  
 C. 10 D. 47

- A. newspaper B. koran  
 C. constitution D. encyclopedia

Std. 5 S/S Ed. /2020

46. Who among the following solves problems in the villages?  
 A. Elders B. Youth  
 C. Police D. Chiefs
47. The book containing the laws and order of Kenya is called

- A. alist  
 m C. blacksmith D. witchdoctors  
 edi The community which referred to its God as  
 cin Enkaiwas  
 em A. Nandi B. Maasai  
 en C. Agikuyu D. Abagusii
- B. Which of the following is **not** a right of a child?  
 A. To get education B. To life

- C. To be healthy D. To vote

- A. obey B. lack of respect in  
 C. hate D. assume

- C.R.E**
61. Which of these is a good effect of weather?  
 A. Withering crops  
 8. Drying clothes  
 C. Animals dying  
 D. Destroying properties
62. God wants us to \_\_\_\_\_ him all the times.

63. The second king of Israel was king  
A. Solomon                      B. David  
C. Saul                              D. Ahab
64. The ten commandments were given to Moses by God on mount  
A. Ararat                              8. Olives  
C. Moriah                              D. Sinai
65. I prophesied the birth place of Jesus. Who am I? Prophet  
A. Micah                              8. Hosea  
C. Zachariah                              D. Isaiah
66. Elikanah and Hannah were the parents of  
A. Jacob                              B. David  
C. Isaac                              D. Samuel
67. The rich woman from Thyatira who invited apostle Peter to her house was called  
A. Sarah                              8. Naomi  
C. Elizabeth                              D. Lydia
68. The first people to see baby Jesus were the  
A. shepherd                              B. Pharaohs  
C. disciples                              D. wisemen
69.                              and                              were sons of Zebedee.  
A. Peter and John                      B. James and Andrew  
C. John and James                      D. Thomas and James
70. A good leader should                              his people.  
A. serve                              B. be proud  
C. hate                              D. disrespect
71. Raising of Lazarus from the dead shows that Jesus had power over  
A. demons                              B. nature  
C. death                              D. sins
72. Among the following people, who made a wrong choice?  
A. Ruth                              8. Levi  
C. Saphira                              D. Solomon
73. Mary, Martha and Lazarus lived in  
A. Nazareth                              B. Egypt  
C. Jerusalem                              D. Bethany
74. How many people were saved from the flood during the time of Noah?  
A. 8                              8. 6  
C. 7                              D. 5
75. Who referred to Jesus as a lamb of God?  
A. Paul                              B. James  
C. Peter                              D. John the Baptist
78. How many times was Jesus tempted by the devil?  
A. 5                              8. 4  
C. 2                              D. 3
79. David was the youngest son of  
A. Jesse                              8. Solomon  
C. Saul                              D. Jacob
80. The believers in the early church were first called Christian at  
A. Tarsus                              8. Samaria  
C. Judea                              D. Antioch
81. Who among the following disciples tried to walk on water like Jesus?  
A. James                              B. Andrew  
C. Peter                              D. John
82. The last book in the new testament is called  
A. Genesis                              B. Revelation  
C. Deuteronomy                              D. Malachi
83. The father-in-law of Moses was called  
A. Jethro                              8. Caleb  
C. Aaron                              D. Joshua
84. One of the following is a Christian sacred place. Which one is it?  
A. Mosque                              B. Temple  
C. Schools                              D. Church
85. A service given without pay is called  
A. good service                              B. voluntary service  
C. home service                              D. family service
86. The organization that promotes peace among its member countries in Africa is called  
A. African Union                              B. United Union  
C. Police department                              D. K.D.F
87. The **main** work of elders in traditional African society was to  
A. protect the clan  
B. give sacrifices to God  
C. cook  
D. settle disputes
88. Which would be the best thing to do if you found 400 shillings during break time at school?  
A. Buy sweets to your friends  
B. Leave the money where you found it  
C. Take to your parents after school  
D. Take it to your class teacher
89. Which one of the following is the **best** way of

76. God promised \_\_\_\_\_ to the children that honour their parents.  
A. good performance    B. wealth  
C. long life                D. land
77. How many baskets remained after the feeding of 5,000 men?  
A. 7 baskets                B. 12 baskets  
C. 6 baskets                D. 5 baskets
90. \_\_\_\_\_ serving the Nation?  
A. Hiding law breakers  
B. Deceiving to be rich  
C. Paying taxes  
D. Going to church
90. When Jesus was born, He was laid  
A. on a bed                B. in a manger  
C. on the soil              D. in a room

*Std. 5 S/Stud. 12020*