

APRIL HOLIDAY ENGLISH HOMEWORK – CLASS 5

Read the passage below. Fill in the blank spaces with the correct words from the choices given below.

When things _____ (1) not _____ (2) the way you _____ (3) do you complain too _____? (4) If _____ (5) answer is yes, then you are _____ (6) people call a cry baby.

Judy is in _____ (7) in a boarding school. It is opening day and _____ (8) has _____ (9) her mother to supermarket _____ (10) some back-to-school shopping. Her mother can only _____ (11) to buy _____ (12) things for Judy. But Judy wants to _____ (13) the _____ (14) with many things she can do without including biscuits _____ (15) margarine and cakes.

- | A | B | C | D |
|------------------|---------------|---------------|---------------|
| 1. Aren't | are | is | was |
| 2. Go | gone | going | goes |
| 3. Want | wanting | wants | wanted |
| 4. Many | more | few | much |
| 5. A | the | an | then |
| 6. Which | whose | why | what |
| 7. Standard Five | Standard five | standard Five | standard five |
| 8. He | it | she | her |
| 9. Acompanied | accompanied | acompanied | accompanied |
| 10. With | on | by | for |
| 11. Afford | affect | effect | attempt |
| 12. Useless | unimportant | essential | unnecessary |
| 13. Feel | filled | file | fill |
| 14. Trolley | tlorrey | trolley | troey |
| 15. ! | , | ? | . |

Write the past tense of the underlined words in questions 16 - 18

16. Douglas forget his books at home. _____

17. The hunters creep towards the bush. _____

18. The thieves carry the box. _____

Choose the correct word to fill the blank spaces 19-21

19. He is suffering _____ malaria.

a. for

b. from

c. With

d. Of

20. Share the bananas _____ the two children.

- a. Among b. Along c. Between d. Across
21. The boy passed _____ the window.
- a. Art b. Into c. Over d. Through

Choose the correct word to complete the sentences in questions 22-24

22. These books belong to Jane, they are _____
- a. Janes b. Janes' c. Jane's d. Jane
23. The bags belong to the girls, they are _____
- a. Girls' b. Girl's c. Girls d. Girl
24. The _____ cars are new.
- a. Ladies b. Ladies' c. Ladys' d. Lady's

Choose the correct words to complete the sentences in questions 25-27

25. We walked _____ through the mud.
- a. Careful b. Carefully c. Carefull d. Carefully
26. The boy did the sum _____
- a. Easy b. Easily c. Easily d. Easely
27. We chattered _____ with other pupils.
- a. Happily b. Happly c. Happyly d. Happy

Choose the plural of the underlined words in questions 28-30

28. The speeding car landed in a ditch.
- a. Ditchies b. Ditches c. Ditch d. Ditchs
29. One traveler had a box.
- a. Boxes b. Boxies c. Bozen d. Boxess
30. A fox almost killed the goat.
- a. Foxen b. Foxies c. Foxens d. Foxes

Choose the correct conjunctions for the questions 31-33

31. _____ He was punished, he did not cry.
- a. But b. Although c. And d. Since
32. James did not do well in his exams _____ he was unwell.
- a. After b. Before c. Because d. While
33. We did not know _____ to go _____ not.

- a. Whether, or b. Either, or c. Very, but d. As, as

For questions 34, choose the odd one.

34. a. Swarm b. Litter c. Shoal d. Furniture

35. A bouquet of _____.

- a. Trees b. Chicks c. Cigarette d. Flowers
e.

36. A troop of _____.

- a. Lions b. Monkeys c. Thieves d. Bees

Complete the following question tags.

37. Jane can run very fast, _____

38. He lives here, _____

Choose the opposite of the underlined words in questions 39 and 40.

39. The actor pleased everyone.

- a. Actress b. Princess c. Actors d. Hostess

40. My cousin is a monk.

- a. Brother b. Sister c. Nun d. Heroine

Choose the correct tense to fill in the blank spaces in questions 41, 42 and 43.

41. Have you _____ my books?

- a. See b. Saw c. Seen d. Sees

42. She has _____ her work.

- a. Began b. Begun c. Begin d. Begins

43. Someone has _____ my pencil.

- a. Took b. Take c. Takes d. Taken

For questions 44-45 choose the correctly spelt words.

44. a. adres b. address c. matress d. unconcious

45. a. occured b. woolen c. receive d. recieve

For questions 46-47 choose the correct order.

46. Tom was bought _____ bag.

- a. Expensive, brown, polythene c. Polythene, brown, expensive
b. Brown, expensive, polythene d. Expensive, polythene, brown

47. It was a _____ day.

- a. Cloudy, cold, exam c. Cold, cloudy, exam
b. Cold, exam, cloudy d. Exam, cloudy, cold

For questions 48-50 choose the correct word.

- | | | | |
|-------------------|----------------|----------------|----------------|
| 48. a. cyied | b. cries | c. cring | d. crys |
| 49. a. stays | b. staid | c. stayes | d. staing |
| 50. a. transfered | b. transffered | c. transferred | d. transfering |

KAZI YA LIKIZO YA APRILI KISWAHILI – DARASA LA TANO

Chagua jibu sahihi kati ya yale uliopewa kukamilisha kifungu hichi.

Hapo awali _____ (1) ya _____ (2) wageni wowote katika bara _____
(3) la Afika, Watoto walikuwa na tabia _____ (4) sana. Sasa kwa nini tuache mkondo
_____ (5) Asilia na _____ (6) mambo yaliyo kuja na wageni _____
(7) hayatufai? Sikatai mabadiliko lakini tuchukue yanayofaa na tuyabeze yanayo tuangamiza.

Hakika _____ (8) mujibu wa utamaduni _____ (9), kwa nidhamu mwafrika
alikuwa akiongoza. Mtoto _____ (10) mkubwa na mkubwa _____ (11)
alimheshimu mdogo. Mtoto mdogo _____ (12) mtu mzima hata asiyemjua _____
_____ (13) ya tofauti ya umri wao. Mdogo alisimama na _____ (14) mkubwa
kwa unyenyekevu huku macho ame yaangusha chini kusema, “_____ (15)
baba/mama/babu/nyanya/kaka/dada”.

A	B	C	D
1. Mbele	nyuma	kabla	mbali
2. Kuja	kukuja	hawajaja	waje
3. Hii	huu	hili	hapa
4. Jema	mwema	mzuri	njema
5. Hiyo	huo	huyo	hilo
6. Kuomba	kuiga	kuigiza	kupata
7. Ambayo	ambao	ambazo	ambaye
8. Na	kwa	wa	mwa
9. Yetu	zetu	letu	wetu
10. Aliheshimu	aliheshima	alimheshimu	alimheshima
11. Aitha	aidha	idha	adha
12. Alikomwona	alimwona	aliona	alipomwona
13. Kwa sabu	kwasababu	kwa sababu	kuwasababu
14. Akasalimia	kusalimia	kusalimia	kumsalimia
15. Marahaba	hujambo	shikamoo	habari

16. Toa ngeli mwafaka za nomino ilizopewa.

- a) Majira _____
- b) Maarifa _____
- c) Maradhi _____

17. Majuto ni mjukuu huja kinyume ni _____
(methali, tashbihi) kitendawili)
18. Kitu kizima kina sudusi ngapi? _____

19. **Kitendawili:** nyama nje Ngozi ndani, jibu ni? _____
20. **Kanusha:** Miti imeanguka. _____
21. Mtoto mdogo ameanguka vibaya. **Onyesha kivumishi** katika sentensi uliyopewa.
22. Jina langu jingine ni bombo. Mimi ni vazi gani? _____
23. Chora maumbo haya:

Tao

Pia

Mehe

24. **Andika wingi:** Mtoto ameanguka vibaya.

25. Kifungu kimoja cha shairi huitwa _____

26. **Andika kwa wingi:** Mfuko uliraruka.

27. Ugonjwa wa kutapika na kuendesha ni _____

28. Jina jingine la sidiria ni _____

Tumia kiulizi “-pi”.

29. Mzee _____ aliyekuita?

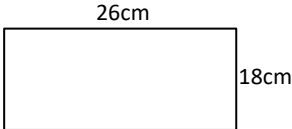
30. Mkono _____ uliovunjika?

APRIL HOLIDAY MATHEMATICS HOMEWORK – CLASS 5

1. What is the place value of digit 4 in the sum of 3262 and 235?
2. **Write the following in figures.** Three Hundred and fifty four Thousand, seven Hundred and seventy one.
3. Round off 48762 to the nearest thousands.
4. Divide 2744 by 56.
5. Find the L.C.M. of 36 and 24.
6. What is the G.C.D. of 18, 12 and 24.
7. Work out:

	M	CM
	26	92
+	<u>44</u>	<u>56</u>
	<u> </u>	
8. Marvin had 200 shillings note. He wanted Sh. 40 coins. How many coins did he get?
9. 25 shirts cost Sh. 1800. What is the cost of one shirt?
10. Write 48 in Roman numbers.

11. **Work out:** 484 X 26
12. Change $\frac{16}{15}$ into mixed fraction.
13. The mass of a tin is 16kg. what is the mass of 215 such tins?
14. The sum of two numbers is 1000. If one of the numbers is 665, what is the other number?
15. Express 48 as a product of its prime factors.

16. Find the perimeter of the square whose side is 30cm.
17. There are 480 sweets in a packet. How many sweets are there in 27 packets?
18. A butcher slaughters 29 cows a day. How many days will it take to slaughter 377 cows?
19. Find the next number in this series.
1, 3, 5, 7, 9, 11, _____, _____
20. Write 0.004 as a fraction in its simplest form.
21. Express $\frac{23}{7}$ as a mixed fraction.
22. Find the value of X in;
 $4 \quad \underline{X}$
23. What is the next multiple of 8 after 32?
24. Write $\frac{18}{24}$ in simplest form.
25. Juliet cut 5 oranges into two pieces each. She also cut each of the pieces into two. How many pieces did she have altogether?
26. What is the perimeter of the rectangle below?

27. There are 3482 pupils in a school. If 1984 are girls, how many boys are in the school?
28. Write $2\frac{3}{10}$ as an improper fraction.
29. What is the sum of all prime numbers between 10 and 25?

$$5 = 10$$

30. Divide 2639 by 13.

31. Chege bought a packet of sweets to share equally with 25 friends. How many sweets were left if the packet had 435 sweets?

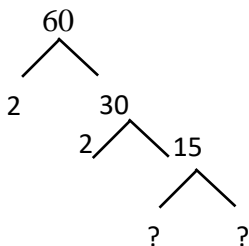
32. Work out:

$$6 \overline{) 20\text{hr } 30\text{ min}}$$

33. How many half litres are there in 4 litres?

34. Ngaru is 11 years old. His mother is three times older. What is their total age?

35. Complete the factor tree.

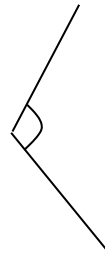


36. Mama Mboga had 408 potatoes. She arranged them in groups of four. How many groups did she make?

37. How many minutes are there in 2hrs 15 minutes?

38. Find the sum of the L.C.M. and G.C.D. of 9, 24, 36.

39. Name the angle shown below.



40. Divide 1404 by 9.

41. What is the sum of prime numbers in the numbers less than 20?

42. Cherop drinks $\frac{1}{2}$ litre of water every day.
How many litres does she drink in ten days?

47. What is the total value of digit 3 in 23467?

43. Thirty four pupils were to contribute a total of Sh. 1768. If they contributed equally, how much did each contribute?

48. Express 72 as a product of its prime factors.

44. Kibet has 25 hens and Karanja has 24.
Write the total number of hens in Roman numerals.

49. Work out:
 $18987 + 20 + 398400$

45. Write 0.75 as a fraction to its simplest form.

50. What is the sum of odd numbers between 20 and 30?

46. $4036 \div 34$

APRIL HOLIDAY SCIENCE HOMEWORK – CLASS 5

1. Which is the best soil for farming? _____
2. Which soil easily becomes waterlogged when it rains? _____
3. The best soil for modelling pot is? _____
4. The roughness and smoothness of soil is known as? _____
5. List two characteristics of loam soil.
 - i.) _____
 - ii.) _____
6. Fish breath through _____
7. Name three examples of fish.
 - i.) _____
 - ii.) _____
 - iii.) _____
8. Name a reptile that changes its colour. _____
9. A rain gauge measures the amount of _____
10. Name the three main parts of a wind vane.
 - a) _____
 - b) _ c) _____
11. Write five materials required when making a simple wind vane.
 - a) _____
 - b) _____
 - c) _____
 - d) _____
 - e) _____
12. Name four conditions necessary for plants to make food.
 - i.) _____
 - ii.) _____
 - iii.) _____
 - iv.) _____
13. Plants loose excess water through small holes on their leaves called _____
14. The main function of the roots of a plant is to _____
15. Name five external parts of a plant:
 - i.) _____
 - ii.) _____
 - iii.) _____

iv.) _____

v.) _____

16. The process by which green plants make their own food is called _____

17. Name two none-flowering plants:

a) _____

b) _____

18. Mushroom reproduce through the _____

19. Name two examples of fungi:

i.) _____

ii.) _____

20. Name plants that reproduce through cones.

i.) _____

ii.) _____

21. Letter 'A' in the abbreviation AIDS stands for **Acquired** which means

22. The date after which medicine should not be used is called the _____

23. The second stage of HIV infection is the _____

24. Name two signs of AIDS:

i.) _____

ii.) _____

25. The third stage of HIV infection is known as _____

26. Name two ways in which HIV cannot be transmitted.

i.) _____

ii.) _____

27. The other name for the incubation stage is _____

28. HIV can be passed from a mother to a baby in two ways. Which ones?

a) _____

b) _____

29. Some animals can be infected by HIV. True or false. _____

30. Name two fluids that transmit HIV.

i.) _____

ii.) _____

31. AIDS in full is _____

32. The letter 'I' in the abbreviation HIV stands for _____

33. Name two chemicals used at home.

i.) _____

ii.) _____

34. Give a reason why we should not spray chemicals against the wind.

35. Name two places where medicine should be stored.
i.) _____ ii.) _____
36. Medicines used to relieve pain are called _____
37. What is a dosage? _____
38. The movement of air in and out of the body is called _____
39. Auma chewed a piece of meat for some time and then swallowed it. In what part of the digestive system did the digestion of the meat start? _____
40. Proteins are digested in the? _____
41. The breakdown of food begins in the _____
42. Name two support organs of the gut that produce digestive juices.
i.) _____ ii.) _____
43. What is the function of hydrochloric acid in the digestion of food? _____

44. The part of the breathing system that separates the lungs from the abdomen is called the _____
45. Name two gases involved in breathing.
i.) _____ ii.) _____
46. List three functions of the nose in the breathing system.
i.) _____
ii.) _____
iii.) _____
47. The two substances found in foods that keep the body healthy are called?

48. The amount of rainfall is measured in _____
49. Animals that feed on vegetable materials only are called the _____
50. A rain gauge should be dug 15cm underground in order to _____

APRIL HOLIDAY SOCIAL STUDIES HOMEWORK – CLASS 5

1. Give three uses of soil.
 - i.) _____
 - ii.) _____
 - iii.) _____
2. Define soil erosion. _____

3. Which soil encourages development of a swamp? _____
4. Write down three examples of hard wood trees.
 - i.) _____
 - ii.) _____
 - iii.) _____
5. Hills that are found in the Nyika plateaus and have resisted erosion are called? _____

6. Planting of trees where they have never been planted before is called _____
7. Lotikipi plains are located in _____ region.
8. Which is the largest lake in Kenya? _____
9. A high flat land is called? _____
10. Chicken kept for meat are called? _____
11. The movement of goods and people from one place to another is described as?

12. Iraaw, Dahalo and Gabbra have one thing in common. These communities listed above are?

13. A set of rules used to govern a country are called? _____
14. Kenya got independence in _____
15. A location is headed by a? _____
16. The climate conditions of the desert can be described as _____

17. Which country neighbours Kenya to the East? _____
18. The side of the mountain that experiences a lot of rainfall is called? _____

19. Nyika is a Kiswahili word meaning? _____
20. On 1st May every year in Kenya we celebrate? _____

21. The imaginary lines used to determine time are called? _____
22. The type of vegetation found along the coastal parts of Kenya is _____

23. A group of people with the same forefather is known as _____

24. Name the salty water lakes in Kenya.

- i.) _____
- ii.) _____
- iii.) _____
- iv.) _____

25. Which weather instrument is used to measure the atmospheric pressure? _____

26. Name the four cardinal points of a compass.

- i.) _____
- ii.) _____
- iii.) _____
- iv.) _____
- v.) _____

27. Which colour of our National flag indicates that Kenyans fought for independence?

28. The second vice president of Kenya was? _____

29. The traditional God of the Agikuyu community is? _____

30. Name the lakes that are found along the Rift Valley.

- i.) _____
- ii.) _____
- iii.) _____
- iv.) _____

31. People who were initiated almost at the same time belonged to the same _____

32. The weather instrument that is used to measure the direction of wind is _____

33. The biggest swamp in Kenya is _____

34. A governor is in charge of a _____

35. Define weather. _____

36. The biggest language group in Kenya is _____

37. Give four importance of vegetation.

- i.) _____
- ii.) _____
- iii.) _____
- iv.) _____

38. State 4 main language groups in Kenya.

- i.) _____
- ii.) _____
- iii.) _____
- iv.) _____

39. The Cushites are divided into two groups. These are:

- i.) _____ ii.) _____

40. Where did the ancestors of the Luo migrate from? _____

41. Name the three Nilotic language groups.

- i.) _____
- ii.) _____
- iii.) _____

42. Which type of soil is best for tea and coffee? _____

43. Name three coastal Bantus in Kenya.

- i.) _____
- ii.) _____
- iii.) _____

44. What is the main economic activity of the plain Nilotes. _____

45. Rivers that flow throughout the year are called? _____

46. Name three rivers that drain their water into Lake Turkana.

- i.) _____
- ii.) _____
- iii.) _____

47. Who was the first Prime Minister in Kenya? _____

48. Kenya became a republic in? _____

49. The most northly point of Kenya is a town called? _____

50. Name two drainage features.

- i.) _____
- ii.) _____

51. Give two reasons for migration of communities in the past.

- i.) _____
- ii.) _____

52. Which is the homeland of the River-lake Nilotes? _____

53. The most expensive means of transport in Kenya is? _____

54. Which mountain in Kenya is covered by snow on the top? _____

55. Name three factors that affect climate.

- i.) _____
- ii.) _____
- iii.) _____

56. Small rivers that feed the main one are called? _____

57. The instrument used to measure humidity is? _____

58. The love of one's country is called? _____

59. River Ewaso Nyiro North drains its water into the _____

60. Keeping of large numbers of animals in a small area is called? _____

APRIL HOLIDAY C.R.E. HOMEWORK – CLASS 5

1. The laws of God are called? _____
2. God gave Moses His law on Mount _____
3. List the Ten commandments in the order in which they were given.
 - a) _____
 - b) _____
 - c) _____
 - d) _____
 - e) _____
 - f) _____
 - g) _____
 - h) _____
 - i) _____
 - j) _____
4. The Ten Commandments are written in the book of _____
5. The story of creation is told in which book in the Bible. _____
6. Name the commandment that has the promise added.

7. Who is your neighbour? _____
8. List two commandments that David broke.
 - a) _____
 - b) _____
9. Name three commandments which king Ahab and queen Jezebel broke.
 - a) _____
 - b) _____
 - c) _____
10. _____ united the people of Israel with God on Mt. Sinai.

11. List the order of days of creation from day one.

a) _____

b) _____

- c) _____
- d) _____
- e) _____
- f) _____
- g) _____

12. Jesus performed His first miracle in? _____

13. Which prophet foretold the New Covenant which will be written on people's hearts?

14. Israelites were slaves in the land of? _____

15. Jesus said to His mother "He is your son" John 19: 26. Who was Jesus referring to?

16. Why are human beings special in the eyes of God? _____

17. Life starts as a _____ in the mother's womb.

18. List five effects of irresponsible boy/girl relationship. (5mrks)

- a) _____
- b) _____
- c) _____
- d) _____
- e) _____

19. The injured person in the story of the Good Samaritan was travelling from _____ to

20. List five fruits of the Holy Spirit.

- a) _____
- b) _____
- c) _____
- d) _____
- e) _____

21. The special meal Jesus shared with His disciples is called? _____

22. An agreement between God and man is called? _____

23. God gave man the responsibility to? _____

24. Jesus told the story of the Good Samaritan to teach about? _____

25. List three children of Noah.

- a) _____
- b) _____
- c) _____

26. List three miracles performed by Elisha.

- a) _____
- b) _____
- c) _____

27. The first five books of the Bible are called? _____

28. Our bodies are the _____ of the Holy Spirit.

29. List the two greatest commandments.

- a) _____
- b) _____