



# TIMER NATIONAL SERIES EVALUATION TEST STD 6 SOCIAL STUDIES & RE

{6}


CODE0062021

Time: 2 hrs 15 min

### AREA

Coffee %

Gava town



### KEY

Tarmac road

Muran road

River and bridge

Build-up areas

Fishing areas

Hospital

Police station

Beans



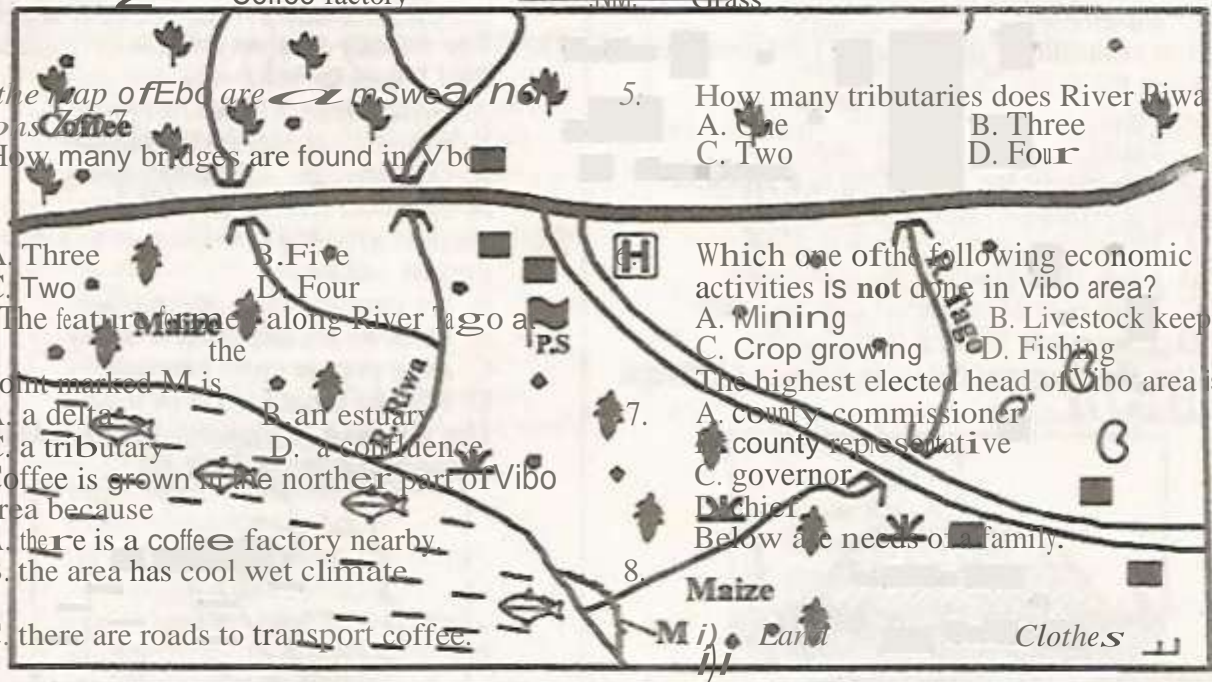
0 People's houses GO Governor's office  
 2 Coffee factory VIBO  
 KM Grass

Study the map of Ebo area and answer the questions.

- How many bridges are found in Vibo area?  
 A. Three B. Five  
 C. Two D. Four
- The feature formed along River Piwa at the point marked M is  
 A. a delta B. an estuary  
 C. a tributary D. a confluence
- Coffee is grown in the northern part of Vibo area because  
 A. there is a coffee factory nearby.  
 B. the area has cool wet climate.  
 C. there are roads to transport coffee.  
 D. there is market for coffee in the area.

- How many tributaries does River Piwa have?  
 A. One B. Three  
 C. Two D. Four

- Which one of the following economic activities is **not** done in Vibo area?  
 A. Mining B. Livestock keeping  
 C. Crop growing D. Fishing
- The highest elected head of Vibo area is a  
 A. county commissioner  
 B. county representative  
 C. governor  
 D. Chief



Scale: - - - - -

- The quickest means of transport from Gava to Zeba market is by using  
 A. railway B. road  
 C. water D. air

- iii) Bed y) Water
- Which group consists of secondary needs only?  
 A. (j) and (v) B. (iii) and (iv)  
 C. (i) and (ii) D. (iv) and (v)


9. Ludwig Krapf came to Eastern Africa in 1844 to
- look for trade goods.
  - introduce a new religion.
  - look for a sea route to India.
  - find the source of River Nile.

10. Which one of the following towns in Eastern

Africa was started by Arab traders?

- Arusha
- Junja
- Mombasa
- Eldoret

11. The community that entered Eastern Africa from the South is

- Ngoni
- Luo
- Saya
- Somali

12. Which one of the following is a problem facing industries in Eastern Africa?

- Producing goods of low quality.
- Lack of workers in the industries.

- High cost of imported raw materials.

- Poor roads leading to industries.

Use the diagram below to

answer questions

13 and 14.



13. The process through which the physical feature shown above was formed is

- folding and twisting
- faulting and uplifting
- erosion and deposition
- volcanicity and eruption

14. Which one of the following relief features

was formed through the process shown above?

- Mount Egon
- Mount Kenya
- Mount Kilimanjaro
- Mt. Ruwenzori

15. When Europeans partitioned Eastern Africa, Rwanda and Burundi were taken by

- paddocks are established
- meat is sold within the countries

19. A river in Eastern Africa that has an internal drainage pattern is

- River Tana
- River Rufiji
- River Ruvuma
- River Omo

20. When the Baganda people resisted European colonization they were led by

- Kabaka Mwangwa
- Kabaka Mutesa
- Chief Mkwawa
- Waiyaki wa Hinga

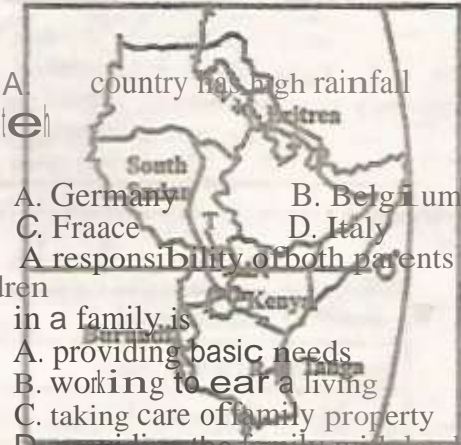
21. The trading company that was founded by Carl Peters in 1888 was

- British East Africa Company
- Royal Geographical Company
- German East Africa Company
- Imperial British East African Company

22. Banana growing is important in Uganda mainly because

- country has high rainfall

(e)



- Germany
- Belgium
- France
- Italy

16. A responsibility of both parents and children

in a family is

- providing basic needs
- working to earn a living
- taking care of family property
- providing the family with land

17. The settlement of the Luo people around Lake Victoria led to

- soil erosion in the area.
- introduction of a new religion
- establishment of towns in the area
- interaction with the Abagusii

18. Beef farming in both Kenya and Tanzania earns foreign exchange when

- grass is irrigated
- canned meat is exported



B. bananas are exported to Kenya.  
C. most people grow bananas  
D. it is the main source of food.  
Use the map of Eastern Africa below to answer questions 23 to 26.

P

23. The crop that is grown in the shaded area marked R is  
A. coffee                      B. sugarcane  
C. sisal                         D. bananas
24. The approximate position of the line of longitude marked P is  
A. 22°E                         B. 22°N  
C. 12°S                         D. 51°E
25. Which one of the following communities used the route marked T during the migration period?  
A. Abakuria                    B. Acholi  
C. Pokomo                     D. Sandawe
26. The relief feature marked L was formed, through the process of  
A. faulting                     B. folding  
C. twisting                     D. volcanicity
27. In the Nyamwezi traditional chiefdoms the duty of Mtwale was to  
A. lead the army              B. solve cases  
C. offer sacrifices             D. collect taxes
28. The Great North road passes through these towns except  
A. Mombasa                    B. Dodoma  
C. Arusha                      D. Khartoum

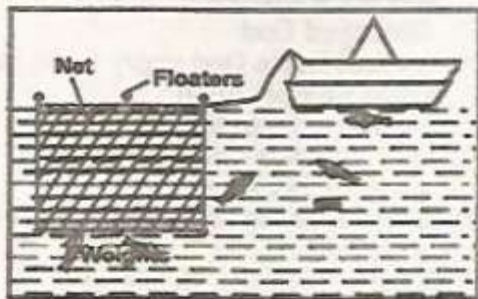
29. Wildlife conservation is important  
 A. wildlife products are sold.  
 B. hotels are built in game parks.  
 C. people promote their culture.  
 D. it is a source of income.
30. The British wanted to acquire Uganda and Sudan during the scramble for Eastern Africa because  
 A. they wanted to civilize Africans.  
 B. they wanted to have control of River Nile.  
 C. they wanted Africans to get jobs.

31. 37.

32. 38.

34.

35.



36.

39.

40.

An example of child abuse is when a child is  
 A. employed in a factory  
 B. told to clean utensils  
 C. made to go to school  
 D. given homework at school

The main means of transport in Eastern Africa is road transport mainly because roads are

- A. tarmacked everywhere  
 B. used by many vehicles  
 C. cheap to construct

D. people in the town

- ke Natron B. Lake Kyoga  
 C. Lake Kivu D. Lake Albert

A major problem experienced in all major towns in Eastern Africa is

- A. traffic congestion.  
 B. lack of electricity.  
 C. poor roads.  
 D. lack of people to work in industries.

The coming and settlement of Arabs on the coast of Eastern Africa led to

- A. building of a railway line.  
 B. establishment of schools.  
 C. spread of Islam along the coast.  
 D. new methods of farming.

A school routine enables a school to

- A. allocate time to school activities  
 B. build new classrooms  
 C. buy school textbooks  
 D. employ new teachers

High population in major towns is influenced by

- A. high rainfall B. availability of jobs  
 C. cool temperatures D. fertile soils

Use the diagram below to answer questions 36 and 37.

D. people in the town

The fishing method illustrated above is used to catch fish

- A. that swim fast B. in the deep sea  
 C. that are small D. near the seashore

The fishing method illustrated in the diagram

sho mbona  
wn C Julius Nyerere  
abo D. Ali Hassan Mwinyi  
ve  
is

A.  
net  
drif  
ting  
B.  
tra  
wli  
ng  
C.  
purs  
e-  
sein  
ing  
D.  
long  
lini  
ng  
Wh  
en  
Tan  
zan  
ia  
attai  
ned  
inde  
pen  
den  
ce  
in  
1961  
the  
first  
pres  
iden  
t  
was

A  
Abe  
id  
Shei  
kh  
Kar  
ume  
B.  
Osc  
ar  
Ka

- D. found everywhere
41. Trade in Eastern Africa is important because  
A. goods are sold at low prices  
B. the country produces similar goods.  
C. people get what they do not produce.  
D. people use less money.
42. Which country of Eastern Africa has the highest population?  
A. Tanzania B. Ethiopia  
C. Kenya D. Sudan
43. Northern parts of Sudan are sparsely populated due to  
A. low rainfall  
B. dense forests  
C. frequent flooding  
D. presence of tse tse flies
- Use the diagram below to answer questions 44 and 45.*



44. The diagram shown above represents formation of  
A. relief rainfall  
B. a seabreeze  
C. convectional rainfall  
D. a land breeze
45. The process taking place in the area marked W is  
A. freezing B. evaporation  
C. condensation D. cooling
- The Abawanga people responded to the coming of the British by  
A. attacking colonial posts.  
B. opposing British laws.  
C. running away from the Europeans.  
D. collaborating with the British.
47. Which group consists of mountains that have snow on their peaks?  
A. Kilimanjaro, Kenya, Ruwenzori  
B. Meru, Elgon, Menengai

C.  
Mor  
oto,  
Mar  
sabit  
,  
Lon  
gon  
ot  
D.  
Ol  
Don  
yo  
Oro  
k,  
Nya  
ring  
ong  
o,  
L  
o  
o  
l  
m  
a  
i  
a  
s  
i  
n

48. Before the Chagga people settled around Mount Kilimanjaro they lived in  
 A. Taita hills      B. South Africa  
 C. the Congo basin      D. the Nile valley
49. Below are facts about a town in Eastern Africa  
*i) It has textile industries*  
*ii) It has a small lake port*  
*iii) It lies along the Trans African highway*  
 The town described above is  
 A. Dar es salaam      B. Arusha  
 C. Addis Ababa      D. Jinja
50. In Kenya sisal is grown at  
 A. Kariandusi near Gilgil  
 B. Tirau in Meru  
 C. Vipingo  
 D. Kilif
51. Molo in Nakuru  
 When John Speke came to Eastern Africa in the 19<sup>th</sup> century he  
 A. discovered the source of River Nile.  
 B. stopped slave trade in the region.  
 C. found a sea route to India.  
 D. built a school at Rabai
52. In both Kenya and Tanzania maize is grown  
 A. only in large farms      B. as a food crop  
 C. under irrigation      D. for export
- A barometer at a weather station is used to measure  
 A. amount of rainfall  
 B. speed of wind  
 C. amount of water vapour  
 D. atmospheric pressure
54. Below are characteristics of a vegetation zone  
*i) Trees are tall*  
*ii) Trees are evergreen*  
*iii) Trees grow close*  
 The vegetation zone described above is  
 A. savannah woodland  
 B. savannah grassland  
 C. rain forest vegetation  
 D. semi-desert vegetation
55. Clan members are related by  
 A. blood      B. names  
 C. colour      D. marriage
56. The main factor that favours coffee growing in Ethiopia is  
 A. presence of good roads  
 B. wide market for coffee

- C. Making laws of the county.  
 D. Conducting elections in the county.
60. In a county, elections are held to elect  
 A. county commissioner  
 B. county representative  
 C. member of national assembly  
 D. governor

## SECTION II CHRISTIAN RELIGIOUS EDUCATION

61. Woman was created by God to be  
 A. man's worker  
 B. a servant  
 C. working in the garden of Eden  
 D. man's companion
62. When Abraham went to sacrifice his son God gave him a  
 A. lamb      B. ram  
 C. dove      D. goat
63. Joseph was sold as a slave by his brothers because they  
 A. hated him      B. wanted money  
 C. did not have food      D. loved him
64. When Moses was living in Midian he  
 A. married  
 B. received the daughter of Jethro.  
 C. killed an Egyptian.  
 D. choose Aaron to be a priest.
65. God appeared on top of Mount Sinai in the form of  
 A. a rainbow      B. a dove  
 C. a cloud      D. rain
66. How many soldiers did Gideon use to defeat

- C. D. favourable climate.
57. The administrative capital city of Rwanda is  
 A. Bujumbura      B. Asmara  
 C. Kigali      D. Kampala
58. Most industries in Eastern Africa are agricultural industries because  
 A. agriculture is the main activity.



67. Mideans? A. thirty thousand soldiers D. Thirty soldiers  
B. God rejected king Saul because he  
C. A. was old  
D. B. too young  
C. was not a wise king  
D. disobeyed God  
King Ahab made God angry when he  
A. killed prophet Eliah  
B. refused to build the temple  
C. took Naboth's vineyard  
D. offered a burnt sacrifice
68. Prophet Elijah was taken up to heaven in the presence of  
A. Elisha B. Moses  
C. Samuel D. Ananias
69. On the night Jesus was born Joseph and Mary had gone to Bethlehem to  
A. visit their relatives  
B. offer a sacrifice  
C. be counted  
D. attend the Passover
70. Three hundred soldiers  
C  
T

58. Which one of the following is done by a governor?  
A. Appointing county assembly speaker.  
B. Appointing officers to work for the county.

- B. there is cheap labour.  
C. agricultural products are cheap.  
D. there are good roads to transport goods
59. Which one of the following is done by a governor?  
A. Appointing county assembly speaker.  
B. Appointing officers to work for the county.

Stay Safe Wash your hands and wear a mask!  
4

60. Which one of the following is done by a governor?  
A. Appointing county assembly speaker.  
B. Appointing officers to work for the county.

61. Which one of the following is done by a governor?  
A. Appointing county assembly speaker.  
B. Appointing officers to work for the county.

62. Which one of the following is done by a governor?  
A. Appointing county assembly speaker.  
B. Appointing officers to work for the county.

63. Which one of the following is done by a governor?  
A. Appointing county assembly speaker.  
B. Appointing officers to work for the county.

64. Which one of the following is done by a governor?  
A. Appointing county assembly speaker.  
B. Appointing officers to work for the county.

65. Which one of the following is done by a governor?  
A. Appointing county assembly speaker.  
B. Appointing officers to work for the county.

66. Which one of the following is done by a governor?  
A. Appointing county assembly speaker.  
B. Appointing officers to work for the county.

1. John the Baptist told the people who came to him to  
A. present their tithes to the priests.  
B. repent their sins.  
C. pay their taxes.  
D. become his disciples.

STD 6 TIMER SST/RE 006 2021

67. Which one of the following is done by a governor?  
A. Appointing county assembly speaker.  
B. Appointing officers to work for the county.

68. Which one of the following is done by a governor?  
A. Appointing county assembly speaker.  
B. Appointing officers to work for the county.

69. Which one of the following is done by a governor?  
A. Appointing county assembly speaker.  
B. Appointing officers to work for the county.

70. Which one of the following is done by a governor?  
A. Appointing county assembly speaker.  
B. Appointing officers to work for the county.

71. John the Baptist told the people who came to him to  
A. present their tithes to the priests.  
B. repent their sins.  
C. pay their taxes.  
D. become his disciples.

72. Which one of the following is done by a governor?  
A. Appointing county assembly speaker.  
B. Appointing officers to work for the county.

72. When Jesus was fasting in the wilderness, the 'devil told him to  
A. walk on water  
B. cure a leper  
C. pay his tax  
D. change a stone into bread.
73. Jesus taught two brothers who were fishermen that he would teach them how to  
A. be fishers of men  
B. say the Lord's prayer  
C. pray  
D. look after sheep
74. The Good Samaritan helped the man beaten by robbers by  
A. treating his wounds  
B. giving him money  
C. taking him to his house  
D. praying for him
75. Jesus taught the parable of the sower seated  
A. in the temple      B. on a hill side  
C. in a boat          D. at a well
76.                      carried the cross for Jesus.  
A. Nicodemus  
B. John the baptist  
C. Joseph of Arimathea  
D. Simon of Cyrene
77. Which of the following events took place when Jesus died on the cross?  
A. A star appeared  
B. There was darkness  
C. Angels appeared  
D. The wisemen visited
78. **Thomas** did not believe that Jesus had risen because  
A. he had not seen **the** risen Christ.  
B. he had seen Jesus die on **the** cross.  
C. the other disciples had not told **him**.  
D. Thomas always doubted everything.
79. When Saul **was** on the way to Damascus he became  
A. lame                      B. blind  
C. dumb                     D. deaf
80. The main message in the book of Acts is  
A. journey of **th** Israelites  
B. miracles of **J**esus  
C. how the disciples spread the gospel  
D. parables of Jesus
81. Which one of **th** following **S** a fruit of the
84. People in traditional African societies reconcile with God when they  
A. call his name  
B. go to shrines and offer sacrifices  
C. pray to their ancestors  
D. get new names
85. Which one of the following moral values is taught to children in traditional African societies?  
A. History                      B. Wealth  
C. Respect                      D. Bravery
86. Kiptoo finds his two classmates quarelling over a textbook. As a **Christian** he should  
A. take the book away from them.  
B. report them to their parents.  
C. beat them  
D. find out the problem and solve it
87. Christian pupils can best use their free time to help the community by  
**Holy Spirit?**  
A. Faithfulness              B. Wsi dom  
C. Knowledge                D. Preaching
82. In traditional African communities, it is believed that when people die they

- A. cleaning the streets
  - B. sleeping at home
  - C. playing football
  - D. reading books
88. Children should not engage in immoral practices because
- A. only adults should do them
  - B. they break God's command
  - C. they will go to hell
  - D. they will be punished
89. Christians can best assist children who live in the streets by
- A. giving them jobs
  - B. taking them to their homes
  - C. putting them in children's homes
  - D. giving them money
90. Christianity in Kenya was introduced by

- A. societies they
- B. offer sacrifices to God
- C. shake hands
- D. wash their hands
- E. wear new clothes

- A. go to heaven
  - B. will resurrect
  - C. were all sinners
  - D. Live as spirits
83. When people sin in traditional African

- A. European missionaries
- B. Arab slave traders
- C. African chiefs
- D. ancestors

## SECTION B ISLAMIC RELIGIOUS EDUCATION

61. The surah which encourages us to sacrifice during Eid is
- A. Al-Inshirah
  - B. Al-Nasr
  - C. Al-kauthar
  - D. Al-asr
62. Al-Qadr means
- A. taking power
  - B. the pen
  - C. the dot

- D. revealed in madinah
64. Surah Al-Alace puts emphasis on
- A. knowledge
  - B. baadah
  - C. brotherhood
  - D. the last day

- D. the book
63. Surah Al-Alaq was
- A. revealed in the cave thaur
  - B. revealed in full
  - C. the start of prophethood



65. Arrange in correct order:  
 (i) *Iqraa warabikkal akkram*  
 (ii) *Iqraa Bismira bbikal adhi khalaq*  
 (iii) *Alladhi allama bil qalam*  
 (iv) *Khalaqalinsaana min alaq*  
 A. i, ii, iii, iv                      B. ii, i, iv, iii  
 C. ii, iv, iii                          D. ii, iv, i, iii
66. Tyn means the  
 A. holy book  
 B. olive tree  
 C. fig tree  
 D. important
67. Wahadhalbaladil amin is mentioned in surah  
 Tyn, the words refer to  
 A. Makkah                              B. Madinah  
 C. Jerusalem                          D. Baitul maqdis
68. Turi Siinin is the place where Nabi Musa  
 A. met fl - khidr  
 B. received wahyi  
 C. helped two ladies  
 D. killed an Egyptian unintentionally
69. **Mixing** good quality with poor quality goods is called  
 A. ribaa                                  B. ghusl  
 C. hoarding                              D. usury
70. The draft of hudai biyah was written by  
 A. Zaid                                    B. Ali bin ab  
 twalib  
 C. Umar                                  D. Masoud
71. Allah gave the mother of Nabii Musa  
 A. 1,4                                      B. 3  
 C. 1,6                                      D. 1,6
72. Ibaadah in lailatu! Qadr is equal to  
 A. almost 10 months                  B. almost 100 months  
 C. a life time                            D. 1000 months
73. Arrange the highlight of the story below in the right order.  
 (i) *Musa is asked to work for 18 years*  
 (ii) *One girl was asked to call Musa*  
 (iii) *Musa helps two girls*  
 (iv) *Musa is fired and rests under a tree*  
 A. i, ii, iii, iv                            B. iii, iv, ii, i  
 C. ii, iv, i                                D. iii, i, ii, i
74. A table full of food was a miracle of Nabii  
 A. Musa                                  B. Isa  
 C. Ibrahim                                D. Yunus
75. Nabi Ibrahim wanted to sacrifice his son in order to

78. The truth Nabi Musa learnt from Al-khidhr was  
 A. bravely                                B. knowledge  
 C. politeness                            D. patience
79. Which statement is **not true** about Friday prayers?  
 A. It is said at dhuhr time  
 B. It has adhan and iqamah  
 C. two khutbahs are said after swalah  
 D. it is a faridh prayer
80. Which one is **not** among the sacred months?  
 A. Ramadhan                            B. Dhul - Qadah  
 C. Rajab                                  D. Dhul - Hijjah
81. The month of Allah is  
 A. Ramadhan                            B. Dhul - Hijjah  
 C. Rabiul - awal                        D. Muharram
82. Umrah  
 A. is the same as hajj  
 B. must be performed during hajj  
 C. does not include staying at Arafah  
 D. cannot be performed during hajj
83. Which one of these is **not** a sunnah fast?  
 A. Mondays and Thursdays  
 B. Fasting in Ashura  
 C. Fasting in Rabiul Awwal  
 D. Fasting in Ramadhan
84. Who among the following is not cursed due to khamr? The one who  
 A. sells it  
 B. hides it  
 C. buys it  
 D. drinks it
85. The treaty of Hudai biyah was to last for  
 years.  
 A. 3                                        B. 5  
 C. 7                                        D. 10
86. After the first takbiirah in Eid prayer we say  
**more Takbiirah.**  
 A. 2                                        B. 3  
 C. 5                                        D. 7
87. In shawwal it is sunnah to fast  
 A. the whole month  
 B. obey Allah  
 C. please his wife  
 D. punish his son  
 E. learn to sacrifice

76. In the treaty of Hudaibiyyah, the prophet agreed not to be called the messenger of Allah because
- A. he wanted to draft the treaty
  - B. it was the way agreements were written those days.
  - C. suhail did not know how to read
  - D. all quraish insisted
77. Hiding goods in order to get more profit is
- A. Ribaa
  - B. Ghush
  - C. Usury
  - D. Hoarding
- B. any six days  
C. the first SIX days  
D. the last SIX days
88. How many idols were around the kaabah?
- A. 30
  - B. 360
  - C. 50
  - D. 100
89. Which is **not** true about how AIDS is spread through?
- A. Sexual intercourse
  - B. Sharing, cutting and piercing instruments
  - C. Shaking hands with those who have AIDS
  - D. Blood transfusion
90. Juma and Ali are friends. One day Juma discovered that Ali had stolen money from a pupil's bag. Juma should
- A. ask Ali to share the money
  - B. tell Ali to return the money to the owner
  - C. report the matter to the teacher
  - D. break off his friendship with Ali