

FRONTRUNNER EXAM

STANDARD SIX 2021

(6)

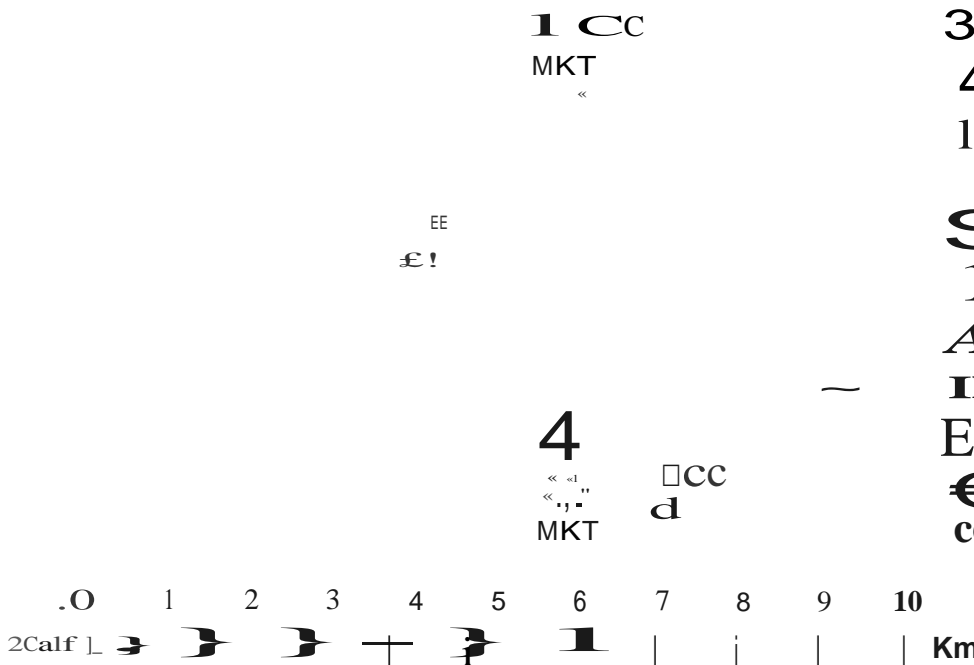
FRONTRUNNER 007

SOCIAL STUDIES & RE

Time: 2 Hrs 15Min

Use the map of Zimo Area to answer questions 1-7

ZIMO AREA



KEY

- Tarmac Road
- 3€ River & Bridge
- 4 Temple
- la School
- E Permanent Buildings
- \$ Forest
- 1 Scrubs
- A Saw Mill
- IKT Market
- EN Maize Plantation
- € Quarry
- CC Chief's Camp

1. River Zimo in the map flows from
 - A. North East
 - B. North West
 - C. South West
 - D. South East
2. The people of Zimo area are **LIKELY** to be
 - A. Hindus
 - B. Christians
 - C. Muslims
 - D. Pagans
3. The climate of the North Eastern part of Zimo area is
 - A. Cool and wet
 - B. Hot and wet
 - C. Cool and dry
 - D. Hot and dry
4. The settlement pattern in Zimo area is
 - A. Nucleated
 - B. Clustered
 - C. Linear
 - D. Dense
5. Zimo area is a
 - A. Sub-county
 - B. Location
 - C. Ward
 - D. Sub-location
6. Which one of the following economic activities is **NOT** likely to be found in Zimo area?
 - A. Trading
 - B. Lumbering
 - C. Farming
 - D. Fishing
7. The highest point in Zimo area is around the
 - A. Junction
 - B. Quarry
 - C. Forest
 - D. Maize farm
8. Which of the following statements is **TRUE** about the position of Eastern Africa?
 - A. It is bordered by Libya to the North East
 - B. It is bordered by Central African Republic to the West
 - C. Zambia and Mozambique border it to the South East
 - D. It is bordered by Red Sea to the North West



9. Which of these imaginary lines are used to give positions of places to the North or South?

- A. Boundaries
- B. Prime meridian
- C. Longitudes
- D. Latitudes

10. Which one of the following combinations consists of plain Nilotes only?

- A. Iraqw, Mbugu, Burugu
- B. Somali, Burji, Rendile
- C. Turkana, Njemps, Jie
- D. Lugbara, Luo, Dinka

beliefs of a school is called

- A. A routine
- B. A motto
- C. A diary
- D. A belief

12. Why do we need education as a secondary need?

A. To help us grow healthy and strong

- C. For protection from bad weather
- D. To look smart and loving

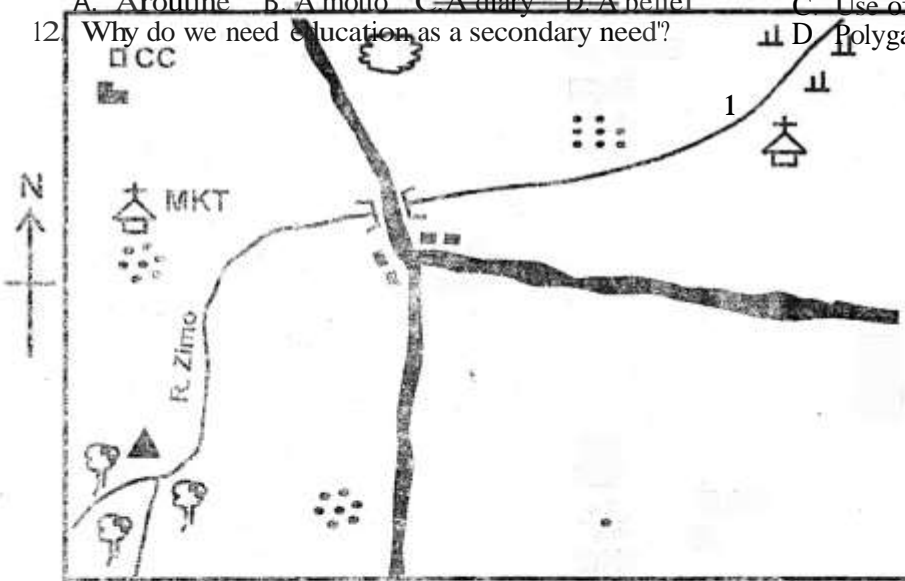
13. Anemometer is used to measure

- A. Strength of wind
- B. Speed of wind
- C. Direction of wind
- D. Air pressure

14. Which of the following is an aspect of culture that should NOT be encouraged?

- A. Proper dressing
- B. Caring for the needy
- C. Use of songs and wise sayings
- D. Polygamy

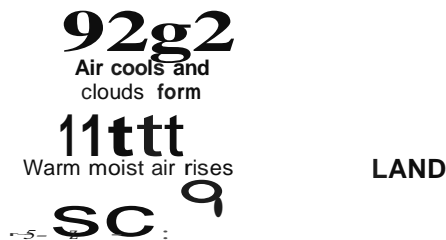
Social Studies 6



15. The following factors are necessary for the growth of a certain crop in Kenya
 (i) Warm climate
 (ii) Rainfall of over 500mm during growth
 (iii) Dry season during harvesting
 Which crop requires the above factors for growth?
 A. Cotton B. Wheat C. Tea D. Coffee
16. The **MAIN** sugarcane growing area in Eastern Africa is?
 A. Awendo B. Voi C. Kenana D. Nyamira
17. The Ameru community had a council of elders called
 A. Olukuyaba B. Ntuiko
 C. Njuri Ncheke D. Orkoiyot
18. Which of the following is **NOT** a responsibility of children in a family?
 A. Taking care of family property
 B. Being role models to other family members
 C. Respecting and loving their elders
 D. Going to school and getting education
19. Traditional clothes were usually made from
 A. Cartons B. Sisal C. Cotton D. Animal skin
28. Kenya was declared a British protectorate in which year?
 A. 1963 B. 1920 C. 1880 D. 1895
29. Which of these minerals is correctly matched with where it is mined?
 A. Salt Bamhuri
 B. Flourspar Kariandusi
 C. Soda ash Machakos
 D. Soda ash Kerio valley
30. The main problem facing wildlife in Eastern Africa is
 A. Pests and diseases B. Pollution
 C. Drought D. Poaching

Use the map of Eastern Africa below to answer questions 31–34

Use the diagram below to answer questions 20 - 21



20. The diagram drawn shows the formation of
 A. Convective rainfall B. Sea breeze
 C. Land breeze D. Relief rainfall
21. Which of these areas is **NOT** likely to receive rainfall as a result of the above?
 A. Mombasa B. Nyeri C. Zanzibar D. Kisumu
22. Which **ONE** of the following is an example of a service industry?
 A. Entertainment B. Soap making
 C. Milk processing D. Plastic making
23. Which of the following regions of Eastern Africa has low population density?
 A. Areas around lakes
 B. Coastal areas of Mombasa
 C. Highland areas of Kenya
 D. Central Tanzania
24. Block mountains are also known as
 A. Inselbergs B. Faults C. Horsts D. Escarpment
25. Which of these is the **MOST LIKELY** reason why people go to live in towns?
 A. To look for a good job
 B. To escape danger
 C. To get education
 D. To look for market for goods
26. Members of the same clan are related by
 A. Marriage B. Blood C. Adoption D. Love
27. The arm of government that makes and amends laws in Kenya is the

31. The town marked **Z** was colonized by
 A. British B. French C. Germanv D. Italian.
32. The town marked **Pis**
 A. Arusha B. Mogadishu
 C. Dar-es-Salaam D. Jinja
33. The language group that followed the route marked **Y** were **MAINLY**
 A. Pastoralists B. Cultivators
 C. Fishermen D. Traders
34. The region marked **XX** experiences which climatic condition?
 A. Desert B. Savannah
 C. Executive B. County officers
 D. Judiciary



- C. Equatorial D. Semi-desert
35. The **MAIN** inland fishing ground in Kenya is **S**
 A. Lake Victoria B. Indian Ocean
 C. Lake Naivasha D. River Yala
36. Which of the following is **NOT** a benefit of trade?
 A. It creates employment opportunities
 B. It promotes cooperation
 C. It leads to smuggling of goods
 D. Promotes growth of towns
37. Marine fishing can be practiced in the following countries **EXCEPT?**
 A. Uganda B. Tanzania C. Somalia D. Djibouti
38. Which of the following is the latest form of communication?
 A. Use of newspapers B. Postal services
 C. Use of internet D. Use of radios



Social Studies 6

39. Hot springs and Geysers are beautiful sceneries found in
 A. Pangani B. Olkaria
 C. Sultan Hamud D. Lake Victoria
40. Which of the following is **NOT** a function of the body in charge of elections in Kenya?
 A. Registering voters
 B. Counting votes cast
 C. Educating voters on their rights and responsibility
 D. Nominating candidates for various posts
41. Which of the following consist of people who resisted the Europeans
 A. Nabongo, Waiyaki wa Hinga
 B. Kabaka Mwanga, Koitalel samoei
 C. Laibon Lenana, Kabaka Mutesa I
 D. Mekatilili, Waiyaki wa Hinga
42. Judiciary is headed by _____
 A. Attorney General B. The president
 C. The prime minister D. Chief Justice
43. Road accidents in Kenya can be reduced by
 A. Obeying road signs
 B. Avoid driving in bad weather
 C. Educating road users on safe use of roads
 D. Removing unroadworthy vehicles from roads
44. County laws are made by _____
 A. The county Assembly B. The governor
 C. The National Assembly D. The president
45. The first governor to Kenya was
 A. William Mackinnon B. Sir Hayes Saddler
 C. Carl Peters D. Edward Northey
46. The Nandi leader Koitalel was tricked and killed by the
 A. The Germans B. The Portuguese
 C. The British D. Italians
47. Which of the following was a negative effect of colonial rule in Kenya?
 A. It led to establishment of political boundaries
 B. It led to urbanization
 C. It brought an end to slave trade
 D. It led to introduction of new crops
48. The following are contributions of a certain leader
 (i) He encouraged his people to stay as one nation
 (ii) He believed in sharing resources
 (iii) He was among the founder members of E.A.C
 (iv) He led his country to independence
 The above descriptions suits
 A. Masaku B. Jaramogi Odinga
 C. Haille Selassie D. Julius Nyerere
49. Which of these soil types are formed from weathered lava?
 A. Volcanic soils B. Sandy soils
 C. Black cotton soils D. Loamy soils
50. An object or a tool that was made in the past and is historically important is called _____
 A. Ornament B. Culture
 C. Interaction D. Artefacts
51. Which of the following is **NOT** a responsibility of a

52. Which of the following is a basic human right?
 A. Right to equality before the law
 B. Right to shelter
 C. Freedom of expression
 D. Freedom of movement
53. Which of the following factors promotes peace in a society?
 A. Corruption B. Tribalism
 C. Conflicts D. Games and sports
54. Amolo picked some money in the school field while playing. The **BEST** action to take is
 A. Hide it in her pocket
 B. Pick it and take to her mother
 C. Take it to the teacher on duty
 D. Ignore it
55. People born of Kenyan parents are citizens by
 A. Naturalization B. Birth
 C. Registration D. Origin
56. When we elect others to represent us in decision making, we practice?
 A. Indirect democracy B. Direct democracy
 C. Participatory democracy D. Rule of law
57. The highest court in Kenya is
 A. magistrates B. Court of Appeal
 C. High court D. Supreme court

Kenyan citizen?

- A. Obeying the laws
 B. Conserving the environment
 C. Stealing peoples property
 D. Taking part in elections

58. Who of the following **DOES NOT** belong to the Executive?
A. Members of parliament B. President
C. Vice president D. Public servants
59. Which of the following is **NOT** a member of FIGAD?
A. Somalia B. Tanzania C. Djibouti D. Eritrea
60. When was African socialism as a philosophy adopted?
A. 1960 B. 1978 C. 1965 D. 1963

**CRE
SECTION**

61. Which one of the following is true about creation of human beings?
A. Eve became a suitable companion for Adam
B. God formed a man out of the woman's rib
C. Animals were created in the image of God
D. Birds were made superior to all other creatures
62. During the time of Noah, God punished the people by using?
A. Rainbow B. Fire
C. Flood D. Ark
63. The call of Abraham took place when he was living in?
A. Bethel B. Haran
C. Canaan D. Ur
64. Which one of the following is TRUE about Joseph?
A. He led the Israelites into the promised land
B. God gave him the Ten Commandments
C. He led the Israelites out of Egypt
D. His father loved him more than his brothers
65. The Israelites celebrated the Passover to remind them about?
A. The miracles Moses performed before Pharaoh
B. How they crossed the Red sea with Moses
C. How God saved them from slavery in Egypt
D. The long journey they covered to Canaan

66. Which one of the following commandments has a promise?
 A. Do not commit murder
 B. Respect your father and mother
 C. Observe the Sabbath and keep it holy
 D. Worship no god but me
67. Which one of the following was the second king of Israel?
 A. Solomon
 B. Saul
 C. David
 D. Ahab
68. Who among the following prophets anointed Saul as king of Israel?
 A. Samuel
 B. Nathan
 C. Elijah
 D. Elisha
69. Gideon was able to defeat the Midianites when he was led by _____
 A. The prophets of God
 B. The angel of God
 C. The Holy Spirit
 D. His good friends
70. The story of the birth of John the Baptist was announced when Zachariah was _____
 A. Receiving the Ten Commandments
 B. Preaching in the temple
 C. Visiting the temple
 D. Visiting the temple
71. Who among the following presented gifts to baby Jesus?
 A. Herod
 B. The shepherds
 C. The wise men
 D. The kings
72. Jesus was present in the temple when he was _____
 A. Eight years old
 B. Twelve years old
 C. Thirty years old
 D. Thirty three years old
73. From the feeding of the five thousand people, we learn that _____
 A. Death
 B. Life
 C. Nature
 D. Satan
74. Who among the following disciples of Jesus was a tax collector?
 A. Peter
 B. John
 C. James
 D. Matthew
75. Which one of the following is a fruit of the Holy Spirit?
 A. Faith
 B. Faithfulness
 C. Wisdom
 D. Prophecy
76. Jesus Christ grew up in the town of _____
 A. Nazareth
 B. Jerusalem
 C. Jericho
 D. Bethlehem
77. Which one of the following statements is found in the Gospel of Matthew?
 A. He ascended into heaven
 B. Lead us not into temptation
 C. Blessed is the name of the Lord
 D. Give us this day our daily bread
78. Which one of the following is the first book in the New Testament?
 A. Matthew
 B. Mark
 C. Luke
 D. John
79. Which one of the following statements is TRUE about Paul? He
 A. Was the first Christian martyr
 B. Denied Jesus Christ three times
 C. Baptised Jesus in the Jordan River
 D. Was appointed to preach to the Gentiles
80. Which one of the following activities was carried out by Christians in the early church?
 A. Punishing believers in the temple
 B. Training soldiers in the temple
 C. Meeting as a group in the temple
 D. Selling items in the temple
81. Who among the following woman welcomed the apostles to her house?
 A. Mary Magdalene
 B. Mary mother of James
 C. Anna
 D. Lydia
82. It is important to share work because it will
 A. Encourage unity and love
 B. Promote hatred
 C. Make us lazy
 D. Make us have enemies
83. Christians served others in the society by _____
 A. Fighting enemies
 B. Caring for them
 C. Fighting their neighbors
 D. Quarrelling their friends
84. Which one of the following ways of worship is found in the Bible?
 A. Singing
 B. Dancing
 C. Praying
 D. All of the above
85. Which one of the following ways of worship is found in the Bible?
 A. Singing
 B. Dancing
 C. Praying
 D. All of the above
86. Which one of the following ways of worship is found in the Bible?
 A. Singing
 B. Dancing
 C. Praying
 D. All of the above
87. In traditional African society children were expected to
 A. Solve land disputes
 B. Obey their elders
 C. Train the warriors
 D. Defend the clan during war
88. Your friend John likes stealing food from lunch boxes of his classmates. As a Christian you should
 A. Advise him to share the stolen food with you
 B. Continue with the habit of stealing
 C. Advise him to stop stealing
 D. Advise him to steal more
89. Which one of the following people helped Jesus Christ carry the cross?
 A. Simon of Cyrene
 B. Matthew
 C. Malact
 D. Revelation

C
C Learn to respect other people's property
Sell the stolen food to other pupils

89. Which one of the following is a form of child labour?

- A. Standard six pupils sweeping their classroom
 - B. Children weeding
 - C. Pupils playing football in the school compound
 - D. Children working on maize plantations nearby
- A. Simon Peter B. Judas iscariot
C. Simon of Cyrene D. Joseph of Arimathea

90. Which one of the following is the **BEST** way of treating people living with HIV/AIDS?

- A. Accepting and caring for them
- B. Praying for them
- C. Eating with them
- D. Staying with them in our homes

B. Pilate

Be

- A. Singing
- B. Worshipping
- C. Baptism

A.