

et/an
Excellence

SCHOOL BASED EVALUATION TEST

STANDARD EIGHT YEAR - 2020

SOCIAL STUDIES & C.R.E 33H7id3

READ THESE INSTRUCTIONS CAREFULLY

1. Use an ordinary pencil only.
2. Make sure that you have written on the answer sheet.

I. YOUR NAME

II NAME OF YOUR SCHOOL

Time: 2 Hour 15 Mins.

N

kT

»%⁰_{a@}

O

²g^S_C ¹g^S_S

3 j + |
4 5 6

Papyrus
PYP'

All weather road

School
£

Town - rat+
... - ...

Haman settlement
%°_o

Quarry

Market
MKT

Railway ne
4++t

C

Use the map of Mwenje area to answer question

Te v ti
Mwe:sea._

1. The land in Mwenje area slopes downwards
A. South i. North

A. fishing
C. wading

2. The physical features of Mwenje area are
A. hills West

A. hills
B. forested

likely to be found north of Twnje arc-

- A. Lake
- B. Valley
- C. Swamp
- D. Ocean

which of the following social services is not

provided in ways - a

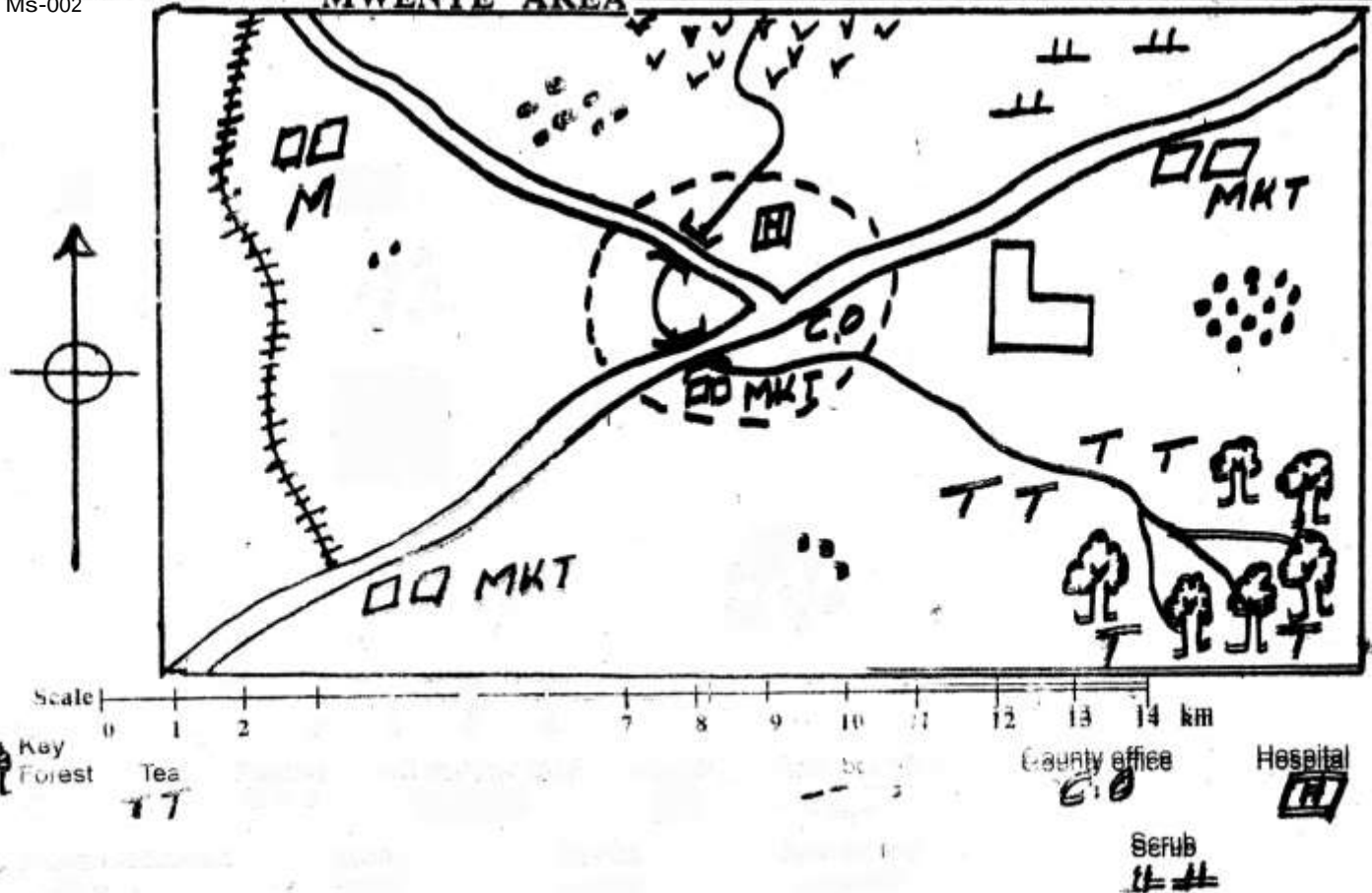
3. The climate in South Eastern part of Mwenye area can be described as

- A. hot and wet
- B. hot and dry
- C. hot and dry
- D. cool and dry

- A. Health
- B. Education
- C. Administration

MWENYE AREA

MS-002



1. The main activity in the area is tea planting. The area is a valley with a river flowing through it. The climate is hot and dry. The population is increasing. The main settlement is in the center of the area. The area is surrounded by forest and scrub. The main activity is tea planting.

The main settlement is in the center of the area. The area is surrounded by forest and scrub. The main activity is tea planting. The population is increasing. The climate is hot and dry. The area is a valley with a river flowing through it.

7. The railway line shown on the map is likely to transport

- A. the teachers work is increased
- B. it ensures that planned activities run smoothly
- C. school rules and regulations are not followed
- D. following are elements of a good citizen except

- A. patifjoi
- B. honesty
- C. zoyats
- D. tribalism

11. A street boy was beaten to death for stealing a lady's handbag. Which right was he denied?

- A. Right to life
- B. Right to freedom
- C. Right to property
- D. Right to equality

12. The main cause of conflict in Kenya is

- A. economic differences
- B. cultural differences
- C. religious differences
- D. religious differences

13. The method of mining in the area marked 'mm' is

- A. causes dry conditions
- B. causes rain in winter
- C. brings a lot of rainfall

17. The following are products of the executive arm of government

- A. COCOA
- B. sugarcane
- C. cloves
- D. Cabinet Secretary

18. Below is a description about a community in Africa:

- (i) sessions were mainly made by consensus
- (ii) They were organized in clans
- (iii) They were nomad pastoralism
- (iv) They had a chief who was usually assisted by elders

The community described above was the

- A. San
- B. Baganda
- C. Nyamwezi
- D. Khoikhoi

Use the diagram below to answer questions 19 and 20.

zi s1s · n%
b

19. Three of the following mountains were formed


8. On ziv;se

through the above process **except**

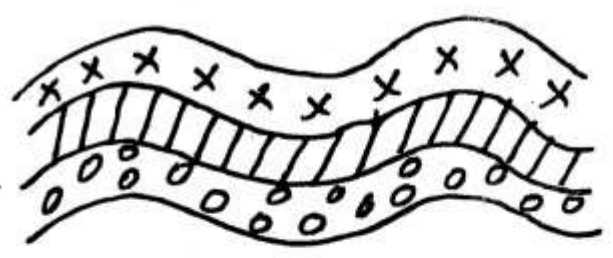
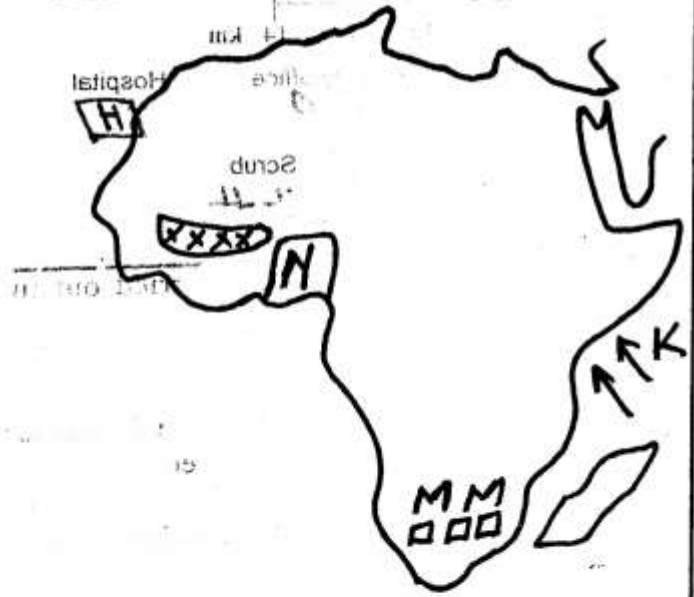
- A. Atlas mountains
- B. Cape Ranges
- C. Tibesti mountains
- D. Drakensberg mountains

SOCIAL STUDIES & C.R.E. STD 8

MG-I



Use the map of Africa be questions
13-16



20. The type of mountain shown in the diagram above was formed as a result of
- A. folding
 - B. volcanicity
 - C. faulting
 - D. erosion
21. Pokot, Sabaot and Tugen have one thing in common in that, they are
- A. originated from Horn of Africa
 - B. fishermen
 - C. found in South Africa
 - D. Highland Nilotes
22. Who among the following early visitors to Eastern Africa was a missionary?
- A. William Mackinnon
 - B. Ludwig Kraft
 - C. Seyyid Said
 - D. Johrt Speke
23. Which of the following are beef farming areas in Kenya and Tanzania?
- A. Kisumu and Dodoma
 - B. Laikipia and Kongwa
 - C. Taita and Dar - es - Salaam
 - D. Nyeri and Arusha
- The following are benefits of democracy **except**
24. A. people are treated fairly
- B. promote peace and prosperity
 - C. promote injustice
 - D. promotion of freedom
- The following are duties of the County Government **except**
25. A. make laws
- B. receive important visitors
 - C. initiate development
 - D. head the County Executive Committee
- The **best** way to discourage drug and substance abuse is by
26. A. offering moral guidance to the victim
- B. strengthening police inspections
 - C. being role models to the drug abusers
 - D. educating people on the dangers of drugs
- Three of the following are some aspects of cultural that should be preserved **except**
27. A. taking care of the needy
- B. female circumcision
 - C. discouraging early marriages
 - D. performing traditional songs
- The following are causes of lawlessness in the society **except**
28. A. equality before the law
- B. poverty

29,35.

30.

31.

32.

33.

34.

Berbers and Tuaregs are mainly found in which region of Africa?

- B. North
 - C. West
 - D. Eastern
- Who among the following African traditional leaders fought against the establishment of French rule in West Africa?

- A. Lewanika
- B. Kabaka Mwanga
- C. Kinjekitile Ngwale
- D. Samoei Toure

Which one of the following is not true about early immigrants into Kenya?

- A. They came as traders
- B. They came as missionaries
- C. They came as students
- D. They came as colonizers

Use the **diagram below** to answer

32-
33.

- C. corruption
- D. religious differences

MG-1

The winds labelled Y are

- A. hot and wet
- B. cool and wet
- C. hot and dry
- D. cool and dry

The type of rainfall shown above is


- A. convectional
- B. orographic
- C. landbreeze
- D. sea breeze

Three of the following are methods used by the Europeans to establish their rule in Eastern Africa **except**


- A. marrying African women
- B. signing treaties
- C. use of company rule
- D. use of force

African socialism was adopted as a national philosophy in the year

- A. 1975
- B. 1965
- C. 1960
- D. 1963



INDEPENDENTS

- 36.. Which crop requires the following conditions to grow?
- (i) High temperatures of between 21°C to 26°C
 - (ii) Heavy rainfall
 - (iii) Deep, fertile and well- drained soils
 - (iv) Props to support plants with fruit
- A. Maize B. Coffee
C. Bananas D. Sugarcane
37. Human rights are outlined in the fourth chapter of the constitution under
- A. parliamentary bills
 - B. arms of the government
 - C. government of Kenya
 - D. bill of Rights
38. After the 8th August 2017 presidential election results were announced, a dispute arose. The dispute was resolved through
- A. mediation B. litigation
 - C. dialogue D. arbitration
39. The following are functions of the Independent Electoral and Boundaries Commission **except**
- A. nominating members
 - B. registering voters
 - C. preparing election materials
 - D. educating voters
40.  past?
- A. Excitement in some animals
 - B. Cloudy skies
 - C. Croaking of frogs
 - D. Appearing of full moon
41. Which language group came to Kenya **mainly** because of trade?
- A. Cushites B. Nilotes
 - C. Semites D. Bantus
42. After assimilation policy of administration failed in Senegal. They adopted a policy known as
- A. Direct rule B. Association
 - C. Indirect rule D. Paternalism
43. The **main** problem facing trade in Africa is
- A. lack of common currency
 - B. inadequate capital
45. Three of the following lakes are sources of fresh water fish in Africa. Which one is not?
- A. Lake Tanganyika B. Lake Malawi
 - C. Lake Bogoria D. Lake Baringo
46. Three of the following welcomed the establishment of colonial rule in their area
- B. Hygrometer - strength of wind
 - C. Anemometer - speed of wind
 - D. Windsock - humidity
48. The following are benefits of tourism **except**
- A. source of foreign exchange
 - B. create market for goods and services
 - C. encourages immoral activities
 - D. creates employment
49. The following are stages in the parliamentary electoral process:
- (i) Election date is announced
 - (ii) Parliament is dissolved
 - (iii) Speaker declares seat vacant
 - (iv) Election materials are prepared
- C. ii, i, iii, iv D. ii, iii, iv, i
50. The correct meaning of the term conflict is
- A. a disagreement between people
 - B. a tribal gathering
 - C. displacement of people
 - D. emigration of people
51. The following are contributions of a prominent leader in Africa:
- C. ical instability
 - D. production of similar goods
44. On which date was the current constitution of Kenya promulgated?
- i A. 27th August, 2010 B. 4th August, 2010

C. 27th August, 2013 D. 21st November 2005

- (i) He set up private schools
- (ii) Introduced a new constitution
- (iii) He helped to abolish the ownership of slaves
- (iv) He was a founder member of OAU

The leader described is

- A. Chief Mwarawa
- B. J. Nana
- C. J. Lele
- D. Kabaka Mutesa I

547. Another name for young soil is

- A. volcanic soil
- B. alluvial soil
- C. Rain gauge - temperature
- D. clay soil

MG-I

SOCIAL STUDIES & C.R.E. STD 8

o lo
ic et r

i

p

e

i

INVENTS

63. Joseph gave land to his father and brothers at a place called
 A. Meribah B. Gihon
 C. Goshen D. Marah
64. The freezing of the Israelites from the land of Egypt is narrated in the book of
 A. Numbers B. Exodus
 C. Leviticus D. Genesis
65. Who among the following people in the Bible stories broke the sixth commandment?
 A. Noah B. Naboth
 C. Jonathan D. Ahab
66. Daniel was thrown in den of lions during the reign of king
 A. Darius B. Nebukadnezzar
 C. Saul D. Herod
67. Who was **not** a prophet of hope among the following?
 A. Isaiah B. Ezekiel C. Jeremiah D. Micah
68. Prophet Elijah, Elisha and Jesus had one thing in common. Which is it?
 A. Feeding people B. Multiplication of oil
 C. Healing lepers D. Raising the dead
69. The following are reasons why God rejected king Saul. Which one is **not**?
 A. Consulted a medium at Endor
 B. Saved king Agag and fat animals,
 C. Performed the duties of a priest
 D. Killed Uriah
70. Which one of the following reasons made Gideon reluctant about fighting the Midianites?
 A. Poor speaker
 B. Least member in the family
 C. Too young to lead
 D. Afraid of Midianites
71. One of these gifts symbolised that Jesus was to be a priest. Which one is it?
 A. Gold B. Silver
 C. Frankincense D. Myrrh
72. When Jesus was tempted thrice by Satan in the wilderness He was able to overcome because
 A. Knew the word of God
 B. He was the Messiah
 C. He was the son of God
 D. He was the son of God
64. South Africa from the
 A. Ngwenyama B. Wachagga
 C. Yamwezi D. Wa sukuma
65. Which of the following are electronic means of communication?
 A. Radio and newspapers
 B. Newspapers and magazines
 C. Cellphones and journals
 D. Radio and television
66. Which one of the following is **not** a result of peace in the society?
 A. Cattle rustling
 B. Promotion of tourism
 C. Construction of roads
 D. Children going to school without fear
67. Which of the following forms of transport is **least** developed in Eastern Africa?
 A. Pipeline B. Road
 C. Cables D. Air
68. In Buganda Kingdom, administering justice was the work of
 A. Omwanika
 B. Omulamuzi
 C. Katikiro
 D. Kabaka
69. Three of the following are problems facing urban centres **except**
 A. unemployment B. crime
 C. proper housing D. growth of slums
70. Which one of the following is not a pastoral community in Africa?
 A. Fulani B. Maasai
 C. Tswana D. Akamba
71. Who among the following is elected by legislators?
 A. The Deputy president
 B. The Speaker
 C. Nominated MPS
 D. The Governor
- C.R.E**
72. In the story of creation, Genesis 1 God created the following in day five **except**
 A. owl B. gazelle

- C. whale D. Nile perch
62. God gave Abraham the sign of circumcision to
- A. make a covenant with him
 - B. change the name Abraham and Sarai
 - C. unite the Jews
 - D. identify his descendant

MG-1

- 3 According to the Bible, the Jews were called the
- 5; Blessed are the humble, they will receive God's promise
- A. they will receive God's promise
 - B. they will receive God's promise
 - C. they will receive God's promise
 - D. they will receive God's promise

SOCIAL STUDIES & C.R.E. STD 8

74. Which one of the following parables of Jesus teaches Christian about humility in **Prayer**?
- A. The judge and woman
 - B. Friend at midnight
 - C. Good Samaritan
 - D. The Pharisee and the tax collector
75. The following are miracles performed by Jesus showing that He had power over nature **except**
- A. feeding five thousand people
 - B. calming the storm
 - C. raising Lazarus
 - D. miraculous catch
76. The death and resurrection of Jesus makes Christians to **be**
- A. tolerant
 - B. obedient
 - C. hopeful
 - D. **honest**
77. **Jesus and His disciples celebrated the Last Supper in the town of**
- A. **Jerusalem**
 - B. **Bethany**
 - C. Nazareth
 - D. Jericho
78. The following **are events** that took place **during** the day of Pentecost. Which one is **not**?
- A. Disciples filled with Holy **Spirit**
 - B. Peter preached
 - C. Noise that sounded like strong wind
 - D. The curtain torn into two
79. Who among the following people was the first Christian martyr...
- A. Abel
 - B. Stephen
 - C. Peter
 - D. Simeon
80. Who among the following was **not** among the **seven** helpers chosen by the early believers?
- A. Barnabas
 - B. Permenas
 - C. Timon
 - D. Philip
81. Which one of the following is a gift of the Holy spirit?
- A. Kindness
 - B. Faithfulness
 - C. **Healing**
 - D. self-control
82. The following are found in the apostles' creed. Which one is **not**?
- A. suffered under Pontius Pilate
 - B. Ascended into hell
 - C. Conceived by the Holy **Spirit**

83. Which among the following was not part of stage of life in African Traditional Society?
- A. Naming B. Death
C. Birth D. Initiation
84. Who **among** the following were found both in African Traditional Society and Christianity? A. Diviners and prophets
B. Priests and seers
C. Magician and medicinemen
D. Priests and prophets
85. The **main** way of reconciling with Gcd in most African traditional practices was through
A. reciting sacted l'rayers
B. **offering sacrillce** of animals
C. **punishing offenders**
D. **sharing sacriflotal meals**
86. Your friend, Maria informs you that she has a boy friend. What action would you take?
A. Pray with her
B. Tell her to use contraceptives
C. **Inform her the dangers of Irresponsible boy**

MG-I

- girl relationships
D. Inform your class teacher
87. Which one of these is a good way of spending ones leisure time?
A. **Helping the less privileged**
• **leopin~**
C. Watching movies
D. Drinking alcohol
88. One of the following is **not** a reason why people work today. Which one is it?
A. Make them tired
B. Improve their lives
C. Please @od
D. Get basie needs
89. Mariga, who is a rich man is thinking of haw to use his extra money. As a Christian, what advice would you give?
A. Build a big house for himself
B. **Pay ch@el fees for orphans**
C. **Buy** a farm for his family
D. Qo for trip abroad ∴
90. The first Christian mission schaal was built in Coast at a plae called
A. Rabai B. Kaloleni
C. Kiiifi D. Vihiga

SOCIAL STUDIES & C.