

SOARING HIGH IN KCPE EXAM



SECOND PREDICTION 2021

Time: 2 hours 15 minutes

SOCIAL STUDIES AND RELIGIOUS EDUCATION

INSTRUCTIONS TO CANDIDATES (Please read these instructions carefully)

1. You have been given this question booklet and a separate answer sheet. The question booklet contains 90 questions.
2. Do any necessary rough work in this booklet.
3. When you have chosen your answer, mark it on the **ANSWER SHEET**, not in this question booklet.

HOW TO USE THE ANSWER SHEET

4. Use only an ordinary pencil.
5. Make sure that you have written on the answer sheet:
YOUR INDEX NUMBER
YOUR NAME
NAME OF YOUR SCHOOL
6. By drawing a **dark line** inside the correct numbered boxes mark your full index number (i.e. School Code Number and the three-figure Candidate's number) in the grid near the top of the answer sheet.
7. Do not make any mark outside the boxes.
8. Keep the answer sheet as clean as possible and **DO NOT FOLD IT**.
9. For each of the questions 1-90, answers are given. The answers are lettered A, B, C and D. In each case only **ONE** of the four answers is correct. Choose the correct answer.
10. On the answer sheet the correct answer is to be shown by drawing a **dark line** inside the box in which the letter you have chosen is written.

Example

In the Question Booklet:

33. In Kenya, Laws are made by :•
- A. Executive
 - B. Cabinet
 - C. National assembly
 - D. Judiciary

E1 @ ■ am « c 1 EE er - + » g er

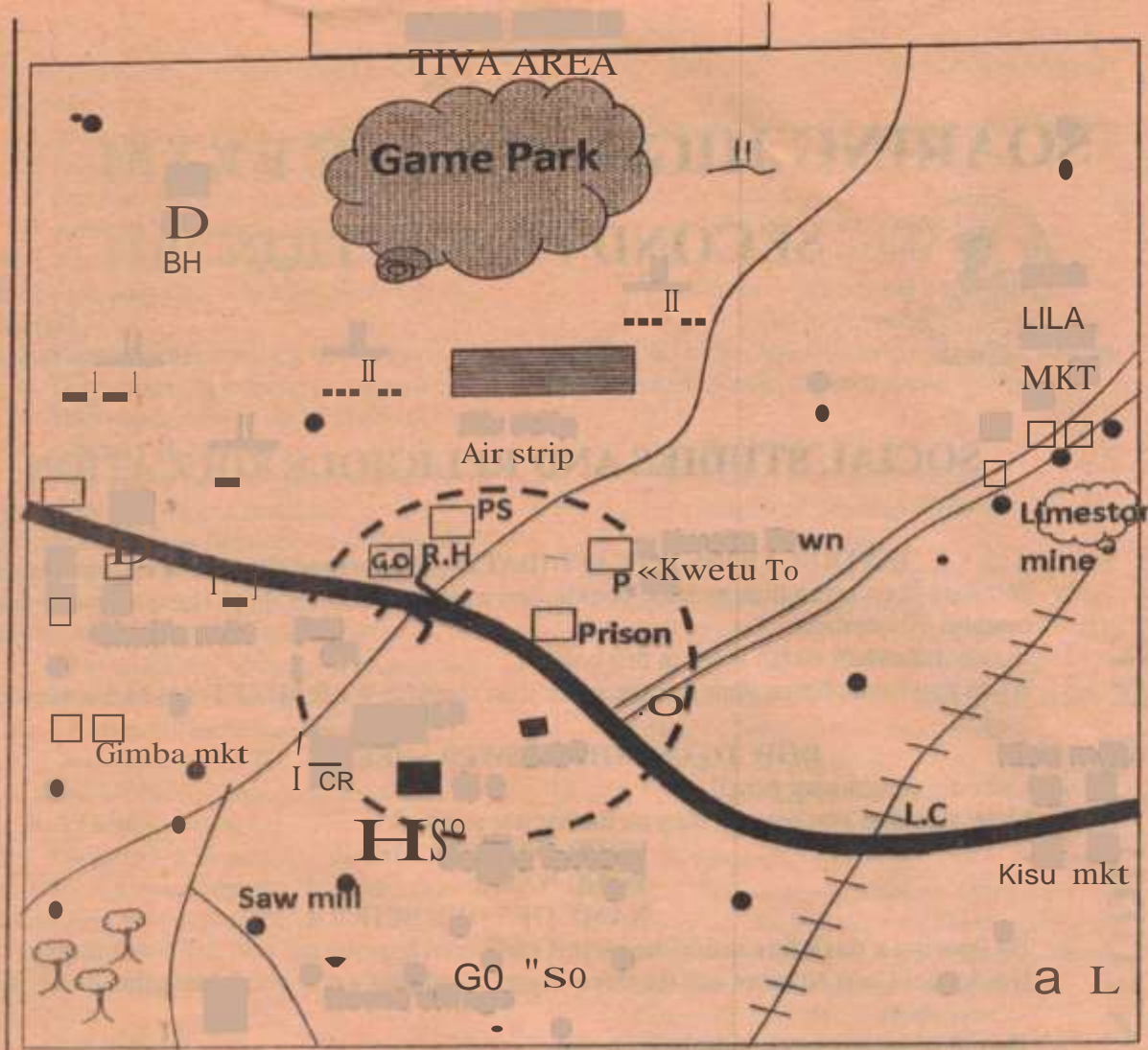
The correct answer is 'C'
On the answer sheet:

11. Your **dark line MUST** be written in the box.
12. For each question **ONLY ONE** box is to be marked in each set of four boxes.

This questions papers consist of 8 printed pages

TURNOVER

Scanned by CamScanner



RR.S0

[] [] [] - Permanent buildings

|| Scrub

☾ - Limestone mine

f Rvi er and the bridge

ER- Ai«a»

• • • Settlements

Po Post office

HSP Hospital

CR Crematorium

PS - Police station

CC0 =Cent Csro - foray OHO.
C.O-- Cevener' oft<a_
C&e- Count« Gav«wsent
9}fG

Scanned by CamScanner

- The climate of the Southern Western part of the area covered by the map is likely to be:
 - Cool and Wet
 - Hot and dry
 - Hot and Wet
 - Cool and dry
- The Administrative head of TIVA area is the?
 - Governor
 - Area MP
 - county commissioner
 - County representative
- The land in the area covered by the map rises from?
 - North East to South West
 - North West to East
 - North West to South East
 - South West to North East
- Which of the following is **NOT** an economic activity carried out in Tiva area?
 - Farming
 - Trading
 - Transport
 - Fishing
- The main reason that has influenced population distribution in the Southern part of the area covered by the map is?
 - good transport net
 - nearness to town
 - fertile soils in the area
 - good climate
- The approximate area of the game park in square kilometres

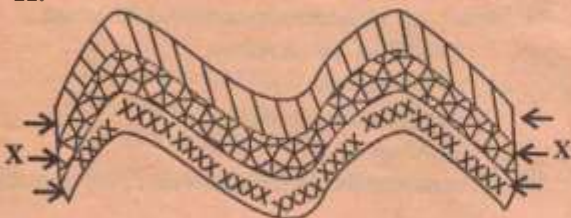
A. 12 km	B. 16km
C. 4km	D. 20 km
- Saku wants to start a business at Gimba market from which office is he going to obtain his trading licence?

A. County Government	B. Chiefs office
C. DO's office at town	D. Police station
- Which of these pre-historic sites is **NOT** found in Ethiopia?

A. Melka Konturi	B. Omo Valley
C. Hadar	D. Kondo
- Which of the following is **NOT** an example of items made in traditional industries?

A. Basket	B. Fish traps
C. Tyres	D. Bows and arrows

Use the diagram below to answer questions 10 and 11.



- The forces X are **fo**rces.
 - Tensional
 - Compressional
 - Folding
 - Faulting
- Which of these is **NOT** an example of a mountain formed through the process represented by the map?
 - Ruwenzori
 - Atlas
 - Cape Ranges
 - Drakensburg
- Which of these is the least important benefit of African rivers?
 - They are a major source of water for man
 - They are a major source of water for irrigation
 - They help in generation of Hydro• electric power
 - They are a major transport water way.
- Who among these African leaders never voluntarily retired from politics?
 - Leopold Senghor
 - Jomo Kenyatta
 - Julius Nyerere
 - Nelson Mandela
- In which of the following ways is a person likely to be infected with HIV and AIDS?
 - Sharing injection needles with an infected person
 - By shaking hands with an infected person
 - By sharing clothes with an infected person
 - By playing games with an infected person
- The first Black President of South Africa was:
 - Samora Machel
 - Nelson Mandela
 - F.W. De Klerk
 - Robert Mugabe
- Brian, a boy in class eight has seen a pen misplaced in his class. The **BEST** thing for him to do is:
 - Retain the pen with him
 - Give one of his friends
 - Hand over the pen to the teacher
 - Leave the pen where he has seen it.
- Which of the following was **NOT** a way of interaction in the past?
 - Trade
 - Games and sports
 - Religious rituals
 - During raids and wars

Scanned by CamScanner

A. warm sandy beaches

18. The MAIN reason why the mau mau war was fought was **MAINLY** because:
- A. They wanted to get back their land
 - B. Africans were forced to pay taxes
 - C. Africans were mistreated
 - D. Africans wanted to be given independence
19. Which of these is **NOT** a reason why Kenyans should take part in voting during elections?
- A. To obey the laws of land
 - B. To elect responsible leaders
 - C. To elect the party of their choice
 - D. To ensure that the country is governed well
20. Below is a description of a type of soil:
- i. Has small particles
 - ii. Has high water holding capacity
 - iii. Sticky when wet
- The soil type described here is:
- A. Sandy
 - B. Loam
 - C. Red volcanic
 - D. Clay

Use the map below to answer questions 21- 24

21. The countries marked S and T were respectively colonized by
- A. Belgium and France
 - B. France and Britain
 - C. Spain and France
 - D. France and Portugal
22. Which of the following communities is found in shaded region marked K?
- A. Berbers and Tuaregs
 - B. Ibo and Yoruba
 - C. Ovahimba and Ndebele
 - D. Sotho and Kanuri
23. The major tourists attraction in the shaded area marked Y is

- B. Victoria falls
- C. The ruins of Great Zimbabwe
- D. Variety of wild animals

24. The shaded climatic region marked P receives rainfall

- A. When the sun is overhead
- B. Twice in a year
- C. During the cold season
- D. Which is over 1500mm per year

25. The following are ways through which the youths were taught in the past EXCEPT one. Which one?

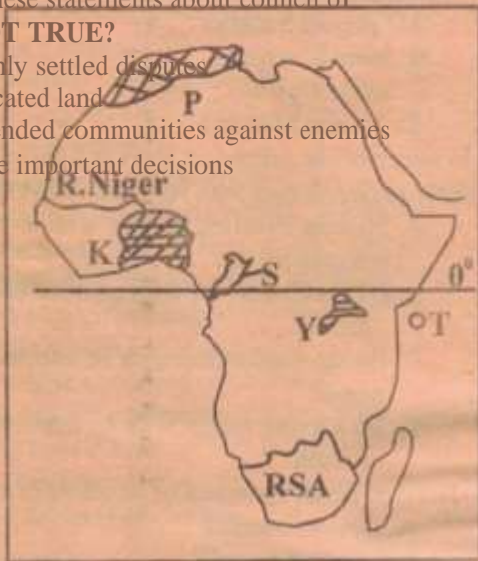
- A. Singing and dancing
- B. reading and arithmetic
- C. stories and riddles
- D. proverbs and folk dances

26. The MAIN aim of forming the UNO in 1945 was to:

- A. Promote human rights
- B. Promote unity in political systems
- C. Promote world peace
- D. Promote trade

27. Which of these statements about council of elders is NOT TRUE?

- A. Mainly settled disputes
- B. Allocated land
- C. Defended communities against enemies
- D. Made important decisions



28. Matatu accidents in Kenya have become more in recent years. This has been caused by

- A. Smooth tarmac roads
- B. Presence of many vehicles
- C. Carelessness of road users
- D. Bad weather

29. The immediate action that parents should take if their child has been sexually abused by a stranger is to:

- A. Report to the police
- B. Advise the pupil against talking to strangers
- C. Look for the strangers
- D. Take the girl to hospital for medical checkup

30. Which one of the following is NOT a responsibility of children in a family?

- A. Respect and obey their parents
- B. Take care of the family property
- C. Provide security to other members of the family
- D. Behave in a way that promotes unity in the family

31. Below are some minerals mined in Africa:

- i. Gold in South Africa
- ii. Limestone
- iii. Soda ash
- iv. Copper

Which combination of the minerals listed above is

ii, iii, iv

Scanned by CamScanner

mined using the opencast method?

- A. ii and iv
 - B. iv and ii
 - C. i and ii
 - D. iii and iv
32. Which of the following human rights is a person in prison denied?
- A. Right to worship
 - B. Right to security
 - C. freedom of movement
 - D. Freedom of association
33. In which of the following ways have the Maasai Pastoralists benefited from the government support?
- A. They are given money to buy animal feeds during the dry season
 - B. Towns have been built in grazing areas to provide market
 - C. Wild animals have been removed to create more land for grazing
 - D. Boreholes have been drilled to provide water in the grazing areas
34. Which of the following statements is **NOT**

TRUE about the policy of assimilation in Senegal?

- A. Assimilated Africans could not practice their customary laws
 - B. Assimilated Africans could be voted to French National Assembly
 - C. Assimilated Africans worked in European farms
 - D. Assimilated Africans could vote and be voted for.
35. The main reason why the government encourages forest conservation?
- A. Protect rare species of trees
 - B. Protect the sources of rivers
 - C. Protect homes for animals
 - D. Provide enough raw materials for the



36. The diagram below shows a method of fishing

37. Which of the following countries in Eastern Africa has the largest Semitic influence?

- A. Somalia
- B. Kenya
- C. Sudan
- D. Ethiopia

38. Which of the following statements is TRUE about lake Victoria:

- A. It is a depression lake
- B. It is a source of minerals
- C. It is the largest lake in the Rift valley
- D. It is centre of inland drainage

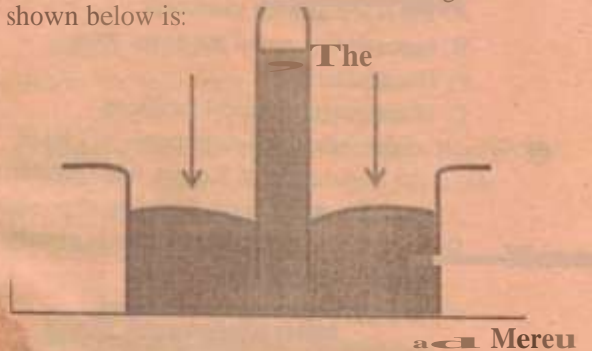
39. In Kenya government policies are made by

- A. Legislature
- B. Police Force
- C. Judiciary
- D. Cabinet

40. Which of the following traditional communities is correctly matched with a traditional leader:

- A. Miji-Kenda S
- B. Nandi Mekatilili
- C. Abagusii Samo
- D. Maasai Oloibon

41. The weather element recorded using the instrument shown below is:



- A. Atmospheric water
- B. Temperature
- C. Rainfall
- D. Air pressure

The fishing method shown in the diagram is

- A. Purse seining
- B. Net-drifting
- C. Trawling
- D. Long-lining

42. Drug abuse is being discouraged in Kenya mainly because
- A. Drugs are expensive
 - B. It affects people's health
 - C. It leads to unlawful trade
 - D. It encourages lawlessness
43. Which of the following is TRUE about the areas where wheat is grown:
- A. The areas have clay soil
 - B. The areas have low altitude
 - C. The areas experience high temperatures
 - D. The areas receive moderate rainfall
44. Which one of the following was the main function of Nakuru town? When it started.
- A. Agricultural
 - B. Communication
 - C. Administrative
 - D. Commercial

Scanned by
CamScanner

45. Which of the following police units in Kenya is correctly matched with its duty:

- A. General Service Unit — Assisting in stopping riots
- B. Administrative Police — Guarding suspected criminals
- C. C.I.D. — Providing security to government officers
- D. Dog Handlers Unit — Recovering stolen animals

46. Which one of the following is **NOT** a characteristics of Equatorial climate:

- A. High temperatures throughout the year
- B. The area receives two distinct rainy seasons
- C. The region mainly receives convectional rainfall
- D. The climate is influenced by warm Guinea Currents

47. Which of the means of transport is the cheapest on land?

- A. Road
- B. Air
- C. Rail
- D. Water

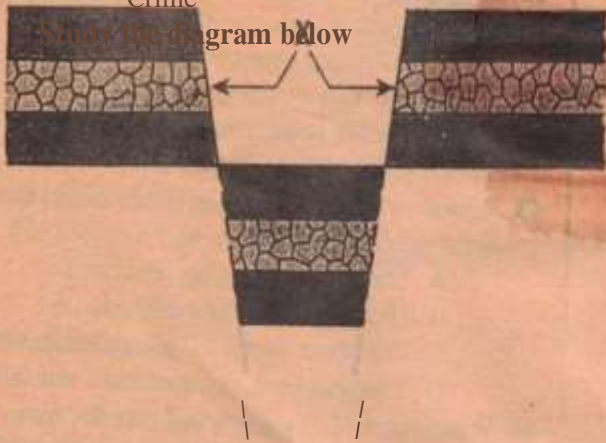
48. The main problem experienced by Jua Kali artist in Kenya is?

- A. Illiteracy among members
- B. Inadequate capital for expansion
- C. Competition
- D. Inadequate transport facilities

49. Which of the following statements is **TRUE** about the population of Kenya, and Germany.

- A. Both countries have high life expectancy
- B. In both countries population is evenly distributed
- C. In both countries there is high population densities in urban areas
- D. In both countries there is high rate of Crime

Study the diagram below



50. The feature above was formed as a result of

- A. sinking
- B. Folding

C. Faulting D. Volcanicity

51. Which of the following problems is **NOT** a problem facing Tourism in Kenya:

- A. Inadequate sites
 - B. Poor infrastructure
 - C. Insecurity
 - D. Competition from other countries
52. Kabe finds a herd of elephants from a nearby game park damaging his crops. Which one of the following actions should he take?
- A. Ask the neighbours to help him kill the animals
 - B. Drive the animals to the police station
 - C. Chase the animals away from his farm
 - D. Report the matter to the Kenya wildlife services
53. Which of the following statements is true about Swaziland:
- A. Elections are held after five years
 - B. The head of the government is the King
 - C. The head of state appoints the cabinet
 - D. It was a Portuguese colony
54. Which of the following is NOT an economic benefit of river projects in Africa:
- A. Production of H.E.P.
 - B. Provides water for irrigation
 - C. Controlling floods
 - D. Providing fishing grounds
55. The best way of encouraging Kenyans to be law abiding is by:
- A. Rewarding those who obeys the laws of the land
 - B. Punishing those who break the laws of the land
 - C. Educating people on the importance of obeying the laws of the land
 - D. Praising those who obey the law
56. Who among these was not a founder member of KANU:
- A. James Gichuru
 - B. Tom Mboya
 - C. Odinga Oginga
 - D. Ronald Ngala
57. The headquarters of COMESA are in:
- A. Zambia
 - B. Tanzania
 - C. Uganda
 - D. Nigeria
58. Which of these is NOT a benefit of democracy?
- A. Allows equal distribution of land
 - B. Allows formation of many parties
 - C. Allows citizens to elect their leaders
 - D. Allows freedom of speech
59. Location of Bamburi cement was MAINLY influenced by:
- A. Availability of land
 - B. Availability of raw materials
 - C. Availability of water
 - D. Availability of good transport

Scanned by CamScanner

60. Which of these is NOT one of the national Philosophies in Kenya:
 A. Nyayoism B. Harambee
 C. African Socialism D. Pan Africanism

PART II
CHRISTIAN RELIGIOUS EDUCATION

61. Which one of the following statements from the Bible shows that God wanted human beings to take care of the environment:
 A. Let us make man in our own image
 B. Have many children and fill the earth
 C. Let the earth produce all kinds of animal's life
 D. Live all over the earth and bring it under control
62. What do Christians learn about the relationship between husband and wife from the Genesis stories of creation:
 A. They should fear one another
 B. They should help one another
 C. The wife should obey the husband
 D. The husband should have power over the life
63. Which one of the following is NOT an example of drug abuse:
 A. Taking medicine without a prescription from the doctor
 B. Habitually depending on drugs
 C. Taking medicine prescribed by a doctor
 D. Injecting oneself with heroin
64. To help the youths use their energy fruitfully and use their time fully, the society should:
 A. Construct more schools
 B. Provide more recreation facilities
 C. Introduce sex education in the school curriculum
 D. Instill more discipline in the youth
65. Which commandment did the devil tempt Jesus to break:
 A. Worship no God but me
 B. Observe the Sabbath day and keep it holy
 C. Do not commit murder
 D. Do not use my name for evil purposes
66. The three of the following categories of books in the New Testament. Which one is NOT?
 A. Epistles
 B. Historical
 C. Gospels
 D. Wisdom
67. Which one of the following statements does not describe the character of God according to the traditional African society?
 A. God is jealous
 B. God is merciful
 C. God is the father of the community
 D. God is the sustainer of the universe
68. Which one of the following types of worship is practiced in both Christianity and traditional African communities:
 A. reading of scriptures
 B. confessing of sins
 C. reciting of creeds
 D. celebration of sacraments
69. Which one of the following statement is a traditional African belief about God?
 A. God is the giver of life
 B. God will come to judge the world
 C. God is guarded by angels
 D. God is three in one
70. Who among the following prophets foretold that Messiah would give sight to the blind:
 A. Ezekiel B. Micah
 C. Jeremiah D. Isaiah
71. Which of the following is the BEST reason why Jesus and His parents went to live in Egypt?
 A. There was drought in Nazareth
 B. There was a good harvest in Egypt
 C. King Herod wanted to kill Jesus
 D. Pharaoh invited the family there
72. The Roman Emperor who was ruling when Jesus was born:
 A. Herod B. Caesar Augustus
 C. Quirinius D. Pontius Pilate
73. From the book of Genesis we learn that Joseph requested his brothers to carry his remains to the promised land when he died. Which one of the following reasons best explains why he did so?
 A. There are no graves in Egypt
 B. He was a foreigner in Egypt
 C. The Israelites believed in life after death
 D. He wished to be buried in the land of his forefathers
74. Which one of the following did not take place when Jesus died:
 A. God's people who died rose and were seen in Jerusalem
 B. There was darkness for three hours
 C. Religious leaders and elders repented of their sins
 D. The temple curtain was torn into two
75. In traditional African communities children are told folk tales MAINLY to:
 A. keep them occupied
 B. teach them moral values
 C. entertain them
 D. teach them the history of their community

Scanned by CamScanner

76. It is important for Christians to forgive others in order to:
- A. win respect in the community
 - B. become famous in the community
 - C. become leaders in the community
 - D. maintain harmony in the community
77. Which one of the following activities was NOT done by the early Christian Missionaries to Kenya?
- A. They built churches and hospitals
 - B. They taught Christianity to the natives
 - C. They taught natives useful skills such as carpentry and masonry
 - D. They encouraged and promoted traditional African practices.
78. But Jesus said 'Let us first feed the children. It isn't right to take the children's food and throw it to the dogs' to whom did Jesus give this reply from the request that had been made?
- A. Jairus an official of the local synagogue whose daughter was dead
 - B. A Roman Officer whose servant was sick and about to die
 - C. Jewish Officer whose daughter was dead
 - D. A Gentile woman from Syria whose daughter had **demon**
79. After Jesus died, the statement 'Truly this man was the son of God' was made by:
- A. Nicodemus
 - B. The repentant thief
 - C. Pilate
 - D. The Centurion
80. Who among the following Kings disobeyed God's command to kill all animals captured in war?
- A. Saul
 - B. Solomon
 - C. Jeroboam
 - D. Ahab
81. The main reason why King Solomon built the temple in Jerusalem was to:
- A. unite the people of Israel
 - B. have a place for offering sacrifice to God
 - C. to fulfill the Prophecy of Nathan
 - D. have a place for keeping the Ark of the Covenant
82. The boy raised to life by Prophet Elijah was the son of the:
- A. Rich Shunemite woman
 - B. Canaanite woman
 - C. Widow of Zarephath
 - D. Widow of Nain
83. Which of the following statements is true about Joshua:
- A. He led the Israelites in the making of the Sinai Covenant
 - B. He received the Ten Commandments from God

C. He led the Israelites into Promised Land

- D. He led the Israelites out of bondage in Egypt
84. Which one of the following activities by the communities in Kenya demonstrate care for God's creation:
- A. Wildlife Conservation
 - B. Road Construction
 - C. Burning of charcoal
 - D. building of factories
85. Who among the following missionary groups sent Dr. Johann Ludwig Krapfl to Kenya in 1844:
- A. Holy Ghost fathers
 - B. Church Missionary society
 - C. Church of Scotland Mission
 - D. Mill Hill fathers
86. The story of the annunciation of the birth of Jesus is written in the book of:
- A. Revelation
 - B. Mark
 - C. Luke
 - D. Romans
87. The temptations of Jesus Christ in the desert teaches Christians that they should:
- A. seek earthly riches
 - B. do the will of God
 - C. look for food when hungry
 - D. run away from trials
88. "I will send upon you what my father has promised. But you must wait in the city until the power from above comes down upon you (Luke 24:29) This promise of Jesus to his disciples was fulfilled when they:
- A. Chose Judas successor
 - B. Choose the seven deacons
 - C. Shared their belongings with one another
 - D. Received the Holy Spirit
89. During school holidays, Atieno a standard eight pupil was involved in the activities listed below: Which one of them is the best example of the use of leisure:
- A. she visited grandparents' home
 - B. she took part in a walk to raise money for a community centre
 - C. she attended her cousin's wedding party
 - D. she celebrated her birthday to which she invited her friends
90. Your classmate John has a habit of throwing waste papers in the school compound. The best action for you to take is to:
- A. Remind him of how to care of the environment
 - B. Place dust bins in the compound
 - C. Report him to the class teacher
 - D. Ask him to collect the papers

Scanned by CamScanner