



K.C.P.E FINAL TRIAL STANDARD EIGHT 2021

**SOCIAL STUDIES
AND
RELIGIOUS**

EDUCATION

Time: 2 hours 15 minutes

READ THESE INSTRUCTIONS CAREFULLY

1. You have been given this question booklet and a separate answer sheet. The question booklet contains 40 questions.

Do any necessary rough work in this booklet.

3. When you have chosen your answer, mark it on the **ANSWER SHEET**, not in the question booklet.

HOW TO USE THE ANSWER SHEET

4. Use an ordinary pencil.

5. Make sure that you have written on the answer sheet:

YOUR INDEX NUMBER

YOUR NAME

NAME OF YOUR SCHOOL

6. By drawing a **dark line** inside the correct numbered boxes mark your full Index Number (i.e. School Code Number and the three-figure Candidate's Number) in the grid near the top of the answer sheet.

7. Do not make any marks outside the boxes.

8. Keep your answer sheet as clean as possible and do not fold it.

9. For each of the questions 1-90 four answers are given. The answers are lettered A, B, C and D. In each case only **ONE** of the four answers is correct. Choose the correct answer.

10. On the answer sheet the correct answer is to be shown by drawing a dark line inside the box in which the letter you have chosen is written.

Example

In the question booklet:

33, Which one of the following industries is a service industry?

- A. Cement making
- B. Bicycle repair
- C. Motor vehicle assembling
- D. Flour milling

The correct answer is **B** (Bicycle repair)

On the answer sheet:

EE - C00 B AB/C0D. 11 A80C00. RAJA @C00 {E1 s c ' }

In the set of boxes numbered 33, the box with the letter **B** printed in it is marked.

1. Your dark line **MUST** be within the box.

1. For each question **ONLY ONE** box is to be marked in each set of four boxes.

This question paper consists of 12 printed pages.

Candidates should check the question paper to see if it is correct.

[DOWNLOAD MORE RESOURCES LIKE THIS ON ECOLEBOOKS.COM](http://Ecolebooks.com)

the pages are printed as indicated and no questions remain.

SOCIAL SCIENCES
AND
HUMANITIES
EXAMINATION

Website: www.jesmapublishers.com

rite, f it: info@jesmapublishers.com

per A. ates Lists 14

it \$41e

'4071<1575 *

Water & Power 2014
Pt I (

READ THESE IMPORTANT INSTRUCTIONS

1. You have been given this question booklet and a separate answer sheet. This booklet contains 10 questions.
2. Do any necessary rough work in this booklet.
3. When you have chosen your answer, mark it on the ANSWER SHEET, not in the question booklet.

HOW TO USE THE ANSWER SHEET

4. Use an ordinary pencil.
5. Make sure that you have written on the answer sheet:
 - YOUR INDEX NUMBER
 - YOUR NAME
 - NAME OF YOUR SCHOOL
6. By drawing a dark line inside the correct numbered box next to the letter number (i.e. select the letter and the corresponding Candidate's Number) in the box near the top of the answer sheet.
7. Do not make any marks outside the boxes.
8. Keep your answer sheet as clean as possible and do not fold it.
9. Use each of the questions 1 - 10. Five answers are given. The answers are lettered A, B, C and D. In each case only ONE of the five answers is correct. Choose the correct answer.
10. On the answer sheet the correct answer is to be shown by drawing a dark line inside the box in which the letter you have chosen is written.

Example

In the question booklet:

11. Which one of the following industries is a service industry?

- A. Cement making
- B. Bicycle repair
- C. Motor vehicle assembling
- D. Paper milling

The correct answer is B (Bicycle repair)

On the answer sheet:



In the set of boxes numbered 11, the box with the letter B printed in it is marked.

11. Use dark line MUST be within the box.
12. For each question ONLY ONE box is to be marked in each set of five boxes.

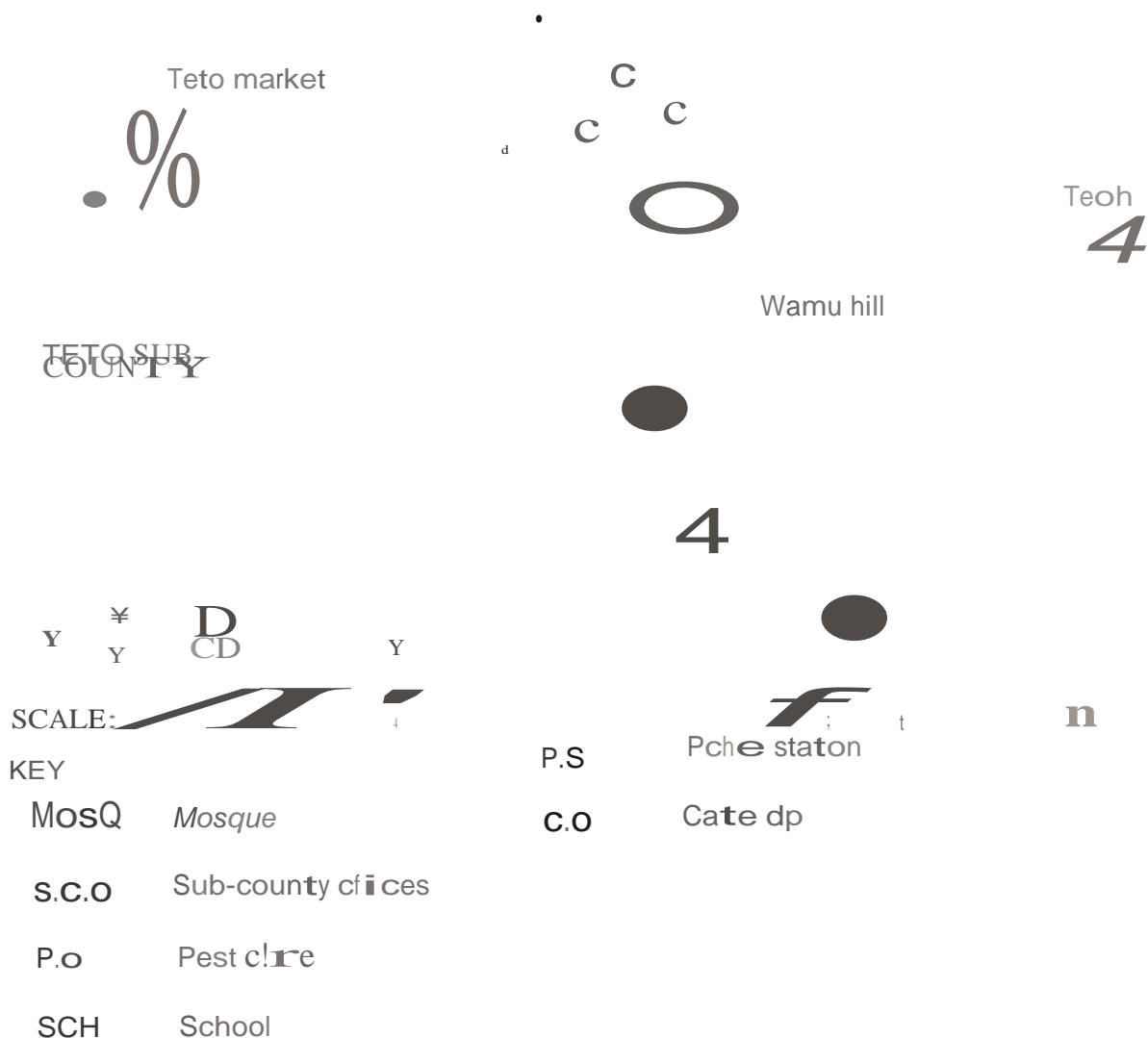
This question paper consists of 12 printed pages.

Candidates should check the question paper to ensure that all the pages are printed as indicated and no questions are missing.

Website: www.jesmapublishers.com

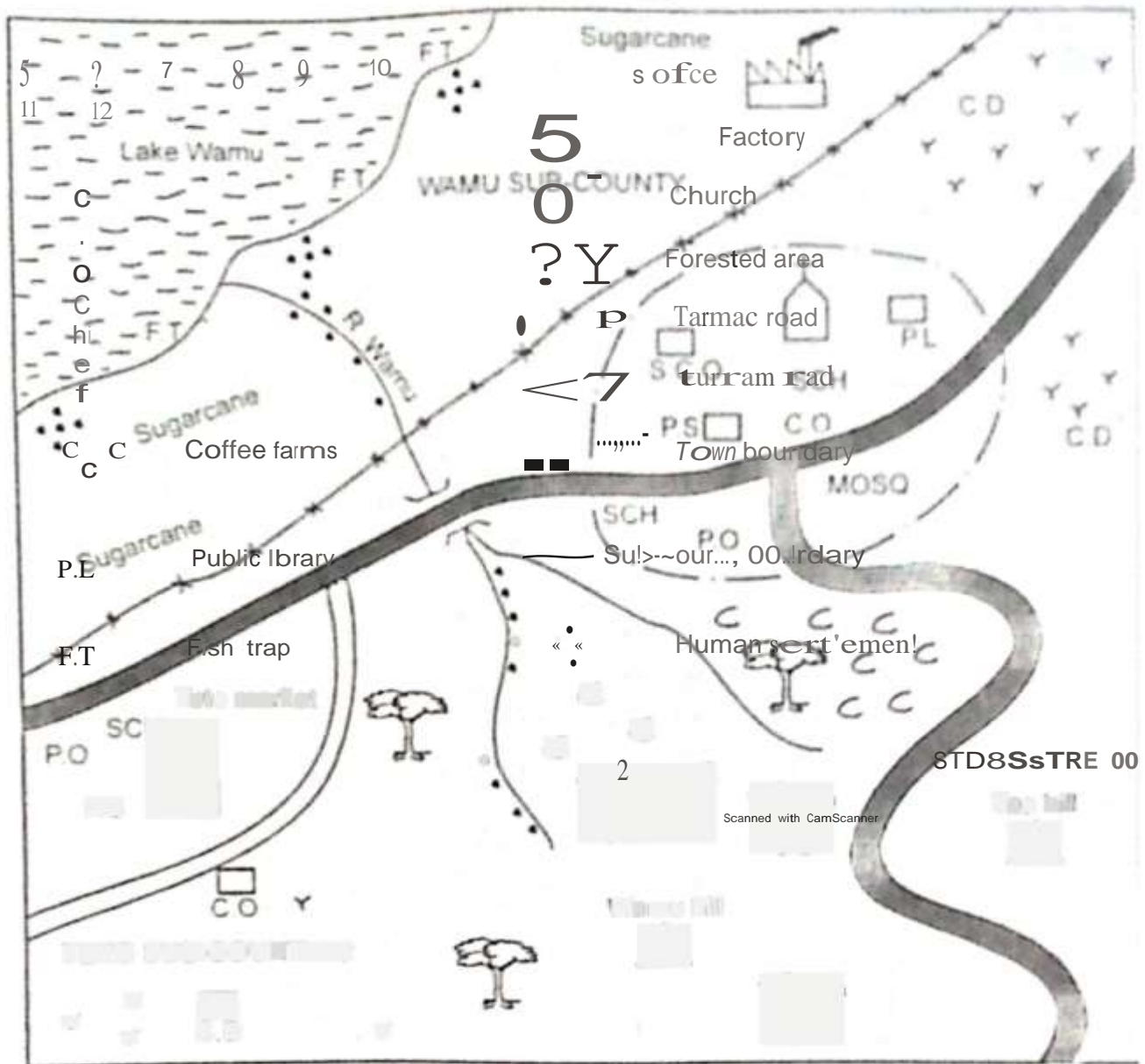
Email: info@jesmapublishers.com

PART E: SOCIAL STUDIES
WAMU AREA



PART I: SOCIAL STUDIES

WAMU AREA



SCALE: _____

CD	Chief's office
CO	Community office
FO	Forest office
SC	School
PS	Police station
CO	Coffee farm
PL	Public library
FT	Fish trap

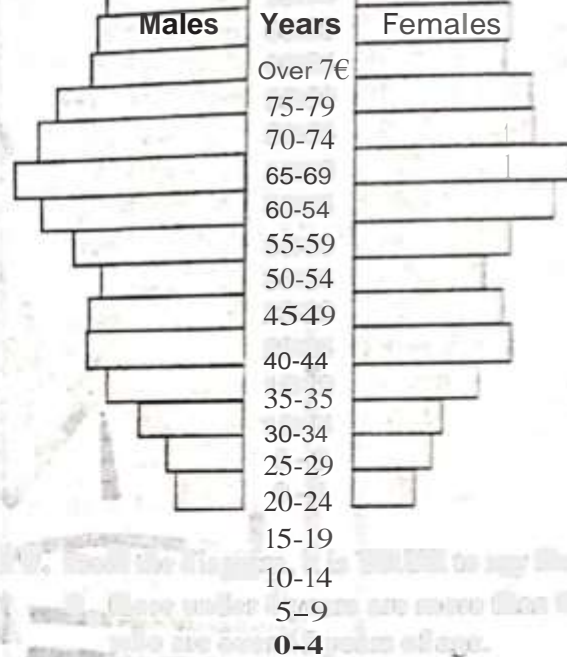
CD	Chief's office
[Symbol]	Factory
[Symbol]	Church
[Symbol]	Forested area
[Symbol]	Tarmac road
[Symbol]	Turrum road
[Symbol]	Town boundary
[Symbol]	Sub-county boundary
[Symbol]	Human settlement

Study the map of Wamu area and use it to answer questions 1 to 7

1. The land in Wamu area slopes towards
 - A. North West
 - B. North
 - C. North East
 - D. South East
2. The approximate length of the tarmac road from the junction at the town to the South East end is?
 - A. 6m
 - B. 8km
 - C. 12km
 - D. 20km
3. The climate experienced in Wamu sub-county is **LIKELY** to be
 - A. hot and dry
 - B. hot and wet
 - C. cool and wet
 - D. cool and dry
4. Human settlement and distribution in Wamu area is **MAINLY** influenced by
 - A. transport and communication
 - B. climate
 - C. economic activities
 - D. drainage
5. Wamu area is **LIKELY** to be
 - A. location
 - B. sub-county
 - C. district
 - D. county
6. The growth and development of the town in Wamu area is **MOSTLY** influenced by
 - A. the administrative offices.
 - B. rich agricultural neighbourhood.
 - C. road junction
 - D. fishing activities
7. Which one of the following social services is **NOT** offered in Wamu area?
 - A. Education
 - B. Health
 - C. Security
 - D. Religious services
8. Three of the following are functions of the board of management in a primary school. Which one is **NOT**?
 - A. Employing all teachers required in the school.
 - B. Ensuring the safety of pupils, teachers and

9. The following groups of people consist of Nilotes **EXCEPT**
 - A. Jie, Acholi and Karamajong
 - B. Japadhola, Dinka and Turkanz
 - C. Luer, Njemps and Iteso
 - D. Sandawe, Aweera and Afar

The diagram below shows a country's population structure. Use it to answer question 10



10. From the diagram, it is **TRUE** to say that
 - A. those under 4 years are more than those who are over 45 years of age.
 - B. birthrate is very high
 - C. there are more males than females 79 years of age.
 - D. young people are fewer than those in the working population.
11. Which one of the following is **NOT** a country in Africa?
 - A. Comoros
 - B. Mauritius
 - C. Cape Verde
 - D. Seychelles

12. The BEST way of encouraging citizens in

Kenya to obey the law is by

A. educating Kenyans on the importance

of observing the laws.

B. rewarding all Kenyans who maintain law

and order.

C. employing very many police officers to enforce the law.

D. arresting all lawbreakers and taking them

to prison.

3

STDSSTRE 05

22.1

Scanned with
CamScanner

W, s Im2rtuhs twaxi,skk
invest. zit

s n \ hindi,
ietabh :hti'

Musi is Art th tater ttn
&i

4,

15,

APs - r
est ?
wmch

HA.iew.gsweerse

t
ssh = = ON

\ tin
01i

| _'i,s\,
.a. = - gs,ses.s

18. The MAIN types of fish reared in fish farms in Kenya are

- A. Nile perch, dago and tuna
- B. Tilapia, trout and catfish
- C. Oyster, mudfish and mullet

D. Nile perch and mena

19. The MOST populated country in Africa is

- A. Egypt
- B. South Africa
- C. Nigeria

20. The major transport routes in Kenya are

- A. roads and railways
- B. air and sea
- C. roads and air
- D. air and sea

Use the map of Africa provided to answer questions 21 to 24

A. Kenya
B. Tanzania
C. Uganda
D. Rwanda

13. Malindi is hotter than Nairobi MAINLY because
- Malindi is nearer to the equator than Nairobi.
 - Nairobi is at a higher altitude than Malindi.
 - Malindi is nearer to the Indian Ocean than Nairobi.
 - Nairobi is at a lower altitude than Malindi.

14. Copper mining in Zambia is important MAINLY because it
- is a raw material for many industries.
 - promotes international trade.
 - generates foreign exchange.
 - creates job opportunities.

15. The following are members of a family.
- | | |
|----------------|-------------------|
| (i) uncles | (iv) grandfathers |
| (ii) daughters | (v) mother |
| (iii) father | (vi) nephew |
- Which of the following is the correct number of nuclear family members?
- (i), (iii), (v)
 - (i), (iii), (iv)
 - (i), (ii), (v)
 - (iii), (iv)

16. Which one of the following is TRUE about the Khoikhoi of Southern Africa?
- Decisions affecting the community were made through consensus.
 - Their nomadic life enabled them to develop a strong political system.
 - Their main economic activity was to trade with the Dutch.
 - The head of the senior clan became the king of the community.

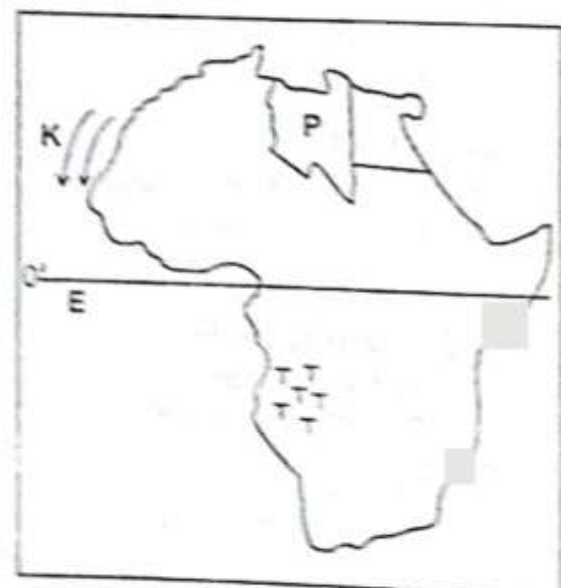
17. The statements below describe an early visitor to Eastern Africa.
- His mission in Eastern Africa was to look for David Livingstone.
 - He confirmed that the Zambezi had no connection with Lake Tanganyika.
 - He opened the door for Christian missionaries in Bagamoyo.
 - He died in 1844 in England.
- The statement above describes
- Sir Henry Morton Stanley
 - Seyyid Said
 - John Speke
 - William Mackinnon

18. The MAIN types of soil found in the Great Lakes region are
- clayey soil
 - clayey soil
 - clayey soil
 - clayey soil

19. The MAIN language group found in Africa is
- Ethiopia
 - Black Africa
 - Nigeria
 - Algeria

20. In order to ease congestion in major towns in Kenya, the government should
- encourage rural-urban migration
 - improve roads
 - promote tourism
 - construct bypass roads

Use the map provided to answer questions 21 to 24



21. The ocean currents marked K are called
- Warm canary currents
 - Cold Benguela currents
 - Warm Mozambique currents
 - Cold Mozambique currents

22. The MAIN language group found at area marked T is
- Bantu
 - Cushites
 - Khoisan
 - The West Atlantic

3. The country marked P is known as
 A. Tunisia B. Egypt
 C. Chad D. Libya

24. The line of latitude marked E crosses all the following countries EXCEPT
 A. Gabon B. Rwanda
 C. Congo Republic D. Uganda

25. The following are symbols of national unity. Which one is NOT? The
 A. court of arms
 • national language
 C. national flag
 D. national anthem

26. Who among the following is allowed to acquire dual citizenship in Kenya?
 A. The deputy president of the Republic of Kenya.
 B. The Chief Justice
 C. The head of all pastors in the country.
 D. The attorney general

31. The statements below describe a prominent leader in Kenya
 (i) He attended Thogoto Mission school.
 (ii) He was a champion of African freedom.
 (iii) He encouraged reconciliation between Africans and Europeans.
 (iv) He opposed majimboism
 The leader described above is LIKELY to be"
 A. Mzee Jomo Kenyatta
 B. Daniel Toroitich arap Moi
 C. Oginga Odinga
 D. Professor Wangari Maathai

28. Which one of the following combinations of pre-historic sites are found in Tanzania?
 Olorgesailie Nsogezi

39. Below are uses of a mineral in Kenya
 (i) It is used in the manufacture of cement
 (ii) It is used in making telescope and camera lens
 (iii) It is used in making tan
 (iv) It is used in making sulphuric acid
 The mineral with the above uses is likely to be

- A. Diatomite B. Soda ash
 C. Fluorspar D. Limestone

30. The following are ways of interaction among communities
 (i) birthday celebration
 (ii) migration
 (iii) trade
 (iv) the social media
 (v) games and sports

- Which of the following combinations shows ways in which communities interacted in the past as well as in modern times"
 A. (i) and (ii) B. (v) and (i)
 C. (iii) and (v) D. (iv) and (i)

31. The BEST way of solving conflicts involving two or more countries is
 A. leaving God to solve the conflict
 B. reporting the conflict at the international court of Justice
 C. involving a mediator who will talk to the disagreeing parties
 D. taking arms against one another by involving their armed forces

32. In Kenya, human rights are found in
 A. courts of law
 B. the constitution
 C. the national assembly
 D. all police stations

33. The MAIN problem facing trade in East Africa is

23. The country method B is known as

- A. Theim
- B. Magosi
- C. Ithad
- D. Ishango
- E. Kobi Fora
- F. Sango Bay

24. The following countries are all the following countries

- A. Olduvai Gorge
- B. Peninj
- C. George Bay
- D. Nganda

25. The following are all the following countries

- A. court of arms
- B. national language
- C. national flag
- D. national anthem

26. Who among the following is allowed to acquire dual citizenship in Kenya?

- A. The deputy president of the Republic of Kenya
- B. The Chief Justice
- C. The head of all parties in the country
- D. The attorney general

27. The statements below describe a government leader in Kenya

- (i) He attended Kilgore / Lincoln school
- (ii) He was a champion athlete
- (iii) He encouraged reconciliation between Africans and Europeans
- (iv) He opposed regionalism

The leader described above is known to be

- A. Mzee Jomo Kenyatta
- B. Daniel arap Moi
- C. Uhuru Kenyatta
- D. Professor Wangari Maathai

28. Which one of the following excavations of pre-Historic sites are found in Tanzania?

- | | |
|------------------|--------------------|
| A. Magosi | B. Ishango |
| C. Kobi Fora | D. Sango Bay |
| E. Olduvai Gorge | F. Peninj |
| G. Laetoli | H. Kalambo Isimila |

29. Below are uses of a mineral in Kenya

- (i) It is used in the manufacture of cement.
 - (ii) It is used in making electrical and electronic equipment.
 - (iii) It is used in making synthetic acid.
 - (iv) It is used in making glass.
 - (v) It is used in making pig iron.
- A. production of similar goods
 B. poor transport and communication networks.
 C. political and insecurity.
 D. inadequate capital to invest in trade.

STD8SSTRE 009 2021

30. The following are ways in which communities

- (i) Marketing activities
- (ii) Migration
- (iii) Trade
- (iv) The media outlet
- (v) Power and agents

Which of the following combinations shows ways in which communities interacted in the past as well as in modern times?

- A. (i) and (ii)
- B. (iv) and (v)
- C. (iii) and (v)
- D. (ii) and (iv)

31. The MAIN way of resolving conflicts involving two or more countries is

- A. leaving UN to solve the conflict
- B. reporting the conflict at the international court of justice
- C. involving a mediator who will talk to the disagreeing parties
- D. talking arms against one another by involving their armed forces.

32. In Kenya, human rights are found in

- A. courts of law
- B. the constitution
- C. the national assembly
- D. oil police stations

33. The MAIN problem facing trade in Eastern Africa is

- A. production of similar goods
- B. poor transport and communication networks.
- C. political instability and insecurity
- D. inadequate capital to invest in trade.

STD 8 SSTR 009 2021

4. The MAIN reason that makes the print media to be widely used in towns is
- A. that there are more people who have money to buy them
 - availability of more printing presses in towns,
 - (. the cheapest way of communication
 - D. high literacy levels in towns

35. Which one of the following is the MAIN cause of accidents on Kenyan roads?
- A. unroadworthy vehicles,
 - B. carelessness of road users.
 - C. overspeeding
 - D. bad weather

36. Three of the following are roles of political parties in Kenya. Which one is NOT?
- A. Ensuring that constituency and ward boundaries are drawn.
 - B. Respecting and promoting human rights; and freedoms,
 - C. Opening up the democratic space
 - D. Informing citizens about important issues through the media.

37. The following are conditions favouring the growing of a crop in Kenya.
- (i) A wide range of relief.
 - (ii) Rainfall of between 400mm to 2000mm annually.
 - (iii) moderate temperatures with the lowest at 19C and the highest at 28C
 - (iv) Well drained productive soils such as loam soils.

The conditions listed above favour the growing of?

- A. Coffee
- Maize
- C. Tea
- D. Wheat

38. The MAIN problem that was initially faced

the the duprm drawn helow to nwrr question



- 39). The weather instrument shown above is known as
- Minimum thermometer
 - Hygrometer
 - C. Maximum thermometer
 - D. Mercury thermometer

46. Which one of the following is TRUE about forestry in Africa?
- A. Planted forests are mostly found in highlands
 - B. The main type of forests are the extensive tropical rain forest.
 - C. Mangrove forests are continuous along the coast of Africa,
 - D. There is mixture of hardwoods and softwoods in Mediterranean forest.

41. Three of the following are TRUE about slash-and-burn agriculture. Which one is NOT?
- A. Farming activities were mainly done by hand.
 - B. Farmers practised crop rotation instead of plot rotation.

- C. People mainly grew food crops for home use.

- D. It was possible where there was plenty of land during the establishment of the Aswan Dam,

38. The MAIN reason that makes the print media (Daily) used in towns is
- A. siltation
 - B. inadequate funds
 - C. water-borne diseases
 - D. displacement of people
39. The cheapest way of communication is
40. High literacy levels in towns.

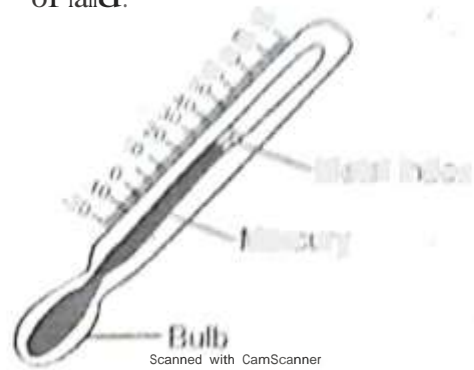
41. Which one of the following is the MAIN cause of accidents on Margas roads?
- A. unskilfuly vehicles.
 - B. carelessness of road users.
 - C. overloading
 - D. bad weather

42. Three of the following are NOT political parties in Kenya. Which one is NOT?
- A. Mbari
 - B. Kikuyu
 - C. Kenya
 - D. Kenya

43. The following are conditions favouring the growing of a crop in Kenya.
- (i) High rainfall
 - (ii) High temperature
 - (iii) High soil fertility
 - (iv) High soil moisture
- The conditions listed above favour the growing of
- A. Coffee
 - B. Maize
 - C. Tea
 - D. Wheat

44. The MAIN problem that was initially faced during the establishment of the Maseno High School is
- A. siltation
 - B. inadequate funds
 - C. water-borne diseases
 - D. displacement of people

The diagram below is used to measure the amount of land.



45. The weather instrument shown above is known as
- A. Barometer
 - B. Hygrometer
 - C. Anemometer
 - D. Mercury thermometer

46. Which one of the following is TRUE about forests in Kenya?
- A. Planted forests are mostly found in highlands.
 - B. The main type of forests are the extensive tropical rain forests.
 - C. Margrove forests are continuous along the coast.
 - D. There is a mixture of hardwoods and softwoods in Mediterranean forest.

47. Three of the following are TRUE about slash-and-burn agriculture. Which one is NOT?
- A. Working activities were mainly done by hand.
 - B. Farmers practiced crop rotation instead of plot rotation.
 - C. People mainly grew food crops like maize.
 - D. It was possible where there was plenty of land.

42. Three of the following leaders were present during the formation of the Kenya African National Union (KANU) IN 1960. Which one was not?
- A. Daniel Moi
- Tom Mboya
- C. James Gichuru
- D. Arthur Ochwada
43. Which one of the following factors LEAST explains why the Nandi resisted the British occupation of their land?
- A. The Nandi feared losing their land to the Europeans.
- B. The Nandi did not want to convert into Christians.
- C. The Nandi did not want to be ruled by outsiders.
- D. They did not want the railway to pass through their land.
44. Which one of the following is an economic right?
- A. Right of life
- B. Right to work
- C. Freedom of speech
- D. Right to clean water
45. The MOST efficient and expensive method of preserving fish is
- A. canning B. smoking
- C. freezing D. sun-drying
46. Which one of the following is the MAIN problem facing wildlife in Kenya today?
- A. pollution
- B. drought
- C. pests and diseases
- D. population increase
47. Kabaka Mutesa I and Waiyaki wa Hinga have one thing in COMMON. It is that they
- A. were kings in their communities.
48. In Eastern Africa, pipelines are MAINLY used to transport
- A. petroleum products
- B. liquid petroleum gas.
- C. crude oil
- D. water
49. Which one of the following is a natural factor that influences climate change?
- A. Volcanic eruptions
- B. Warming due to the green house effect.
- C. Desertification
- D. Damage to the O-zone layer
50. The following are sources of government revenue.
- (i) Entertainment taxes.
- (ii) Grants and donations from donors.
- (iii) Sales of business permits
- (iv) Sale of government licences.
- (v) Petroleum levy
- Which one of the following combinations shows sources of revenue for county governments only?
- A. (i), (ii)
- B. (ii), (iii), (iv)
- C. (ii), (iv), (v)
- D. (i), (iii), (v)
51. Who among the following are NOT members of the National Assembly?
- A. 12 nominated members.
- B. led their people to independence.
- C. resisted the British rule in Eastern Africa.
- D. agreed to work with the British colonialists.

48. Three of the following leaders were present during the formation of the African National Congress (ANC) in 1912. Which one was not?
- 47 elected women, each representing a county.
 - 290 members elected from 290 constituencies.
 - 16 women members nominated by political parties.

49. Which one of the following factors led to the occupation of their land?

52. The kingdom of Old Ghana was founded by
- The Mandé fleeing their land to the Niger river.
 - The Mandé did not want to convert into Christians.
 - The Mandé did not want to be invaded by outsiders.
 - They did not want the railway to pass through their land.

53. Which one of the following is an economic right?

- Right of life
- Right to work
- Freedom of speech
- Right to clean water

54. The most efficient and expensive method of processing fish is

- canning
- smoking
- freezing
- sun-drying

55. Which one of the following is the main problem facing wildlife in Kenya today?

- poaching
- hunting
- poets and diseases
- population increase

56. Askaria, Ntseke I and Mbuyi wa Ninga have one thing in common. It is that they

- were kings in their communities.
- led their people to independence.
- rejected the British rule in Eastern Africa.
- agreed to work with the British colonisers.

49. In Eastern Africa, pipelines are mainly used to transport

- the petroleum products
- people of Ghana
- Agikuyu people
- Soninke people
- Nyamwezi people

50. Which one of the following is a natural factor that influences climate change?

- Volcanic eruption
- Warming due to the green house effect
- Deforestation
- Damage to the Ozone layer

51. The following are sources of government revenue

- Income tax
- Stamp and Excise duty
- Sales tax
- Income tax
- Donations

Which one of the following combinations about sources of revenue for county government is correct?

- (1), (2), (3)
- (1), (2), (4)
- (1), (3), (4)
- (2), (3), (4)

52. Who among the following are NOT members of the National Assembly?

- 18 nominated members.
- 47 elected women, each representing a county.
- 290 members elected from 290 constituencies.
- 16 women members nominated by political parties.

53. The Kingdom of Old Ghana was founded by

- people of Ghana
- Agikuyu people
- Soninke people
- Nyamwezi people

I, wtstettieh hww then sllmte
wt Anina, the lenh wwd a stem

\ nn
R \swllmw
- tth
2'terahsmt

t4, A, wwwlhketsatruly tam
tit

-we'ts+al we, th MAIN

t,et

/ ', should std,

\ -rathy of aptatl tat at start

taatty st market tot pwul
des

w.iatwhtysfmat feels and lean

' amess to a pod transpwtt and
vwmatwnt,wk

S5, ,hon;ottl; floww tad lees is
ORREll mat,he' wth its

I lce As. lustia, am:ta

co t st. laes. grit

« | - tiatwowe,otsuwan

\ ,utp)t, l,d

see •Poss.vary putolhe watt,

r... 'es.rtheA. 'ante.ti,s

' o.,i.,cony - t,er bdk

'i, \hihe st the Aloin em i: ul th
United Nati (ttN) ditihst luul i
elute vamp'

\Iowlamd yieultm tai i

lt, \old Fool loyamm

t', t/mited National Hoh tmisin tu
Reuee

I th old anl.

D'O, Road ttamputt i the moth used Imm
of tu- pt in henya MAINE lwtaut

A), lot people in the vountt pelet to ut
toad tan-put

lt It iw the salet lotm ol t putt in
the evuut

t It is mot movwed fotm I tuamputt in
the country,

D. ltiwthe cheapest tumm ol tram- pt in the
country,

6t), he ofliect in-clape felections at th
constituency level is the

A. pesidiny olliee

I. polhy clerk

C. ttumiup otliect

b, chaperon of the Independent l lee total
and outdattestommm+ton

53. In order to prevent its citizens from being misled in West Africa, the French used a system known as

- A. Association
- B. Assimilation
- C. Direct rule
- D. Paternalism

54. When would the tourist spending fund for commercial purposes. The MAIN factor that he should consider is

- A. Availability of capital for a start.
- B. Availability of market for poultry products.
- C. Availability of poultry feeds and clean water.
- D. Necessity to a good transport and communication network.

55. Which one of the following trade fairs is COUNTRY A matched with its headquarters?

- A. F.C.M.W.E - Lusaka, Zambia
- B. F.C.M.E.S.E - Lagos, Nigeria
- C. S.H.C - Harare, Zimbabwe
- D. F.M.C - Nairobi, Kenya

56. The MAIN function of the Kenya Navy is to

- A. defend the country's air space against attacks
- B. recover pirates in any part of the country.
- C. keep watch on the Kenyan beaches.
- D. guard the country's water bodies.

57. The chief administrator of the judiciary is the

- A. chief registrar of the judiciary
- B. chief justice
- C. deputy chief justice
- D. judicial service commission

K.C.P.E PREDICTION WILL BE OUT ON 5TH MARCH 2021

021

58. Which one of the following agencies would be responsible for the distribution of food in

- A. Food and Agriculture Organisation
- B. World Food Programme
- C. United Nations High Commission for Refugees
- D. The World Bank.

Scanned with CamScanner

59. Road transport is the mostly used form of transport in Kenya MAINLY because

- A. Most people in the country prefer to use road transport
- B. It is the safest form of transport in the country.
- C. It is most improved form of transport in the country
- D. It is the cheapest form of transport in the country.

60. The officer in charge of elections at the constituency level is the

- A. polling officer
- B. polling clerk
- C. returning officer
- D. chairman of the Independent Electoral and Boundaries Commission.

K.C.P.E PREDICTION WILL BE OUT ON 5TH MARCH 2021

PART IE: RELIGIOUS EDUCATION

"I CIOM / CHRISTIAN RI IGIU" EDUCATION

1. **wetting to (ienei» tury fctation, \ht and Le were teated by to' \hllh om of the following tatementp TRt'!**
A. I've **w**created to be **dms' vamptlu** li l e named all the creature on the eat]
(Eve w ~teated to be children fr Ad
, Hoth Adam and Eve wete teated at th me time
62. - "il! yo weep away the iphteu ith tl wiewled' what if thens ate Tilt rlhtest people in the city?" Gen t- 'l '4, Who ams the following people pLeaded with God for l' cities of Solon and Gomorrah'
A. Noa! IH Ab ha
C. Lot D, Moe
63. \Vliklt aIII• P'l' III• N!l' ~ll• ptll•,•• II, ... original Tome ofAtrhhn ~fore he was cntt, it by ool **F**
A. can ~}. Ur
€ Iraa p- 'yypt
64. Wh'rh <III: III' ... foll(I'l'"" 's th,/i/rAIN II:II:,III why Pharaoh he King; * Egypt had ordered h; Sotters and midwives, kill very rnet' male chi'd that wrs boin'
A. The buy elilten, >, + s soy in vyt.
II. The l;rnclics hntl li-ik-l to follow hl' • , / commands,
C. He wanted, the Israelites to pO back to their country.
D. He feared the Israelites would increase nnd became a threat.
65. When King Pharaoh refused to set the Israelites free, God commanded Moses to use his staff to cause the plagues that would force Pharaoh to let them go. Which one of the following pLagues made Pharaoh let the Israelites po? The
• plague of blood.
• plague of frogs.
C. death of Egyptirn, isborns.
D. plague , oils,
66. According to Number; 27:18, Who among the fe'lowing people was chosen a; Moses'
- t', Whi' one of the to lto/lug latent 'tt ue about the juule In [rel A 'me] w the lit jde in Ir I, «ttiel vu» the Wt jdpe tel .', hde wete appointed by in), Sanson wn tl troutet judge
- t", vheh non of the followia pro le
wn
o'it n judge and a prophets In Iref
• hael I, AbIII
t', Ether D, Debouch
- (*, he loy that w ■ ed to life try prophet: ih mt tho on of tle
, widow of Nin,
, 'Unamite woman
t', widow of /cphatl
, the man called Iiru
- 70 he following prophezies concern Ju wa de by one of the prophets.
) A will bw tj god news to the poor
) I wlb recover lgl t to the btldr
«pt will let frei the oppressed
Wlio among the followit prophet» made the ove prophecy?
! Joel ,, I. Micah
C Isalah D, Jeremial
- 71, According to Like 2:21-40 When Joreph and Mary took baby Jesus to the tmp!: for dedication they found the following +-ple, Who were they?
• Simeon and Annnh
I, Zachariah and Elizabeth
C, Simeon nnd Elizabeth
D, Zacharinh and Annal
- 7, From the incident when Jesus ttende the passover festival at the age of twelve, Christian learn that children should
A. obey their parents.
I, be taken for passover festival
C. nlwnays accompany their parent for event.
D, always remain at the temples with teacher.

PART II: RELIGIOUS EDUCATION

SECTION 73

CHRISTIAN RELIGIOUS EDUCATION

successor?

- A. Caleb
- B. Joshua

- C. Aaron
- D. Jethro

61. Which one of the following events did NOT take place during the baptism of Jesus?
- A. The heavens were opened.
 - B. A voice was heard from heaven.
 - C. The curtain was torn into two.
 - D. The Holy Spirit came down in form of a dove.
62. Which one of the following people was NOT a judge in Israel?
- A. Gideon
 - B. Samson
 - C. Jael
 - D. Deborah
63. The boy that was killed to life by prophet Elisha was the son of the
- A. widow of Sarepta
 - B. Shunammite woman
 - C. widow of Nabal
 - D. the man called Naaman
64. The following prophecies concerning Jesus was made by one of the prophets.
- A. Isaiah
 - B. Jeremiah
 - C. Ezekiel
 - D. Amos
65. Which one of the following is the biblical reason why Pharaoh the King of Egypt had ordered his soldiers and servants to kill every Israelite male child that was born?
- A. The boy children were being raised in Egypt.
 - B. The Israelites had failed to follow his command.
 - C. He wanted to exterminate them from his country.
 - D. He feared the Israelites would increase and become a threat.
66. When King Pharaoh refused to set the Israelites free, God commanded Moses to use his staff to cause the plagues that would force Pharaoh to let them go. Which one of the following plagues made Pharaoh let the Israelites go?
- A. plague of blood.
 - B. plague of frogs.
 - C. death of Egyptian children.
 - D. plague of hail.
67. According to Numbers 27:18, Who among the following people was chosen as Moses' successor?
- A. Aaron
 - B. Caleb
 - C. Joshua
 - D. Jethro

73. Which one of the following events did NOT take place during the baptism of Jesus?
- A. The heavens were opened.
 - B. A voice was heard from heaven.
 - C. The curtain was torn into two.
 - D. The Holy Spirit came down in form of a dove.
74. Which one of the following people was NOT a judge in Israel?
- A. Gideon
 - B. Samson
 - C. Jael
 - D. Deborah
75. The boy that was killed to life by prophet Elisha was the son of the
- A. widow of Sarepta
 - B. Shunammite woman
 - C. widow of Nabal
 - D. the man called Naaman
76. The following prophecies concerning Jesus was made by one of the prophets.
- A. Isaiah
 - B. Jeremiah
 - C. Ezekiel
 - D. Amos
77. Which one of the following is the biblical reason why Pharaoh the King of Egypt had ordered his soldiers and servants to kill every Israelite male child that was born?
- A. The boy children were being raised in Egypt.
 - B. The Israelites had failed to follow his command.
 - C. He wanted to exterminate them from his country.
 - D. He feared the Israelites would increase and become a threat.
78. When King Pharaoh refused to set the Israelites free, God commanded Moses to use his staff to cause the plagues that would force Pharaoh to let them go. Which one of the following plagues made Pharaoh let the Israelites go?
- A. plague of blood.
 - B. plague of frogs.
 - C. death of Egyptian children.
 - D. plague of hail.
79. According to Numbers 27:18, Who among the following people was chosen as Moses' successor?
- A. Aaron
 - B. Caleb
 - C. Joshua
 - D. Jethro

74. Blessed are those who are persecuted for righteousness of their is the kingdom of God. Matthew 5. These words were spoken by Jesus
- during his baptism.
 - during the sermon on the mount.
 - when choosing the twelve disciples.
 - during his temptations in the wilderness.
75. Which one of the following parables of Jesus teaches Christians that God always gives us a second chance? The
- lost son and Lazarus.
 - unmerciful servant.
 - unfruitful fig tree.
 - good Samaritan.
76. While Jesus was on earth, He performed many miracles. Which one of the following was not supposed to have hindered or prevented such miracles?
- Love
 - Patience
 - Peace
 - Faith
77. Which one of the following is the MAIN reason why Jesus asked his disciples to pray all night in the night of Olivet? He wanted them to
- avoid being taken by demons.
 - avoid falling into temptation.
 - be ready to fight their enemies.
 - watch Jesus which direction the enemy would come.
78. Which one of the following activities was done by Jesus in preparation for his coming death?
- Feeding of the five thousand people.
 - Visiting the tomb of Lazarus.
 - Washing the feet of his disciples.
 - Praying them a sermon on the mount.
79. Which one of the following is the MAIN lesson that Christians learn from the resurrection of Jesus Christ? Christians should be
- hopeful
 - patient
 - obedient
 - humble
80. The following are Christian values. Which one is NOT?
- Purity
 - Honesty
 - Mercy
 - Fame
81. Who among the following people taught that faith without action is dead?
- Paul
 - James
 - Peter
 - Timothy
82. In the early church the disciples agreed to choose men who were filled with the Holy Spirit and wisdom in order to assist in the work of distributing food to the widows. The following people were chosen EXCEPT
- Philip
 - Timothy
 - Parmanas
 - Prochorus
83. Which one of the following is NOT a role of parents in African Traditional Society?
- Baptism
 - In-carnation
 - Death
 - Birth
84. Which one of the following activities is found in BOTH Christian and African Traditional practices during weddings?
- Sharing of gifts.
 - Signing of vows.
 - Offering of sacrifices.
 - Praying for the couple.
85. Which one of the following activities in Traditional African Communities was MOST likely started out by an elder?
- Circumcision
 - Harvesting the seed
 - Offering to the gods
 - Harvesting chickens
86. The first time a student answers correctly from another paper is a. As a Christian what is the BEST action to take?
- Report him to the class teacher.
 - Give him a thorough beating.
 - Report him to the headteacher.
 - Discourage him and ask him to answer what he had written.
87. Four pupils spent their leisure time as follows. Who among them spent his leisure time BEST as a Christian?
- Read, attended bible study.
 - Watch TV and the net.
 - Swim & participated in all club sports.
 - Law, attended Christian church.
88. Mike found himself in the company of drunkards. As a Christian what is the BEST thing for him to do?
- Play for them.
 - Join them in drinking.
 - Report them to the nearest police station.
 - Advise them about the dangers of getting drunk.
89. Which one of the following is a fruit of Holy Spirit?
- Peace
 - Faith
 - Progress
 - Healing
90. Which one of the following gets its information from a NEGATIVE attitude on Africans? This
- teaches Christianity.
 - explains the Bible.
 - enslaved Africans.
 - taught Africans how to read and write.

Scanned with CamScanner