



DIGITAL EDITION
STANDARD EIGHT

SIGNAL EXAMS 2020

SOCIAL STUDIES AND RELIGIOUS EDUCATION

Time: 2 hours 15 minutes

READ THESE INSTRUCTIONS CAREFULLY

1. You have been given this question booklet and a separate answer sheet. The question booklet contains 90 questions.
2. Do any necessary rough work in this booklet.
3. When you have chosen your answer, mark it on the **ANSWER SHEET**, not in the question booklet.

HOW TO USE THE ANSWER SHEET

4. Use an ordinary pencil.
5. Make sure that you have written on the answer sheet:
**YOUR INDEX
NUMBER YOUR NAME
NAME OF YOUR SCHOOL**
6. By drawing a **dark line** inside the correct numbered boxes mark your full Index Number (i.e. School Code Number and the three-figure Candidate's Number) in the grid near the top of the answer sheet.
7. Do not make any marks outside the boxes.
8. Keep your answer sheet as clean as possible and do not fold it.
9. For each of the questions 1 – 90, four answers are given. The answers are lettered A, B, C and D. In each case only **ONE** of the four answers is correct. Choose the correct answer.
10. On the answer sheet the correct answer is to be shown by drawing a **dark line** inside the box in which the letter you have chosen is written.

Example

**In the question
booklet:**

- 33.** The following early visitors came to Eastern Africa as explorers except

- A. John Speke
- B. H.M. Stanley
- C. Vasco Da Gama
- D. Seyyid Said

The correct answer is “D”

On the answer sheet:

31 (A) (B) (C) (D) **32** (A) (B) (C) (D) **33** (A) (B) (C) (D) **34** (A) (B) (C) (D) **35** (A) (B) (C) (D)

In the set of boxes numbered **33**, the box with the letter **D** printed in it is marked.

11. Your **dark line MUST** be within the box.

12. For each question **ONLY ONE** box is to be marked in each set of four boxes.

This question paper consists of 8 printed pages

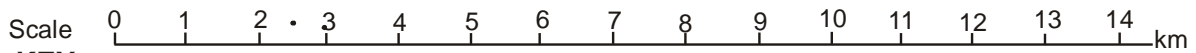
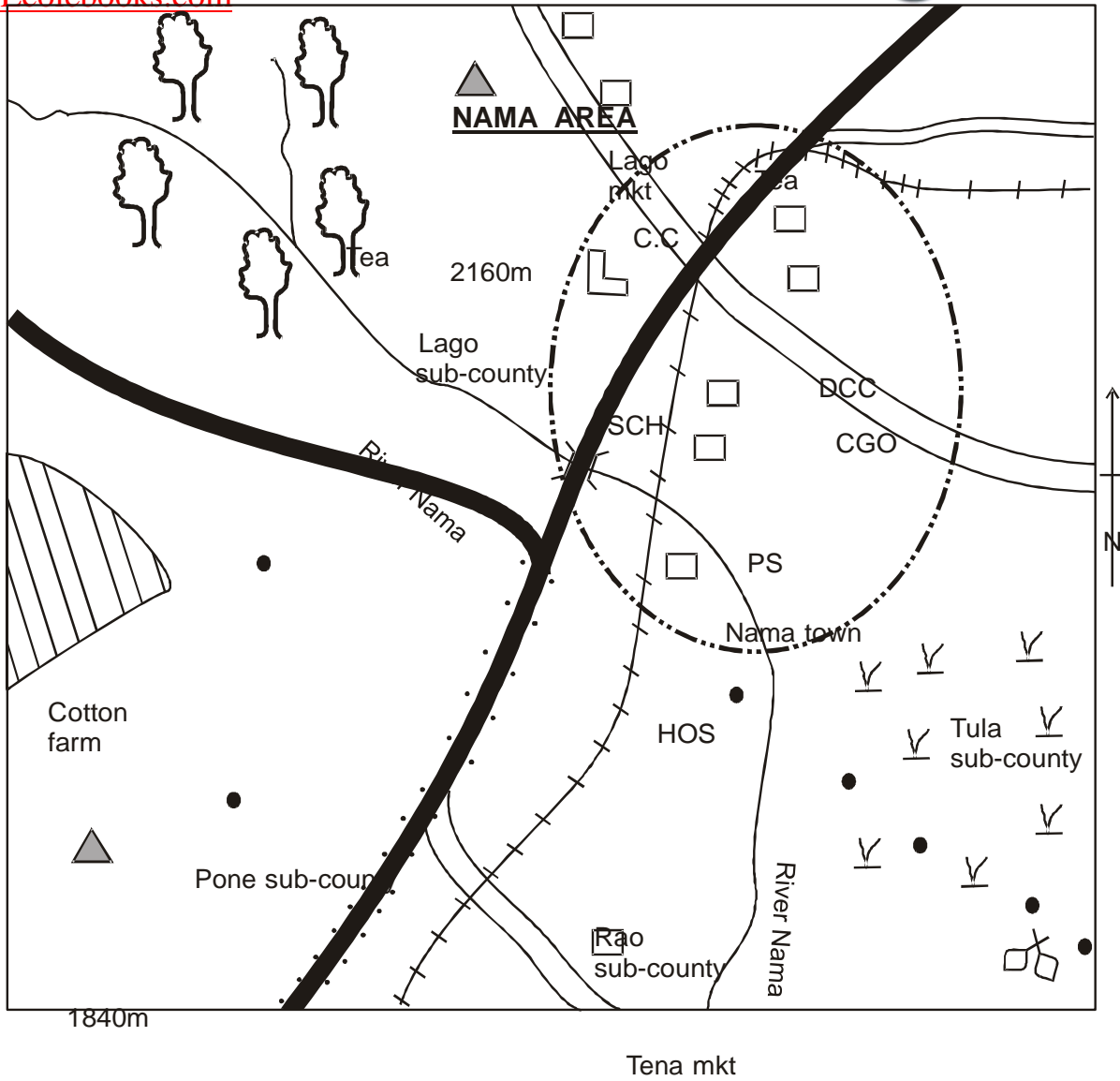
© All rights reserved. No direct reprint, duplication, photocopying or sharing on social media platforms without the prior written permission of the publisher.

**Signal Publishers
Limited**

Signal Exams

@Signalexams

—



KEY

	Tarmac road		SCH School		C.C Chief's camp
	Murram road		Quarry		mkt Market
	Forest		River and bridge		Hill
	Permanent buildings		HOS Hospital		Scrubs

Town boundary		Settlement		Railway line	
CGO	County Governor's	PS	Police station	DCC	Deputy county commissioner

Study the map of Nama Area and answer questions 1 - 7.

1. What is the general direction of the flow of River Nama?
 - A. South West.
 - B. North East.
 - C. South East.
 - D. North West.

2. Nama area is likely to be a
 - A. sub-county
 - B. county
 - C. constituency
 - D. ward.

3. What evidence from the map shows that the Northern part of Nama area receives adequate rainfall?
 - A. Tea
 - B. Cotton
 - C. Hill
 - D. River.

4. Three of the following social services and provided in Nama town **except:-**
 - A. medical services
 - B. educational services
 - C. security services
 - D. recreational services.

5. Which one of the following is the **main** source of revenue for Nama town?
 - A. Fines paid by law breakers.
 - B. Parking fees.
 - C. Money paid by business people.
 - D. Fees paid by visitors in the town.

6. The settlement pattern in Nama area can be described as:-
 - A. clustered B. linear
 - C. sparse D. dense.

7. Which one of the following types of soil is **likely** to be found in the Western part of Nama area?

- A. Volcanic soil. B. Clay soil.
- C. Sandy soil. D. Alluvial soil.

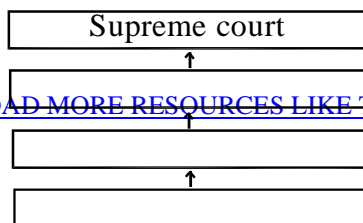
8. Which one of the following communities do **not** belong to the same language group?
- A. Nyamwezi, Baganda, Agikuyu.
 - B. Nuer, Shilluk, Karmojong.
 - C. Orma, Rendile, Dahalo.
 - D. Kipsigis, Elmolo, Pokomo.
9. Which one of the following is the **least** reason why the Bantu migrated from their cradle land?
- A. Population pressure.
 - B. External attacks.
 - C. Search for fertile land.
 - D. Desire for adventure.
10. The following are forms of communication
- (i) *Telephones.*
 - (ii) *Bronchures.*
 - (iii) *Email.*
 - (iv) *Radio.*
 - (v) *Courier services.*
- Which one of the above forms consists of electronic media **only**?
- A. (iii), (iv), (v).
 - B. (i), (iii), (iv).
 - C. (i), (iii), (v).
 - D. (i), (ii), (iii).
11. Which one of the following is the **main** function of the school board of management in public primary schools?
- A. Punishing errant teachers.
 - B. Initiating development projects.
 - C. Punishing pupils who come to school late.
 - D. Employing non-teaching staff.
12. One of the duties of the African chiefs in Kenya during the colonial period was to:-
- A. conduct raids on other communities

- B. provide food to freedom fighters
- C. organize for supply of labour to settler farms
- D. nominate people to the native councils.

SIGNAL/SOCIAL/STD.

13. Who among the following African leaders collaborated with the Europeans during the colonial invasion in Kenya?
- A. Koitalel Arap Samoei.
 - B. Laibon Lenana.
 - C. Mekatilili wa Menza.
 - D. Dedan Kimathi.
14. The **main** reason why the United Nations (UN) was established was to:-
- A. promote economic cooperation in the world
 - B. conserve the environment
 - C. promote peace in the world
 - D. take care of refugees in the world.
15. Which one of the following is **not** a social right to the Kenyan citizens?
- A. Right to marry.
 - B. Right to health care.
 - C. freedom from discrimination.
 - D. freedom of speech.
16. Which one of the following groups of crops in Kenya are grown **mainly** in plantations?
- | | |
|-------------------------------------|-----------------------------------|
| A. Vegetables
Sisal
Potatoes. | B. Tea
Coffee
Sugarcane. |
| C. Sorghum
Cassava
Beans. | D. Maize
Pyrethrum
Bananas. |
17. Who among the leaders in the senate is an ex-officio member?
- A. Elected senators.
 - B. Youth representatives.
 - C. Disabled representatives.
 - D. Speaker.
18. The diagram below shows the hierachy of the court system in Kenya.

K
High court
C



Which of the following courts is represented by letter **K**?

- A. Principal magistrate court.
- B. Court of appeal.
- C. Chief magistrate court.
- D. Industrial court.

19. In Kenya the road safety education is taught in school in order:-

- A. to reduce the number of road carnage in the country
- B. to enable motorists to drive safely
- C. to encourage people to use road transport when travelling
- D. to know the number of vehicles on the roads.

20. In African traditional society, trees shedding leaves was associated with:-

- A. coming of rain
- B. onset of the drought
- C. appearance of a new moon
- D. change of climate.

21. In Kenya the human rights are guaranteed by the:-

- A. national police service
- B. chief justice
- C. president
- D. constitution.

22. Three of the following statements are correct about horticultural farming in Netherlands **except** one. Which one is it?

- A. Production is highly mechanised
- B. Most of the products are locally consumed.
- C. It is intensively done in polders.
- D. Mixed farming is practised.

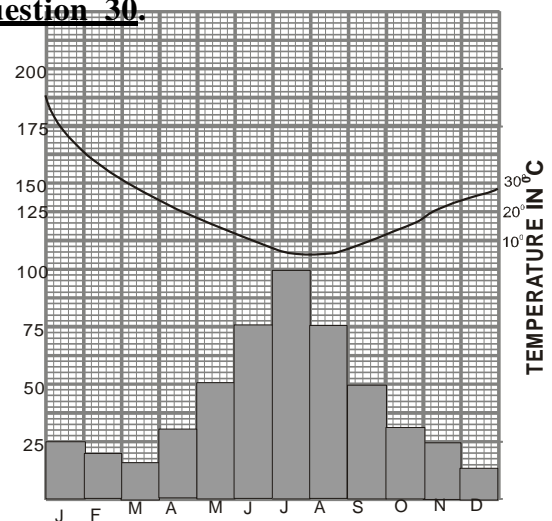
23. Who among the following is **not** a member of the county executive committee?

- A. Governor
- B. Senator
- C. Appointed county executive member
- D. Deputy governor

24. Which one of the following historical events took place in Kenya in 1991?
- A. Kenya became a republic.
 - B. Section 2A of constitution of Kenya was repealed.
 - C. Introduction of multi-party politics.
 - D. The national coalition was formed.
25. Which one of the following African countries is sparsely populated?
- A. Nigeria.
 - B. Egypt.
 - C. Western Sahara.
 - D. Uganda .
26. Below is a description of a community in Africa.
- (i) Carried out initiation for boys and girls.
 - (ii) Had hunting dogs.
 - (iii) Decision making on issues were made through general agreement.
- The community described above is:-
- A. Khoikhoi
 - B. Baganda
 - C. San
 - D. Abagusii.
27. Julius Nyerere and Haile Selassie had one thing in common. It is that:-
- A. they were the first president of Kenya
 - B. they were the founder members of OAU
 - C. each formed a political party that led his country to independence
 - D. favoured economic and social equality in Kenya.
28. The main factor influencing vegetation distribution in Africa is:-
- A. altitude
 - B. climate
 - C. relief

29. Which one of the following is **not** a benefit of democracy?
- A. Good governance is practised and upheld.
 - B. There is minimal transparency.
 - C. Promotes human rights.
 - D. Equality and justice are encouraged.

Use the diagram below to answer question 30.



D. soils

MONTHS

30. Which of the following statements is **not** true about the above climatic graph?
- A. Rainfall experienced is influenced by westerly winds.
 - B. Experiences off shore winds in winter.
 - C. Has a temperature range of about 15^oc.
 - D. Has hot dry summers.
31. The following are social functions of the common wealth. Which one is **not**?
- A. encouraging trade among member countries.
 - B. promoting the rule of law.
 - C. reconciling warring member countries.
 - D. holding games and sports.

32. Which one of the following is the **main** reason why the Fulani of Northern Nigeria keep large herds of cattle?
- A. Large herds provide security against loss of cattle through disease.
 - B. Cattle are the community's source of food.
 - C. Fulani have extensive grazing lands in Northern Nigeria.
 - D. Cattle are regarded as a sign of wealth.
33. Which one of the following is an example of a service industry?
- A. Milk processing.
 - B. Bicycle repair.
 - C. Bread making.
 - D. Fruit canning.
34. Below are historical events which took place in Kenya before 1918.
- (i) *Kenya became a British protectorate.*
 - (ii) *Legco was established.*
 - (iii) *Nandi resistance broke out.*
- The **correct** order in which the events occurred is:-
- A. (iii), (i), (ii)
 - B. (i), (ii), (iii)
 - C. (ii), (i), (iii)
 - D. (i), (iii), (ii).
35. One of the uses of flourspar is to:-
- A. soften hard water
 - B. strengthen steel and aluminium
 - C. make furnaces and insulators
 - D. make paint.
36. Which one of the following dams in Africa is **correctly** matched with river on which is located?
- | Dam | River |
|---------------|------------------|
| A. Kariba dam | - River Tana. |
| B. Akosombo | - River Zambezi. |
| C. Aswan High | - River Nile. |
37. Below are some minerals mined in Eastern Africa.
- (i) *Diatomite.*
 - (ii) *Copper.*
 - (iii) *Flourspar.*
 - (iv) *Diamonds.*
- Which combination of the minerals listed above is mined in Kenya?
- A. (i) and (iii).
 - B. (ii) and (iii).
 - C. (i) and (ii).
 - D. (ii) and (iv).
38. The following describes a climatic region in Kenya:
- (i) *Receives relief rainfall.*
- 0
- D. Masinga Dam - River Volta.

(ii) *Temperatures range from 18 c to 25^oc.*

(iii) *It is cool and wet.*

The region described above is:-

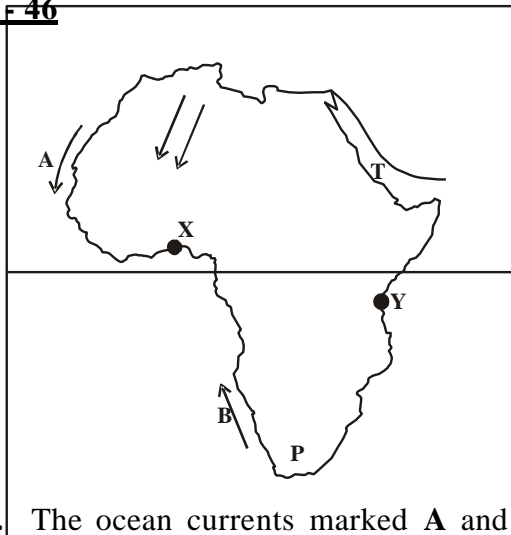
- A. modified equatorial
- B. modified tropical
- C. montane
- D. mediteranean.

39. Children are expected to take part in family duties because it:-
- A. helps them develop courage
 - B. promotes their physical development
 - C. is a sign of respect to the parents
 - D. prepares them for future.
40. Deposition lakes are mainly formed as a result of:-
- A. ox- bow lakes
 - B. continous river erosion
 - C. meandering of the river
 - D. lessened speed of water
41. Which one of the following is a similarity between the population of Kenya and Germany?
- A. Life expectancy is low.
 - B. There is high population growth rate.
 - C. Slightly more females than males.
 - D. There are more youth than old people.

42. Which one of the following political parties led Ghana to independence in 1957?
- National Muslim Liberation.
 - Convention People's Party.
 - Ghana African National Union.
 - United Gold Coast Convection party.
43. Which one of the following groups of lakes is made up of the fresh water lakes **only**?
- | | |
|------------------------------------|--------------------------------------|
| A. Tanganyika
Kyoga
Amboseli | B. Kyoga
Chad
Turkana |
| C. Victoria
Natron
Magadi | D. Elementaita
Benguela
Magadi |

Use the map below to answer question

44 - 46



44. The ocean currents marked **A** and **B** have one thing in common. Which one is it?
- They both result to desert conditions on the adjacent land.
 - Both currents originates from the Indian ocean.
 - They encourage fishing along the coast.

45. Which of the following communities is **likely** to be found in the region marked **P**?
- Ngoni
 - Wolof
 - Xhosa
 - Berbers
46. The road network that runs from town **X** to town **Y** is known as:-
- the Great North road.
 - the Trans-African highway.
 - Trans-Saharan Highway.
 - Cotonou-Gao-Oudja highway
47. The stretch that separates Africa from Arabia marked **T** is called:-
- Suez Canal
 - Strait of Gilbrator
 - Straits of Bab-el Mandeb
 - Isthmus of Suez.
48. Which of the following is an example of erosion lake?
- Manzala.
 - Gambi.
 - Rukwa.
 - Teleki.
49. In Kenya, cabinet secretaries are appointed by the:-
- national assembly
 - senate
 - president with approval of the parliament
 - political parties.
 - They are both cold currents.

50. Which one of the following is **not** associated with Gamal Abdel Nasser of Egypt?
- A. He encouraged farmers to form agricultural co-operatives.
 - B. Constructed Aswan high dam.
 - C. He carried out land reforms.
 - D. He abolished sharia courts.

51. The **main** reason why the Portuguese came to the East coast of Africa was to:-
- A. conquer the African states
 - B. obtain raw materials for their industries
 - C. control trade in the Indian Ocean
 - D. search for market for manufactured goods.
52. Which one of the following methods of irrigation is used in Mwea Tebera irrigation scheme?
- A. Basin and canal.
 - B. Overhead and furrow.
 - C. Sprinkler and overhead.
 - D. Furrow and canal.
53. The time in town A which is 15°W is 6am. If the time in town B is 8am. On which longitude is town B located?
- A. 30°E .
 - B. 30°W .
 - C. 15°E .
 - D. 45°E .
54. The following is a list of relief features in Africa.
- (i) *Akwapim highlands.*
 - (ii) *Bie plateau.*
 - (iii) *Usambara mountains.*
 - (iv) *Cape ranges.*
 - (v) *Ahaggar highlands.*
- Which of the above features were formed through the same process?
- A. (ii) and (iii).
 - B. (i) and (iv).
 - C. (ii) and (v).
 - D. (i) and (ii).
55. In Kenya, the **main** role of the judiciary is to:-
- A. interpret laws.
 - B. supervise elections
 - C. maintain law and order
 - D. make laws.
56. The **main** tourist attraction in Switzerland is:-
- A. wildlife
 - B. natural sceneries
 - C. sporting activities
 - D. historical and pre-historical sites
57. Which one of the following statement is **true** about the climate of Kenya highlands. The highlands:-
- A. have one rainy season
 - B. receive rain from South East moonsoon winds
 - C. are hot throughout the year
 - D. experience cool and dry conditions.
58. The **main** factor that has contributed to growth of Nakuru town is:-
- A. diatomite mining in the region
 - B. rich agricultural surrounding
 - C. presence of flamingoes in lake Nakuru
 - D. good means of transport.
59. Jebet a standard 4 pupil was given more balance than what she was to get by a shopkeeper. She decided to return the extra money. Which element of a good citizen did she demonstrate?
- A. Integrity.
 - B. Patriotism.
 - C. Loyalty.
 - D. Honest.
60. The National police service in Kenya is headed by the:-
- A. inspector general
 - B. commandant
 - C. chief of general staff
 - D. cabinet secretary for defence .

PART II: RELIGIOUS EDUCATION

SECTION A

CHRISTIAN RELIGIOUS EDUCATION

- A. Courage B. Humility
C. Faithfulness D. Honesty.
61. Which one of the following explains why the creation of man is different from other creatures?
- A. God rested after creating him.
 - B. God blessed man after creating him.
 - C. Man was the last of Gods creation.
 - D. Man was given power to care for the environment.
62. The **main** reason why Noah build an ark was to:-
- A. store food stuffs for his family
 - B. separate the sinners from the righteous
 - C. save Noah's family
 - D. assist him to restore God's relationship with man.
63. Which one of the following is a lesson that Christians learn from the story of Joseph in prison?
- A. God protects the innocent.
 - B. People should look after their parents.
 - C. People should have dreams.
 - D. God forgives his people.
64. The **main** lesson Christians learn from the call of Moses is that they should:-
- A. do God's wish
 - B. be tolerant
 - C. obey God's command
 - D. perform miracles.
65. During the night of passover, the Israelites smeared the door posts with blood in order to:-
- A. mark the houses of the Israelites
 - B. show that they are God's chosen people
 - C. show their readiness to leave Egypt
 - D. show that God was with them .
66. King Solomon sinned against God when he:-
- A. used forced labour and taxation when building the temple
 - B. allowed the worship of other gods
 - C. killed the prophets of God
 - D. married many wives.
67. Which one of the following qualities of

leadership was **mainly** shown by David when he fought Goliath?

- A. Mixing with sinners
- B. Washing the feet of the disciples
- C. Riding on a donkey to Jerusalem
- D. Visiting Martha and Mary.

68. Which one of the following statements is **true** about the teaching of Jeremiah on the new covenant?
- A. God would punish children for sins of their parents.
 - B. Israelites will live in peace forever.
 - C. Israelites would serve God as priests.
 - D. The laws would be written in people's hearts.
69. The boy raised to life by prophet Elijah was the son of the:-
- A. Widow of Nain
 - B. Shunammite woman
 - C. Window of Zarepath
 - D. Cannanite man, Jaines.
70. Zechariah doubted when the angel told him that his wife was going to have a son because:-
- A. the angel was like a human being
 - B. he had lost hope of getting a child
 - C. his wife was known to be barren
 - D. the angel said that the son would be great.
71. King Herod wanted to kill baby Jesus when he was born because he feared that Jesus would:-
- A. overthrow him as a ruler of the jews
 - B. stop people from going to the synagogue
 - C. stop people from paying taxes to Ceasar
 - D. convert the Jews to another religion.
72. "The son of man is the Lord of the sabbath" (**Luke 6:5**) Those words were spoken by Jesus Christ when:-
- A. his disciples picked the ears of corn .
 - B. he healed the woman with the flow of blood
 - C. he healed a paralytic man
 - D. he calmed the storm
73. From the incidence when Jesus calmed the storm Christians learn that they should:-
- A. be tolerant B. be obedient
 - C. be honest D. ask for help.
74. The parable of the friend at midnight teaches Christians that they should:-
- A. be ready to forgive others
 - B. ask for food from neighbours
 - C. ask for advice from neighbours.
 - D. pray persistently
75. Which one of the following actions of Jesus

shows that a leader is a servant?

76. “I find no reason to condemn this man (**Luke 23:4**) who among the following people said this during the trial of Jesus?
A. Pilate B. The High priest
C. Barnabas D. King Herod
77. “I promise you that today you will be in paradise with me” (**Luke 23:43**). Jesus said these words when he was:-
A. at the sea of Galilea
B. on the cross
C. on the way to Emmaus
D. in the garden of Gethsamane .
78. Who among the following people offered money to Simon Peter and John so as to receive the Holy spirit?
A. Cornelius
B. James
C. Simon the magician
D. Joseph of Arimathea
79. Wambui visits the sick and gives them food and clothes. The fruit of the Holy spirit he demonstrates is:-
A. peace B. kindnes
C. love D. spaticence.
80. Three of the following activities in the early church demonstrated unity among the believers. Which one does **not**?
A. Meeting in the temple for worship.
B. Helping the widows.
C. Breaking the bread.
D. Speaking in tongues.
81. Which one of the following acts was performed by the elders during the worship in traditional African communities?
A. Giving holy communion.
B. Baptising people.
C. Teaching moral values.
D. Making of libation.
82. In which one of the following ways did people in traditional African society give thanks to God for the blessings?
A. Shaking hands.
B. Giving offerings.
C. Visiting others.
D. Sharing land with strangers.
83. Which one of the following marriage practices is found both in Christianity and traditional African society?
A. Wife inheritance.
B. Polygamy.
C. Wedding.
D. Divorce.

84. Which one of the following is a reason why Christians should take part in community work? To :-
- A. seek favours
 - B. become popular
 - C. promote unity amongst themselves
 - D. improve their welfare.
85. Which one of the following is the **best** way for Christians to use their wealth?
- A. Buying clothes.
 - B. Assisting the needy.
 - C. Visiting places.
 - D. Entertaining people.
86. James has noticed that his classmate Jane has started begging and he wants to help him to stop the habit, James should:-
- A. report to the teacher
 - B. report to the parents
 - C. avoid being seen in public with Jane
 - D. remind Jane to show self-esteem.
87. Mirugi a standard seven finds out that his friend is taking alcohol during break time in school. What is the **best** advice for him to take?
- A. Advise the classmate to see a counsellor
 - B. Report him to the police
 - C. Tell the other members of the class
 - D. Avoid talking to him.
88. During the holidays, Oduor a std. 7 pupil finds that he has alot of free time after completing homework. Which one of the following leisure time activities would be the **best** for him to be involved in?
- A. Reading stories.
 - B. Visiting the old people.
 - C. Cleaning the compound.
 - D. Playing games.
89. Njeri, your classmate has a dirty uniform which she has refused to wash because she says that it is **not** her duty. As a Christian what advice would you give to her? Tell her to:-
- A. take it to the dry cleaner
 - B. ask her parent to wash for her
 - C. do the work and be proud of it
 - D. pay a classmate to wash it for her.
90. Which one of the following is the **best** way Christians can use to help reduce the spread of HIV and AIDS?
- A. Providing drugs and food.
 - B. Counselling the sick.
 - C. Being role models.
 - D. Teaching on behaviour changes.

SECTION B:
ISLAMIC RELIGIOUS EDUCATION

61. Which of the verses below is **wrongly** matched with the chapter it is drawn from?
- A. **Masad** - No profit to him from all his wealth, and all his gains.
 - B. **Quraish** - Who provides them with food against hunger and with security against fear.
 - C. **Tiyn** - And indeed the hereafter is better for you than the present.
 - D. **Dhuha** - And He found you unaware and guided you.
62. According to surah Dhuha, Allah (s.w) found the prophet an orphan and gave him:-
- A. shelter
 - B. independence
 - C. wealth
 - D. parents.
63. The personality in the Quran, that is promised punishment in the hereafter by way of name mentioning is:-
- A. Abdallah bin Harith
 - B. Abdul Uzza
 - C. Abdula Aziza
 - D. Abdullah Salul.
64. Lail-tul-Qadar is an important night in the history of Islam **mainly** because in it:-
- A. Prophet Muhammed (p.b.u.h) went on a night journey to the seventh heaven
 - B. Taraweh was declared night vigil prayer for the first time
 - C. angel Jibril came down with a host of other angels
 - D. the holy Quran was revealed to prophet Muhammad (b.u.h).
65. Adil forgetfully missed out performing iitidal after rukuu when he was performing salat-ul-ustwa. The **most** appropriate step to take is:-
- A. perform sidjat-ul-sahw and give salaam after the last rakaat
 - B. perform sijda-ul-tilawa two times then give salaam after the last rakaat
 - C. perform sijdat-ul-shukr and continue with slat to the end
 - D. start the whole prayer a fresh.
66. While iba'adah is whatever we do to please Allah (s.w) inequities are things that when done:-
- A. make a person more fulfilled in his life
 - B. you do not want people to get to know of them
 - C. leave one in unsure state of whether or not they were properly done
 - D. they do not meet the objectives.

67. Wealth, according to hadith of the prophet (p.b.u.h) whose zakat is **not** paid for will turn into _____ on Yaum-ul-Qiyama.
- A. a well of hot smelly pus.
 - B. ravenous scorpions
 - C. large snakes
 - D. poisonous fruits
68. Complete the hadith of the prophet (p.b.u.h) about eating, which is the **correct** clause? “start by Bismillah, eat using your right hand,.....”
- A. and eat while seated down
 - B. make sure the food is warm not hot
 - C. make sure you take small portions at a time
 - D. and eat what is in front of you.
69. It is **incorrect** to say that:-
- A. women in heidh can attend salat-ul- Idd proceedings
 - B. Friday prayer just like lunar eclipse has a sermon
 - C. salat-ul-Junaiza starts and ends on Islamic greeting phrase
 - D. Whatever nullifies dry ablution, nullifies wet ablution as well.
70. Which choices below **correctly** shows the position of the imam while offering Janaiza prayer to a mayyit laid before him?
- | | <u><i>Female</i></u> | <u><i>Male</i></u> |
|----|----------------------|--------------------|
| A. | Waist | Head |
| B. | Chest | Feet |
| C. | Waist | Chest |
| D. | Head | Waist |
71. The following are halaal practices in commerce. Which one among them is **not**?
- A. Credit
 - B. Hire purchase
 - C. Discount
 - D. Loaning.
72. Kalima is important in the life of a muslim because it:-
- A. differentiates a muslim from a non-muslim
 - B. is the last pillar of Islam
 - C. qualifies ones faith in Islam
 - D. declares prophet Muhammand. (p.b.u.h) a prophet of Allah (s.w)
73. Which one of the following is **correct** about Qiblah?
- A. The direction of Qiblah is the same for every muslim.
 - B. The first Qiblah for muslims was in Makkah.
 - C. There are no circumstances that might force a muslim to face another direction other than Qiblah while praying.
 - D. Facing Qiblah while praying is a fundamental.

74. There are _____ adhan called in a day.
- A. four B. five
C. six D. seven
75. The following are pillars of Hajj-Akbar:
- (i) *Assembling at Arafa.* (ii) *Tawaf-ul-Quduum.* (iii) *Sa'ay.*
(iv) *Ramii.*
(v) *Collecting of pebbles at Muzdalifa.*
- The **correct** order of these pillars is:-
- A. (ii), (i), (iv), (iii), (v).
B. (ii), (iii), (i), (v), (iv).
C. (ii), (iii), (v), (i), (iv).
D. (ii), (v), (i), (iii), (v).
76. Which other attribute of Allah(s.w) terms Him , 'The creator' apart from Al-khaaliq?
- A. Al-wahhab. B. Al-Muhaimin.
C. Al-Muhaimin. D. Al-Baari.
77. An unknown passive period between maut and baath is:-
- A. Barzakh B. Hukmu
C. Mah-shar D. Qadar.
78. The following are angels of Allah (s.w).
Who among them are yet to embark on their assignments?
- A. Jibril, Mikail, Raqib.
B. Malik, Israfil, Hamalat-ul-Arsh.
C. Kiramman katibiin, Izrail, Ridhwan.
D. Alid, Jibril, Malik.
79. Quran-ul-karim is also not called:-
- A. At-Ianzil B. Ar-Rahma
C. Al-kadhiiran D. Al-majid
80. Which one of the following is **not** a form of cleanliness?
- A. Tarka. B. Wudhu.
C. Tayammum. D. Istinjai.
81. Aisha was given a mathematical set by her class teacher for doing well in Mathematics test. To show appreciation Aisha said:-
- A. Alhamdullillah
B. Maashallah
C. Lahaula wala quwwata illabillah
D. Jazakallah.
82. Gambling is prohibited in Islam **mainly** because it:-
- A. benefits the rich only
B. leads to corruption
C. is a form of theft of public wealth
D. leads to wastage of resources
83. Work is key in a muslim's life **mainly** because it:-
- A. prevents begging
B. earns a muslim respect and honour
C. provides a source of livelihood to a muslim
D. enhances work skills.
84. While in Isra wal miraj journey angel Jibril was **not** allowed beyond:-
- A. Sidrat-ul-munlaha
B. Bait-ul-Izza
C. Bait-ul-Maqdis
D. Lahaul-Mahfudh.

85. There would be no nikaah proceedings and walimah if:-
- A. the walii refuses to give consent for marriage
 - B. the bride declines the offer of the bridegroom for marriage
 - C. the kadhi fails to preside over the nikaah
 - D. the nikaah rings and cake are not availed.
86. The following are months that Islam declared sacred **except**:-
- A. Rajab
 - B. Dhulhijjah
 - C. Muharram
 - D. Ramadhan.
87. Before the battle of Uhud began, one terrible thing happened to the muslim army. The terrible occurrence was:-
- A. desertion of hypocrites
 - B. disobedience of the archers
 - C. raiding by khalid bin waleed
 - D. death of Mus'ab bin Umeir.
88. Saida's mother died of HIV/AIDS. Saida has taken over care of the rest of family members. She is almost dropping out of school. The **best** advice for you to offer her is:-
- A. get married so that her husband will join her in taking care of the family
 - B. encourage her to talk to the class teacher
 - C. request her whether you can join her to care for her family members
 - D. encourage her to go for VCT to ascertain whether or not she is HIV positive.
89. The following are agents that spread Islam along East African coast. Which one among them borders on political aspect?
- A. Marriage.
 - B. Trade.
 - C. Establishment of city states.
 - D. Culture, architecture and way of life.
90. Yusuf's (a.s) brothers showed hypocrisy when they:-
- A. sold him to an Egyptian trader potiphar
 - B. threw him in the well of death
 - C. took home Yusuf's shirt dotted with blood stains
 - D. failed to deliver to the agreements they had with Yaqub(a.s).