

MUSAB

END OF TERM TWO EXAMINATION FOR P.3 - 2019

SUBJECT: LITERACY ONE "B"

NAME:

SCHOOL:

STREAM: **DATE:**

SECTION A:

1. Name any one domestic animal that gives us milk.

2. In which sub-county /division is your school found?

3. Name any one school symbol.

4. Write one means of road transport.

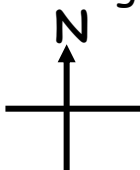
5. Name the map symbol below.



6. What are domestic animals?

7. Give any one role of a policeman in an area.

8. What name is given to an instrument below?



9. Write any one example of a physical feature.

10. List down any one type of weather.

- 1 -

11. Give any one economic activity done in your community.

12. Draw and name one domestic bird you know.



13. How useful is a broom in your classroom?

14. What name is given to a person who teaches children at school?

15. What is wind?

16. Who heads a family?

17. Name any one important place in a community.

18. Give one basic need a man.

19. Write one example of a custom.

20. How useful is a school nurse?

21. Write down any one type of family you know.

22. Give one use of rivers to people.

- 2 -

23. What is transport?

24. Name any one play material got from banana fibres.

25. What do we call the sending and receiving of messages?


26. Name any one Commercial Bank you know.

27. Write O.C in full.

28. Write down any one modern means of communication.

29. Give any one cause of accidents on the road.

30. Draw the road symbol showing no parking.



31. Which animal is used for guarding people's homes?

32. Who was Kintu's wife?

33. Who heads a school?


34. Name the lake in Uganda that provides us with salt.

- 3 -

35. Give any requirement needed to start a project.

36. How are markets useful in our sub-county /division?

37. Draw and name one item from clay.




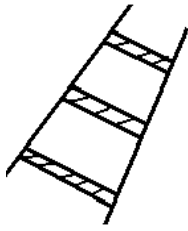
38. Give one importance of electricity.

39. What title is given to the King of Buganda?

40. Name any one member found in a nuclear family.

SECTION B:

41. a) Name these road signs below.



b) How are road signs useful on the road?

c) Give any one danger of road accidents.

- 4 -

42. a) What are living things?

b) Give any three examples of living things in our school.

i) _____

ii) _____

iii) _____

43. a) What are legends?

b) Name any one example of a legend.

c) Who is believed to be the first Muganda?

d) Who was Nambi's bad brother?

44. a) What is weather?

b) Give any three types of weather.

i) _____

ii) _____

iii) _____

iv) _____

45. Give one product got from each of the following crops.

a) Cotton _____

b) Tobacco _____

b) Sisal _____

c) Sugarcanes _____

- 5 -

46. a) Match the items in group A with those in B.

<u>A</u>	<u>B</u>
Kampala	Water logged areas
Poultry	North, South, East, West
Swamps	Capital City of Uganda
Cardinal points	Keeping of domestic birds

i) Kampala _____

ii) Poultry _____

iii) Swamps _____

iii) Cardinal points _____

47. a) Who is a child?

b) Give two roles of children at home.

i) _____

ii) _____

c) Write down any one form of child abuse.

48. a) Name the place where pupils go to acquire knowledge and skills.

b) Write any three symbols of a school.

i) _____

ii) _____

iii) _____

49. a) Name any two components of weather.

i) _____ ii) _____

b) Give the component of weather that;

i) helps farmers in winnowing _____

ii) dries harvested crops _____

- 6 -

50. a) Which term is given to the four main points of a compass.

b) Give any two main points of a compass.

i) _____

ii) _____

c) Identify any one group of people who use a compass.

i) _____

ii) _____

51. a) Name the largest lake in Uganda.

b) Give two uses of lakes in Uganda.

i) _____

ii) _____

c) Who is a fisherman?

52. a) Write down any two groups of people who maintain peace and security at school.

i) _____

ii) _____

b) Give any two weapons used by the policemen to maintain peace and security.

i) _____

ii) _____

- 7 -

53. a) Choose the best answer from given in this box to complete the sentence below.

A medical assistant	A pharmacist	A surgeon
An oculist	A dentist	

i) _____ treats people's teeth.

- ii) _____ prepares medicine.
- iii) _____ treats people's eyes.
- iv) _____ operates patients.

54. a) Draw the map of these objects.

a tree	a house

b) Give two ways of locating places and directions.

- i) _____
- ii) _____

55. a) State any four common accidents at home.

- i) _____
- ii) _____
- iii) _____
- iv) _____

END

MUSAB

END OF TERM TWO EXAMINATION FOR P.3 - 2019

SUBJECT: LITERACY ONE "A"

NAME:

SCHOOL:

STREAM: **DATE:**

SECTION A:

1. Name the main natural source of light.

2. Which sense organ is used for tasting?

3. What is a family?

4. Name any one source of water in the environment.

5. Which type of gas do people breathe in?

6. What is wind?

7. Name any one wild animal you know.

8. Why do we clean our compound?

9. Give any one material used to clean our bodies.

10. How can we make water safe for drinking?

11. Apart from the sun, name any other source of light.

12. What is formed when plants and animals decay?

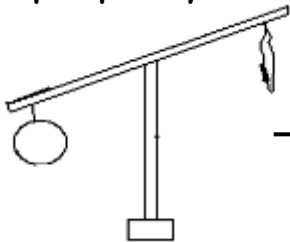
13. _____ is used for hearing.

14. Which part of air occupies the biggest percentage in the atmosphere?

15. Why do you bathe?

16. Name any one plant you know.

17. Which property of air is shown below?



18. Name any one domestic animal that provides us with milk.

19. List down any one item used for cleaning our classroom.

20. Which layer of soil is the best for crop growing?

21. Tom was in class and heard a cow lowing, which sense organ did he use?

22. Name any one animal that is used for transport.

23. Draw and name any one garden tool.



24. Which type of soil is used for modeling?

25. What is an accident?

26. Identify any one type of food you eat at school.

27. Write down any one danger of too much sunshine in the environment.

28. What are living things?

29. Identify one material used by people in the rainy weather.

30. State any one cause of accidents at school.

31. Name any one source of carbohydrates.

32. What is the meaning of the word "environment?"

- 3 -

33. Give one importance of rain in the environment.

34. Which weather condition is shown below?



35. What is immunization?

36. A _____ is to man as a fry is to fish.

37. What name is given to moving air?

38. What do insects use for breathing?

39. Why do we cut our finger nails short?

40. Which layer of soil contains a lot of humus?

SECTION B:

41. a) Give any two gases that make up air.

i) _____

ii) _____

b) Suggest two uses of air you know.

i) _____

ii) _____

- 4 -

42. a) List down any four immunisable diseases.

i) _____

ii) _____

43. a) State any two common accidents at home.

i) _____

ii) _____

b) Suggest two ways of preventing accidents.

i) _____

ii) _____

44. a) Name any two examples of vegetable crops you know.

i) _____

ii) _____

b) Draw and name two fruits in your community.

--	--

--	--

45. Match these organs with their senses.

Ear	seeing
Tongue	feeling
Eyes	hearing
Skin	tasting

- i) Ear - _____
- ii) Tongue - _____
- iii) Eyes - _____
- iv) Skin - _____

- 5 -

46. a) Give any two uses of domestic animals.

i) _____

ii) _____

b) Suggest any one way of caring for domestic animals.

c) Name any one item got from domestic animals

47. List down four uses of water.

i) _____

ii) _____

iii) _____

iv) _____

48. a) Which part of a mango do we eat?

b) Give two examples of plants you know.

i) _____ ii) _____

49. a) Name the three types of soil you know.

i) _____

ii) _____

iii) _____

b) Suggest any one use of soil.

50. a) Name the homes of the following animals.

i) cattle - _____

ii) birds - _____

iii) dogs - _____

iv) rabbits - _____

- 6 -

51. a) State any three components of soil.

i) _____

ii) _____

iii) _____

b) How is humus important in the soil?

52. a) Name any four items used to keep your body clean.

i) _____ ii) _____
iii) _____ iv) _____

53. a) Name any two important places of a clean home.

i) _____
ii) _____

b) State any two materials we use to keep our school clean.

i) _____
ii) _____

54. a) Name any three sources of food in the environment.

i) _____ ii) _____
iii) _____

b) State one use of food to your body.

55. a) Which type of electricity is got from the sun?

b) Write down any three uses of electricity.

i) _____
ii) _____
iii) _____

END

MUSAB

END OF TERM TWO EXAMINATION FOR P.3 - 2019

SUBJECT: ENGLISH

NAME:

SCHOOL:

STREAM: **DATE:**

SECTION A:

Use the most correct word to fill in the gaps correctly.

1. How old are _____?
2. The baby was suffering _____ measles.
3. Andy and Samuel are leaning _____ the wall.
4. Mr. Lutaabi, the _____ has flown an aeroplane.
5. The cat was hiding _____ the bed.

Fill in the gaps using the correct form of the words in brackets.

6. The dog is _____ at school children now. (bark)
7. My father is a good _____. (drive)
8. The _____ has not marked our books. (teach)
9. Ruth was _____ than Ronald. (smart)
10. There are some _____ on the plate. (fly)

Use the words in the sentences to show that you understand their meaning

11. Weak _____
12. Week _____

Arrange the words in alphabetical order.

13. hoot, hive, he, hutch, hat

14. zebra, lion, monkey, donkey

15. ostrich, dog, frog, crocodile

Give the plural form of the underlined words in the sentences.

16. She has mango in the basket.

17. An ox is very strong.

18. We have furniture in our class.

Rewrite the sentences below giving the opposites of the underlined words.

19. Annet is taller than Ritah.

20. They have young sisters.

For questions 21 and 22 arrange the words to form correct sentences.

21. is the Where girl?

22. was mouse hiding hole The a

Give a single word for the underlined group of words.

23. The young dog is not dangerous.

24. The person who sells fish is very hungry.

25. The head of school is a kind man.

Write the long forms of the following.

26. Mon. - _____

27. aren't. - _____

28. Sch. - _____

Fill in the following using "some" or "any"

29. She has _____ fruits in the basket.

30. There isn't _____ salt in the soup.

Rewrite as instructed in brackets.

31. Joan is not playing. Joan is sick. (Use:because)

32. The elephant is big. The cow is small. (Use:.....but.....)

33. This sheep is very small. (Begin: These)

34. Teddy has a new dress. **(Underline the adjective)**

- 3 -

35. Joyce is a prefect. Wilson is a prefect. **(Use:and)**

36. This is the dentist. He treated my sick tooth.
(Join using:who)

37. Her name is Sarah. **(Write a suitable question to this sentence)**

38. I used an aeroplane. I was going to London. **(Use:as.....)**

39. Lutabi is big. Mubiru is bigger. **(Use:than.....)**

40. Namakula was drawing a picture. **(Rewrite the sentence using a correct pronoun of the underlined noun)**

41. The bird ate an apple. (Begin: **Am apple**.....)

42. Man is to house as lion is to _____
(Complete the sentence correctly)

- 4 -

43. We like walking more than running. (Use:**prefer**.....)

44. That is the cook. His daughter was killed yesterday.
(Use:**whose**.....)

45. The boy is very young, she cannot go to school.
(Use:**too**..... **to**.....)

46. These are the dogs. They poured my milk. (Use:.....**which**.....)

47. ritah was born on thursday. (Punctuate correctly)

48. Nakato is tall. Male is tall. (Use: **as**.....**as**.....)

49. They are big. They can lift that table.
(Use: **enough to**.....)

50. One by one _____.
(Complete the proverb correctly?)

- 5 -

SECTION B:

51. A. Use the table below to construct five sentences.

we	fire chalk water flowers sand	for	building cooking washing decorating writing
----	---	-----	---

- a) _____
- b) _____
- c) _____
- d) _____
- e) _____

B. Match the following correctly.

Animal

sound

Monkey

mews

Baby		trumpets
Snake		chatters
Cat		cries
Elephant		hisses

Monkey	-	_____
Baby	-	_____
Snake	-	_____
Cat	-	_____
Elephant	-	_____

- 6 -

52. Study the notice below and answer the questions that follow.

SPORTS DAY	
SCHOOL	: Kisolo Junior School
DATE	: Wednesday, 27th August, 2019
VENUE	: School field
TIME	: 2:00p.m - 5:00p.m
ENTRY	: FREE TO ALL PARENTS
<i>Come with a friend</i>	

Questions:

1. What is the notice about?

2. Which school has the sports day?

3. On which day will it take place?

4. When will the sports day start?

5. At what time will it end?

- 7 -

6. What should one come with?

7. Write Wed. in full.

8. In which month will it take place?

9. Give the opposite of friend.

10. Find a word in the notice that means place.

53. Read the story and answer questions about it in full sentences.

Amon goes to school every day. He studies at Victory Primary School. He is in class three and his class teacher is Miss Bityo. There are twenty-three boys and twenty-five girls in his class. Amon likes English lesson most but doesn't like Science. Joseph, his friend likes Science but doesn't like English. Both of them like music.

Questions:

1. In which school is Moses?

2. Who is Moses' friend?

3. In which class is Moses?

- 8 -

4. How many pupils are there in Moses' class?

5. Who is their class teacher?

6. Write Eng. in full.

7. What two lesson does Joseph like?

8. Who doesn't like English?

9. In which class do you think will Moses be next year?

10. Write twenty-three in figures.

54. Read the poem and answer questions in full.

Dogs bark from their kennels,

1. Doves coo from their dove cots,
Whereas horses neigh from their stables.

From their habitats,

They bark, coo and neigh,

2. All to call for help in case of danger,
Look for friends,
And to get food.

- 9 -

As these creatures live with people,

3. Others wild birds, animals and insects.
Live in the bush, forests burrows and zoos

Such animals, birds and insects include,

4. Lions, peacock, monkey and many others,
But remembers, whether domestic or wild,
They are all important.

Questions:

a) Which animal barks?

b) Which animals live in stables?

c) Give two reasons why animals bark and neigh.

i) _____

ii) _____

d) Name one thing that people get from birds they rear at home.

e) How do we call animals that live in bushes and forests?

f) Mention any two domestic animals mentioned in the poem.

i) _____ ii) _____

g) Are wild animals and birds important to us?

h) Write the opposite of peacock.

55. Use the words below to fill in the gaps correctly.

drink,	rivers,	dirty,	water,	rubbish,
carefully,	pots,	good,	sure,	clean

Lakes and _____ are sources of water but sometimes this water is not clean. Animals walk in the rivers and lakes and _____ from them. They make the water _____. Some people throw _____ in the lakes and rivers. This makes the _____ dirty too. We need to keep the rivers and lakes _____. We must keep the jerrycans, tanks and _____ very clean.

We need to water plants _____ so that water is not washed. It is _____ for us to clean the wells and boreholes. We must make _____ that the taps do not drip as this wastes water

END

MUSAB

END OF TERM TWO EXAMINATION FOR P.3 - 2019

SUBJECT: RELIGIOUS EDUCATION

NAME:

SCHOOL:

STREAM: **DATE:**

SECTION A: (40 Marks)

1. How many days did God take to create the earth?

2. Name the town where Jesus Christ was born.

3. What name is given to the fasting period for Christians?

4. Write the person who built the ark.

5. What name is given to the Holy Book for Christian?

6. Why do Christians pray?

7. Give any one way leaders are important in the church.

8. Who is a prophet?

9. Give one way children can show respect to elders.

-1-

10. Why do Christians go to church?

11. Name the Angel who brought the good news about the birth of Jesus to Mary.

12. Mention one similar custom in Christianity and Islam.

13. On which mountain did Moses receive the Ten Commandments?

14. Give one way a person becomes a leader.

15. Name the day when Christians go to church.

16. Why did God send Jesus Christ on earth?

17. Who was the wife of Abraham?

18. How did Adam and Eve disobey God?

19. Give any one way of caring for needy Christians.

20. What title is given to the leader of all Catholic in Uganda?

-2-

SECTION B: (60 Marks)

21. a) Name the river where Jesus Christ was baptized.

b) Who baptized Jesus Christ?

c) Give two reasons why Christians are baptized.

i) _____

ii) _____

22. **Match the following days with their events.**

- | | |
|------------------|--|
| a) Holy Thursday | Jesus resurrected. |
| b) Easter Monday | Jesus washed the feet of His apostles. |
| c) Good Friday | Jesus appeared to His apostles on the way to Emmaus. |
| d) Easter Sunday | Jesus was crucified. |

Correct order

- a) Holy Thursday - _____
- b) Easter Monday - _____
- c) Good Friday - _____
- d) Easter Sunday - _____

23. a) What is a custom?

b) Mention any two examples of traditional customs in the community.

i) _____

ii) _____

c) How are customs important to the community?

-3-

24. a) How many apostles did Jesus Christ have?

b) Name any two of Jesus' apostles.

i) _____

ii) _____

c) Name the apostle who preached on Pentecost day.

25. a) Who is a leader?

b) Name one example of a religious leader in Christianity.

c) State two qualities of a good religious leader.

i) _____

ii) _____

26. a) Name any two prophets of God in the Bible.

i) _____

ii) _____

b) Which prophet of God was swallowed by a big fish?

c) Mention one duty of God's prophets.

27. a) Mention any three miracles Jesus Christ performed.

i) _____

ii) _____

iii) _____

b) Which miracle did Jesus Christ perform at Cana?

-4-

28. a) On which day did God create man?

b) Draw and name any two things God created.

c) Why did God create Adam?

29. a) Give two ways God speaks to His people.

i) _____

ii) _____

b) Which book in Christianity is called the word of God?

c) Mention one way people speak to God.

30. a) Name the small god responsible for the following

i) babies - _____

ii) war - _____

b) What is the role of the following small gods?

i) Ddungu - _____

ii) Musoke - _____

-5-

31. a) Mention the day when Jesus entered Jerusalem in great glory.

a) On which animal did Jesus ride into Jerusalem?

b) Why was Jesus Christ not happy when he entered the Temple in Jerusalem?

c) State one way people disobey God's house of worship today.

32. a) Name any two sons of Adam and Eve.

i) _____

ii) _____

b) Which son of Adam killed the brother?

c) How did God punish Adam's son when he killed his brother?

33. a) Mention the two major parts of the Bible.

i) _____

ii) _____

b) Name any two books found in the Bible.

i) _____

ii) _____

-6-

34. a) Name the day when Jesus' apostles received the Holy Spirit

b) Mention two gifts of the Holy Spirit.

i) _____

ii) _____

c) How important is the Holy Spirit to Christians?

35. a) Give two examples of needy people in our community.

i) _____

ii) _____

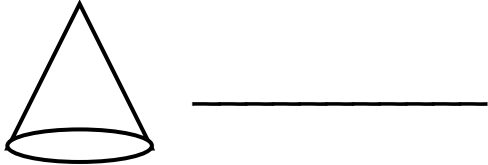

b) State one way a P.3 pupil can help a needy person in our community.

c) Why is a Christian supposed to help needy people?


*****END*****

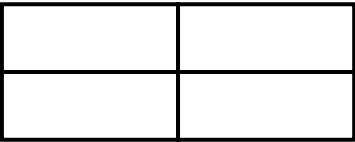
MUSAB	
END OF TERM TWO EXAMINATION FOR P.3 - 2019	
SUBJECT:	MATHEMATICS
NAME:
SCHOOL:
STREAM: DATE:

SECTION A:	
1. Add: 154 + 32	2. Find the value of 4 in the

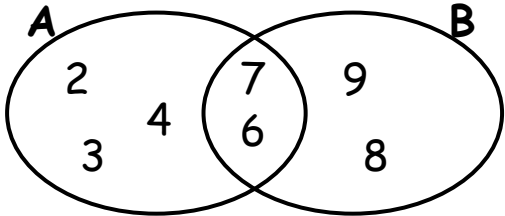
			number <u>4</u> 98.
3.	Set $K = \{2, 4, 5, 6, 8\}$ and set $M = \{1, 3, 6, 7, 8\}$. Find $K \cap M$	4.	Name the figure below. 
5.	Fill in the missing numbers. 5, 10, 15, 20, _____, _____	6.	Shade $\frac{2}{4}$ on the figure below 
7.	Write 25 in Roman Numerals.	8.	Maggie has 10 years and John has 8 years. Find their total age.
		-1-	

9.	Represent 243 on the abacus below. <table style="margin-left: auto; margin-right: auto; border: none;"> <tr> <td style="text-align: center; padding: 0 10px;">H</td> <td style="text-align: center; padding: 0 10px;">T</td> <td style="text-align: center; padding: 0 10px;">O</td> </tr> <tr> <td style="text-align: center;"> </td> <td style="text-align: center;"> </td> <td style="text-align: center;"> </td> </tr> <tr> <td style="text-align: center;"> </td> <td style="text-align: center;"> </td> <td style="text-align: center;"> </td> </tr> <tr> <td style="text-align: center;"> </td> <td style="text-align: center;"> </td> <td style="text-align: center;"> </td> </tr> </table>	H	T	O										10.	One ball costs sh. 5000, what is the cost of 4 similar balls?
H	T	O													

11.	Expand 724	12.	Find the missing number $\square + 4 = 12$
13.	What number comes after 48?	14.	Julius ate $\frac{2}{7}$ of his cake in the morning and $\frac{3}{7}$ in the evening. Find the fraction he ate altogether.
15.	Write the place value of 9 in <u>295</u> .	16.	Draw a set of 4 girls.
		-2-	
17.	If  = 4 tomatoes. How many tomatoes are	18.	Arrange 4, 2, 9, 5 and 3 starting from the smallest

	represented by ?		
19.	Share 12 mangoes among 2 girls.	20.	How many rectangles do you see?  <hr/>

SECTION B:

21.	<p>Study the Venn diagram below and answer questions that follow.</p>  <p>a) List all members of; i) Set A</p> <p>ii) Set B</p> <p>b) Find $A \cap B$</p> <p>c) Find $A \cup B$</p>
-----	--

22.	Workout the following:	
	a) $\frac{2}{9} + \frac{3}{9} + \frac{1}{9} =$	b) $\frac{11}{15} - \frac{7}{15} =$

23. **Given the digits 5, 3, and 7**
- a) Form the smallest number using the above digits.

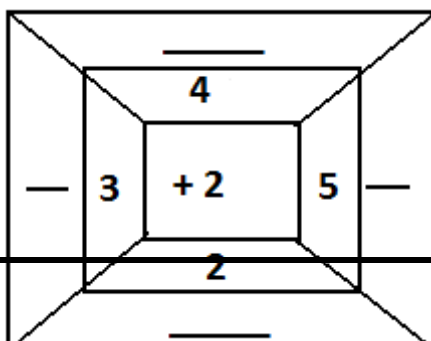
 - b) Form the biggest number using the above digits.

 - c) Find the sum of the biggest and smallest numbers formed.

24. Draw the following shapes.

Triangle	Cylinder	Square	Kite

25. Complete the table below.



26. a) Write $400 + 30 + 9$ in short form.

b) Fill in correctly.

275 = _____ hundreds _____ tens _____ ones

27. **Study the shopping below and answer questions which follow.**



Sh. 800



Sh. 2000



Sh. 1000

a) How many items are in the shopping list above?

b) Name the cheapest item on the shopping list.

c) How much does a book cost more than an apple?

28. Jolly had 25 dolls, his father bought him 15 more dolls.

a) How many dolls does he have altogether?

b) Find the difference between 853 and 521.

- 5 -

29. Find the missing numbers.

a) $\times 5 = 10$

b) $\div 2 = 4$

30. Rhoda is 30 years old. Vicky is 20 years old.

a) Who is older?

b) Find the sum of the age.

c) What is the difference between 30years and 20 years?

31.

Cup A



Cup B



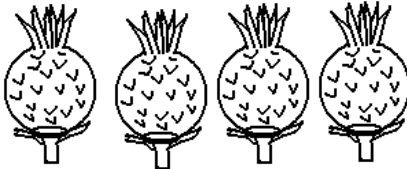
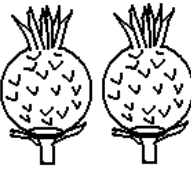


a) _____ is bigger than _____

b) How many litres are in Cup A more than in Cup B?

c) Find the total litres in cup A and Cup B

- 6 -

32. Study the pictograph and use it to answer the questions which follow.

Benitah	
Enid	
Shirat	
Immy	

a) Who got the highest number of pineapples?

b) Which pupils got the same number of pineapples?

c) Ho many pineapples did Benitah get more than Immy?

d) Find the number of pineapples they got altogether.

END

MUSAB

EKIGEZO EKIKOMEKEREZA OLUSOMA OLW'OKUBIRI EKYA P.3 - 2019


SUBJECT: LUGANDA


NAME:

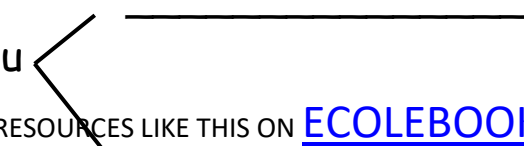
SCHOOL:

STREAM: **DATE:**

1. Wandika ebigambo bibiri (2) ebiwangaala ku buli nyingo.

sii 

maa 

buu 

2. **Saza ku kigambo ekituufu ku bikuwereddwa.**

- a) edaggala amalagala eddagala eddaggala
b) omupiila Omupiira Omupira Omuppila
c) eliiso eriso eriiso eliso
d) ebaafu ebbaafu ebaaffu ebaaffuu

3. **Wandiika ebigambo ebikontana no bino.**

- Emabega - _____
muto - _____
wansi - _____
kirungi - _____

- 1 -

4. **Laga ennyingo ezikola ebigambo bino nga ozikutulamu.**

- ekiwaawaatiro - _____
omusege - _____
kalasamyanzi - _____
ggwaatiro - _____

5. **Maliriza engero zino:**

- a) Akwata empola;

- b) Bamutangira mpiira;

- c) Abakadde abagalana

6. **Wandiika obungi bwebigambo bino.**

Empewo - _____

Oluku - _____

Amata - _____

Omuti - _____

7. **Wandiika amannya g'emiwendo.**

10 - _____

120 - _____

78 - _____

3 - _____

256 - _____

8. **Kuba era otuume ebiwuka bisatu ebirina obulabe gyetuli.**

9. **Wandiika erinnya lyo eryekika wamu n'omuziro gw'ewedira.**
a) _____ b) _____
10. Kabaka wa Buganda ye _____
11. Omukulembeze wa Uganda ye _____
12. **Wandiika amannya g'abaana ba Kabaka wa Buganda aliwo kati**
a) Omumbejja - _____
b) Omulangira - _____
13. **Wandiika ekigambo kimu ekitegeeza byonna.**
a) Endaggu, Muwogo, Kasooli, Lumonde _____
b) Obutungulu, Ennyaanya, Obunzaali _____
c) Enkoko, Mbaata, Ssekokko _____
d) Mbuzi, Ndiga, Mbwa, Kkapa _____
e) Mpale, Kkooti, Gomesi, Ssaati _____

- 4 -

14. **Soma embooji y'ababiri.**

Musoke: Mpozi guno omwezi baguyita batya?

Musisi: Guno omwezi baguyita Mukulukusabitungotungo.

Musoke: Naye ng'enkuba etonya nnyo, n'amataba mangi kati.

Musisi: Kankubulire obutonde bwensi bwakyuse nnyo.

Musoke: Olowooza kivudde ku ki?

Musisi: Kivudde ku bintu ebikolebwa abantu ng'emikka emibi egiva mu makolero, ebintu ebyookyebwa abantu;

ng'obuveera ne birala bingi byebisinze okwonoona obutonde bwaffe.

Musoke: Kati tukoze tutya?

Musisi: Buli muntu alina okukola nga akuuma obutonde bwensi. Tuleme kutuna bizibu bino; enjala ani amuwadde akatebe?

Musoke: Kyandibadde kirungi tutandike okukunga abantu ngatuwereza n'ebirango abantu bona basobole okukuuma obutonde bwensi.

EBIBUUZO:

a) Wandika amannya g'abantu abali mu mbooji?

i) _____

ii) _____

b) Wandika omutwe gwe mbooji.

c) Wandika ebintu ebimu ku byonona obutonde bw'ensi.

i) _____

ii) _____

BIKOMYE WANO

MUSAB

END OF TERM TWO EXAMINATION FOR P.2 - 2019

SUBJECT: MATHEMATICS


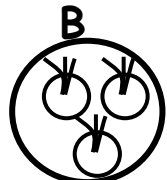
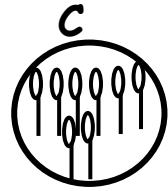
NAME:

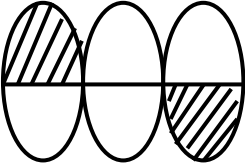
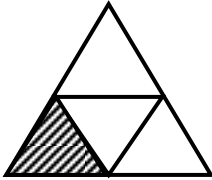
SCHOOL:

STREAM: **DATE:**



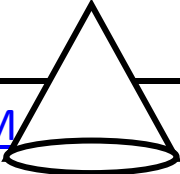
SECTION A:

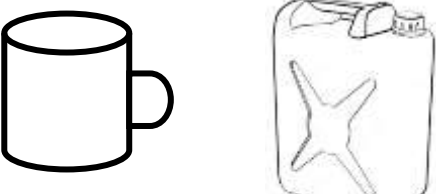
<p>1. Fill in the missing numbers 600, 601, _____, 603, _____, 605, _____, 607</p>	<p>2. A set is a _____ _____ _____</p>										
<p>3. Add:</p> <table style="margin-left: auto; margin-right: auto;"> <tr> <td style="padding-right: 20px;">T</td> <td>O</td> </tr> <tr> <td style="padding-right: 20px;">2</td> <td>8</td> </tr> <tr> <td style="padding-right: 20px;">+ 1</td> <td>4</td> </tr> <tr> <td colspan="2" style="border-top: 1px solid black; padding-top: 5px;">_____</td> </tr> <tr> <td colspan="2" style="border-top: 1px solid black; padding-top: 5px;">_____</td> </tr> </table>		T	O	2	8	+ 1	4	_____		_____	
T	O										
2	8										
+ 1	4										

<p>4. Arrange the numbers starting with the smallest 24, 26, 25, 23, 22</p>	<p>5. Compare the sets.</p> <div style="display: flex; justify-content: space-around; align-items: center;"> <div style="text-align: center;"> <p>A</p>  </div> <div style="text-align: center;"> <p>B</p>  </div> <div style="text-align: center;"> <p>C</p>  </div> </div> <p>Set _____ has more members than set A or set B.</p> <p>Set B has _____ members than set C</p>										

<p>6.</p>	<p>Write in words.</p> <p>46 _____</p> <p>127 _____</p> <p>4th _____</p>																															
<p>7.</p>	<p>What fraction is shaded?</p> <p>  = _____  = _____ </p>																															
<p>8.</p>	<p>Fill in correctly.</p> <p>a) 59 = _____ tens and _____ ones</p> <p>b) 764 = _____ hundreds _____ tens _____ ones</p>																															
<p>9.</p>	<p>Draw hundred, tens and ones on the abacus below.</p> <p>a) <table border="0" style="display: inline-table; vertical-align: middle;"> <tr> <td style="text-align: center;">H</td> <td style="text-align: center;">T</td> <td style="text-align: center;">O</td> </tr> <tr> <td style="text-align: center;"> </td> <td style="text-align: center;"> </td> <td style="text-align: center;"> </td> </tr> <tr> <td style="text-align: center;"> </td> <td style="text-align: center;"> </td> <td style="text-align: center;"> </td> </tr> <tr> <td colspan="3" style="text-align: center;">_____</td> </tr> <tr> <td colspan="3" style="text-align: center;">_____</td> </tr> </table> = 236 </p> <p>b) <table border="0" style="display: inline-table; vertical-align: middle;"> <tr> <td style="text-align: center;">H</td> <td style="text-align: center;">T</td> <td style="text-align: center;">O</td> </tr> <tr> <td style="text-align: center;"> </td> <td style="text-align: center;"> </td> <td style="text-align: center;"> </td> </tr> <tr> <td style="text-align: center;"> </td> <td style="text-align: center;"> </td> <td style="text-align: center;"> </td> </tr> <tr> <td colspan="3" style="text-align: center;">_____</td> </tr> <tr> <td colspan="3" style="text-align: center;">_____</td> </tr> </table> = 521 </p>		H	T	O							_____			_____			H	T	O							_____			_____		
H	T	O																														

H	T	O																														

<p>10.</p>	<p>a) How many triangles can you see?</p> <p style="text-align: center;">  </p> <p>_____</p>	<p>b) Name these shapes.</p> <p style="text-align: center;">  _____ </p> <p style="text-align: center;">  </p>																														

		-2-	_____
11.	Divide:		
	a) $10 \div 2 = \underline{\quad}$	b) $18 \div 2 = \underline{\quad}$	c) $\begin{array}{r} 2 \overline{) 16} \end{array}$
12.	Use $<$, $>$ or $=$ to complete correctly.		
	a) $06 \underline{\quad\quad\quad} 60$		
	b) $48 \underline{\quad\quad\quad} 29$		
	c) $10 + 10 \underline{\quad\quad\quad} 20$		
13.	a) Add: $\begin{array}{r} 4 \ 5 \ 2 \\ + 3 \ 2 \ 5 \\ \hline \\ \hline \end{array}$	b)	John has 160 books. Joan has 429 books. How many books do they have altogether?
14.	Compare using <u>less</u> or <u>more</u> .		
			

- a) A jerrycan holds _____ water than a cup.
 b) A cup holds _____ water than a jerrycan

-3-

SECTION B:

15. **Expand:**

- a) $12 = \underline{\hspace{2cm}} + \underline{\hspace{2cm}}$
 b) $35 = \underline{\hspace{2cm}} + \underline{\hspace{2cm}}$
 c) $125 = \underline{\hspace{2cm}} + \underline{\hspace{2cm}} + \underline{\hspace{2cm}}$

16. **Write in words:**

- a) $\frac{1}{3} = \underline{\hspace{4cm}}$
 b) $\underline{\hspace{4cm}}$
 c) **Add:** $\frac{2}{5} + \frac{1}{5} =$

17. **Find the missing numbers.**

- a) $\square + 4 = 10$ b) $14 - \square = 7$

18. Dan had 68 pencils. He gave 14 pencils to his sister.

- a) How many pencils did Dan remain with?

b) Subtract six from twelve.

-4-

19. **Four boys picked balls**

Tom picked 3 balls


Tim picked 5 balls

Tonny picked 7 balls

Jimmy picked 3 balls

Questions:

a) Represent the above information on the graph below.

Jimmy	
Tonny	
Tim	
Tom	

b) Who picked more number of balls?

	<p>c) Who picked the same number of balls?</p> <p>d) How many balls do all the children have?</p>
--	---

END

<h1>MUSAB</h1>	
END OF TERM TWO EXAMINATION FOR P.2 - 2019	
SUBJECT:	LITERACY ONE "B"
NAME:
SCHOOL:
STREAM:
DATE:

SECTION A:

1. Name any two animals kept at home.
i) _____ ii) _____
2. What is a school?

3. Apart from balls, give any other two things we make for playing.
i) _____ ii) _____
4. Name any two people found in a nuclear family.
i) _____ ii) _____

5. Who makes furniture?

6. Give any two people found in a community.

i) _____ ii) _____

7. Name any two school symbols.

i) _____ ii) _____

8. A _____ is a group of people living together related by blood or marriage and adoption.

9. Why do people make mats in the community?

-1-

10. How do we call the acceptable way of behaving in the community?

11. Write down any two types of transport

i) _____ ii) _____

12. Why do we need camels in the community?

13. Give the places of work for the following people below.

a) Carpenter - _____

b) Pilot - _____

c) Teacher - _____

14. Name any two building materials made out of clay.

i) _____ ii) _____

15. What is the common type of transport?

16. Apart from the garden, write other two sources of food people.

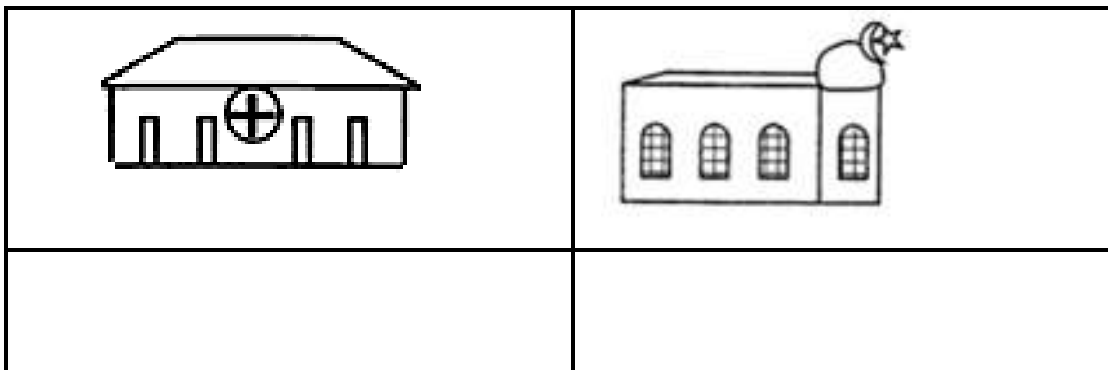
i) _____ ii) _____

17. Name any two things we make from wood.

i) _____ ii) _____

18. What is the source for wood?

19. Name these important places in the community.



-2-

20. Name any two things found in the bedroom.

i) _____ ii) _____

21. Write any two benefits of a school from the neighbours.

i) _____

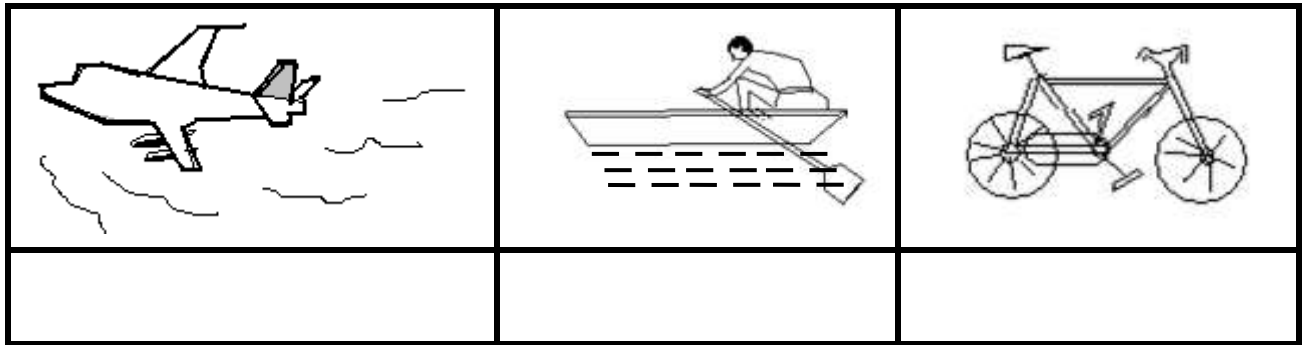
ii) _____

22. What is the quickest means of transport?

23. What material is used to make mats?

24. Name one dangerous animal in the environment.

25. Name these means of transport.



26. Write any two buildings found at school.


i) _____ ii) _____

27. Give the roles of these people at school.

a) Headteacher - _____

b) Cook - _____

28. Name these traffic road signs.



END

MUSAB

END OF TERM TWO EXAMINATION FOR P.2 - 2019

SUBJECT: LITERACY ONE "A"

NAME:

SCHOOL:

STREAM: **DATE:**

SECTION A:

1. Give one example of a sense organ.

2. Which part of the body is used for biting?

3. Name the garden tool used for transplanting young plants.

4. The general cleanliness of an area is called

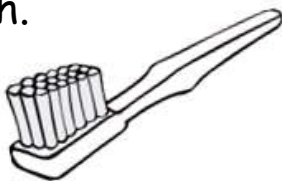
5. Name one place at your school or home we need to keep clean.

6. From what product is yoghurt made?

7. Give one example of a fruit.

8. What name is given to a young one of a sheep?

9. What name is given to the material below used to brush our teeth.



-1-

10. How does a fish moves?

11. What does a fish use for breathing?

12. What are aquatic animals?

13. Name the part of a bird used for eating.

14. Give the name of this garden tool.



15. How is the above tool useful to a farmer?

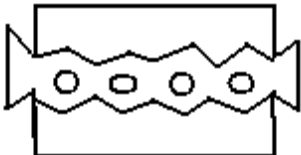
16. Mention one immunisable disease.

17. Give one characteristic of birds.

18. Identify one wild animal found in the bush.

19. Give one common accident at school.

20. What is the use of the material below?



21. Why do animals move from one place to another?

22. How do we call a young one of a frog?

23. Give any two examples of plants that give us food?

i) _____ ii) _____

24. Give one reason why people eat food.

25. Give any two uses of plants.

i) _____

ii) _____

26. Name one insect people eat.

27. Which organ does an insect breath through?

28. What is accident?

29. Identify one element of weather.

30. Name one material found in the first aid box.

31. Name the element of weather that moves things.

32. What is the main source of water?

33. Identify one use of water.

34. What animal provides ivory to people?

35. What animal uses horns for protection?

36. Where is the polio vaccine given?

37. Name one disease attacked by animals.

38. Which part of the body is used for talking?

39. Draw and name one dangerous material that cause accidents.



40. Give the name of the place where dentists work.

SECTION B:

41. Identify two sources of water.

i) _____ ii) _____

42. Give the uses of the garden tools below.

a) trowel - _____

b) rake - _____

-4-

43. List any two dangers of accidents.

i) _____

ii) _____

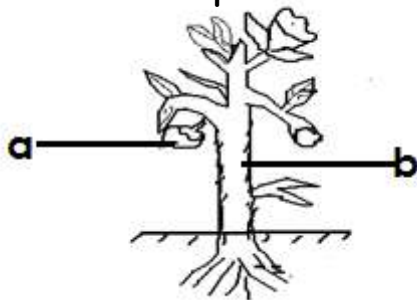
44. Draw and name two domestic animals.

45. Give the young ones of these animals.

a) hen _____

b) dog _____

46. Name the parts of the plant labeled.



P _____

Q _____

47. Identify any two materials used to keep our bodies clean.

i) _____ ii) _____

48. Apart from milk identify any other materials got from cows.

49. Write two tools used to keep the compound clean.

i) _____ ii) _____

-5-

50. Write the movements of the animals below.

a) caterpillar - _____

b) snake - _____

51. Give the larva stages of these insects below.

a) housefly - _____

b) butterfly - _____

52. a) What is the second stage of a cockroach.

b) Apart from a cockroach what other insect stages in dirty places.

53. Name two insects that go through four stages.

i) _____ ii) _____

54. Suggest any two ways of keeping food safe.

i) _____

ii) _____

55. Give any two reasons why we brush teeth.

i) _____

ii) _____

56. Identify any two causes of accidents at home or school.

i) _____

ii) _____

57. Write down any two types of weather.

i) _____ ii) _____

58. Give any two clothes used on a rainy weather.

i) _____ ii) _____

*****END*****

MUSAB

END OF TERM TWO EXAMINATION FOR P.2 - 2019

SUBJECT: ENGLISH

NAME:

SCHOOL:

STREAM: **DATE:**

SECTION A:

Fill in the missing letters.

1. p__lml____ves 2. b____k__t

Rearrange the letters and form correct spelling.

3. briefs - _____ 4. salsi - _____

Arrange the words in their alphabetical order.

5. pestle, papyrus, pistal, pole

6. slasher, stick, sickle, spade

Write a little word from the words below

7. kitchen - _____ 8. basket - _____

Underline the odd words.

9. ball, dolls, ropes, stones, pots

10. beetle, grasshoppers, leopard, crickets

Use the word in brackets and give its plural.

11. Their dog has four _____. (puppy)

12. He has two _____. (toy)

13. These _____ are ripe. (mango)

-1--

Write the following abbreviations in full

14. can't _____ 15. C/O _____

Use the word in brackets and complete the sentences.

16. We _____ a test every weekend. (write)

17. She _____ grasshoppers every May. (fry)

18. Last month I _____ to Kampala. (go)

Fill the spaces with a correct word.

19. _____ is shouting loudly.

20. Peter is smarter _____ John.

21. Do you _____ a brown dress.

22. Rita has _____ old umbrella.

23. _____ are the children doing?

24. Who _____ a short pencil?

25. They _____ writing an examination.

26. It _____ too sweet.

Fill the gaps with a correct preposition.

27. The aeroplane was flying _____ the sky.

28. There is a snake _____ the cupboard and the chair.

29. Elizabeth was playing _____ her doll.

30. Who was looking _____ a knife?

Give the opposites of the underlined word.

31. My enemy is sick. _____

32. Who is smaller than Ritah? _____

33. She was drinking fruit. _____

-2-

Choose a correct word from the brackets and fill the spaces.

34. _____ parents are doctors. (their, there)

35. _____ was her uniform. (eat, it)

36. My daddy has a farm of _____. (ship, sheep)

Write as instructed.

37. This is the man. He stole the bull. (Use:.....who.....)

38. That is a rope. This is a ball (Use:.....and.....)

39. That is a butterfly. (Begin: Those.....)

40. Henry is a kind boy. He cannot help. (Use:.....but.....)

41. John is happy. He won the prize. (Use:.....because.....)

Give one word for the list of underlined words in the sentence.

42. There are two young hens in the pen.

43. We ate mangoes, oranges, apples and pineapples at the party.

-3-

Use the word in brackets and complete the sentences correctly.

44. Who was the _____ in your class. (one)

45. Mary is the _____ in their stream. (two)

Punctuate the following sentences correctly.

46. how old is your daughter?

47. john gave me books pen pencils rulers and brooms.

Complete the sentences correctly.

48. I keep books in the library. Who am I?

49. Musa sells meat. Who is he?

SECTION B

50. Complete the table correctly.

Word	Comparative	Superlative
good	_____	best
_____	worse	worst
big	bigger	_____
_____	lighter	lightest
heavy	_____	heaviest

-4-

51. Form sentences from the table.

We use	palmleaves sisal polythene threads papyrus	to make carpets. to make sweaters. to make mats. to make ropes. to make kites.
--------	--	--

1. _____
2. _____
3. _____
4. _____
5. _____

52. Arrange the sentences and form a good story.

1. Then he sold them and got money.
2. He put them under sunshine to dry.
3. He cut palmleaves.
4. He wove baskets and hats.
5. Juma went to the forest.

1. _____
2. _____
3. _____
4. _____
5. _____

-5-

53. Use the words below and make a correct sentence.

a) They:

b) too :

c) to:

d) This:

e) These :

54. Read the poem and answer questions about it.

PALM LEAVEAS PALM LEAVES

Palm leaves Palm leaves palm leaves

Palm leaves are local materials,

Palm leaves are got from forests,

Palm leaves are sometimes green, yellow, red or purple.

Palm leaves Palm leaves palm leaves

Palm leaves are used to weave mats, hats and other things.

Palm leaves make good craft.

BY Annet Kirabo

Questions:

a) What is the poem about?

b) Write the title for the poem.

c) How many stanzas has the poem?

d) Where are palm leaves got?

e) Who wrote the poem?

*****END*****

MUSAB

END OF TERM TWO EXAMINATION FOR P.2 - 2019

SUBJECT: RELIGIOUS EDUCATION

NAME:

SCHOOL:

STREAM: **DATE:**

1. Write R.E in full.

2. Name any two activities done in the church.

i) _____

ii) _____

3. A holy place of worship for Christians is called

4. When do Muslims go for Juman prayers?

5. Name the king who wanted to kill baby Jesus.

6. Where was Prophet Muhammad born?

7. Write any two ways of showing respect to people.

i) _____

ii) _____

8. Give the meaning of these names

a) Emmanuel

b) Irene

-1-

9. What are living things?

10. What is a prayer?

11. Why do we pray?

12. How many apostles did Jesus have?

13. Draw and name sources of light God/Allah created

a)	b)
c)	d)

- 2 -

14. Name any two Holy Books where we read the word of God/Allah.

i) _____

ii) _____

15. Identify one way of caring for the needy.

16. Who was the earthly father of Jesus Christ?

17. Who was the first person God created?

18. Who were the two sons of Adam?

i) _____

ii) _____

19. What is the Holy book for Muslims?

20. Give two religious leaders in the Islamic region.

i) _____

ii) _____

21. Draw and name any two things found in the church.

a)	b)

- 3 -

22. Who is the head of the Moslem community?

23. Write any two Moslem names.

i) _____

ii) _____

24. What did Jesus serve to his apostles during the last supper?

25. What was the first miracle Jesus performed?

26. Identify two things that were used to kill Jesus.

i) _____

ii) _____

27. Give any two symbols of the Moslem religion.

i) _____

ii) _____

28. What did God create last?

29. Who baptized Jesus Christ?

30. Give the name of a prayer Jesus taught his apostles.

31. Write down one leader from the Christian religion.

- 4 -

32. Who was the helper of Jesus promised his apostles?

33. Name the place where Jesus was crucified on the cross.

34. Give one reason why Jesus died on the cross?

35. Name one pillar of the Moslem religion.

36. Who was the mother of Prophet Muhammad?

37. Where was Prophet Muhammad buried?

38. Draw and name any two basic needs of people.

a)	b)
<hr/>	<hr/>

END

MUSAB	
EKIGEZO EKIKOMEKEREZA OLUSOMA	
OLW'OKUBIRI EKYA P.2 - 2019	
SUBJECT:	LUGANDA
NAME:
SCHOOL:
STREAM:
DATE:

1. Soma okube ebisolo by'ewaka.

a)	b)

_____	_____
c)	

-1-

2. Jjuzaamu ennyingo ezibulamu.

mba mbe _____ mbo mbu
nda _____ ndi ndo ndu
_____ nfe nfi nfo nfu
nga nge ngi ngo _____

3. Kozesa ennyingo zino okole ebigambo.

lo _____
bi _____

nga

4. **Wandiika ebintu bibiri byetufuna mu bisolo by'awaka.**

i) _____ ii) _____

5. **Tereeza ebigambo bino.**

a) piiramu - _____

b) wansu - _____

c) keekamu - _____

d) wagumu - _____

6. **Wandiika ebinyonyi bibiri ebisangibwa awaka.**

i) _____ ii) _____

-2-

7. **Saza ku kigambo ekituufu.**

eriiso eliiso

ennyindo enyiindo

amattu amatu

eggalo engalo

8. Kola ennyingo okuva mu bigambo.

maama - _____

ekikopo - _____

embwa - _____

embaata - _____


9. Wandiika ennukuta ensirifu ssatu.

10. Soma okube ebidduka

emmotoka	endogoyi	eryato


-3-

11. Jjuzaamu ebigambo ebibulamu.



Ekikopo kiri _____mmeeza.

b)  A mazzi gali _____kikopo.

c)  Ekinyonyo kiri _____w'omuti.

12. **Wandiika ebintu bibiri byetuzanyisa.**

i) _____ ii) _____

13. **Wa ennyumba zabino.**

ekyenyanja - _____

ente - _____

enkima - _____

14. **Saza ku nsolo ezisangibwa mu nsiko.**

ente, enjovu, kkapa

empologoma, embwa, engabi

-4-

15. **Kozesa ennyingo okole ebigambo.**

ba - _____

la - _____

ka - _____

16. **Tegeka ebigambo okole emboozi.**

a) ewaka ekuuma Embwa.

b) emmeeza abajja Omusajja.

c) ku ntebe Ekikopo kiri.

d) omuguwa babuuka Abawala.

*****BIKOMYE*****

MUSAB

EKIGEZO EKIKOMEKEREZA OLUSOMA OLW'OKUBIRI EKYA P.1 - 2019

SUBJECT: LUGANDA
NAME:
SCHOOL:
STREAM: **DATE:**

1. Wuliriza owandiike.

i) _____ ii) _____

iii) _____

2. Kuba olage embeera y'obudde.

ey'omusana	ey'enkuba
mbuyaga	kidedde

--	--

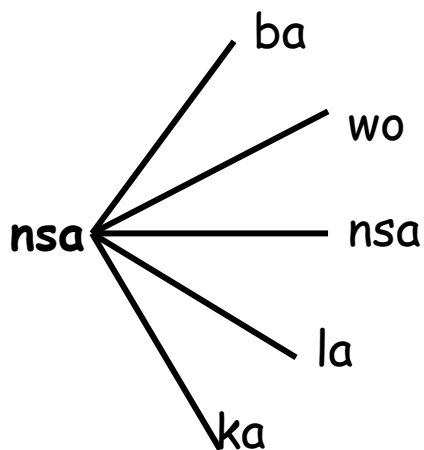
-1-

3. Jjuzaamu ebibulamu.

a	e	i	o	u
ba	be	_____	_____	bu
_____	ne	ni	_____	nu
nsa	_____	nsi	_____	nsu

4. Menya enukuta enjogeza.

5. Kola ebigambo.



6. Wandika enukuta ennene.

b B c _____ m _____

7. Kuba bino

ebire	enkuba	enjuba

-2-

8. Bino biwe amannya.



9. Kola ebigambo.

ma mata

sa _____

ba _____

te _____

ye _____

10. Soma okube

manvuuli	gambutusi	esweta

--	--	--

11. Wandika enukuta ensirifu 3.

-3-

12. Jjuzaamu enukuta ezibulamu



emp___l___



ens___w___



m___s___t___

13. Kutula ennyingo.

1. omusawo o-mu-sa-wo

2. olugoye _____

3. ekibiina _____

4. ettama _____

5. funa _____

14. Kuba ebitundu by'omubiri.

engalo	okugulu

--	--

15. Kuba akakubo.

amaaso

kuwunyiriza

amatu

kwogera

omumwa

kulaba

ennyindo

kuwulira

*****BIKOMYE WANO*****

MUSAB

END OF TERM TWO EXAMINATION FOR P.1- 2019

SUBJECT: RELIGIOUS EDUCATION

NAME:

SCHOOL:

STREAM: **DATE:**

1. The name Peter means _____.

2. Jesus died on the _____ for our sins.

3. Write your religious name.

4. God created people in His _____

(image, picture)

5. _____ is the creator for Moslems.
6. Moslems pray _____ times a day.
7. Christians go to church to _____.
8. A _____ is a way of talking to God.

(player, prayer)

9. The prayer Jesus taught to His apostles is called

(Lord's prayer, road's prayer))

10. Name the creator for Christians.

-1-

11. Draw these ways of talking to God.

Preaching God's word	Going to church

12. _____ was the earthly father of Jesus.

(Joseph, James)

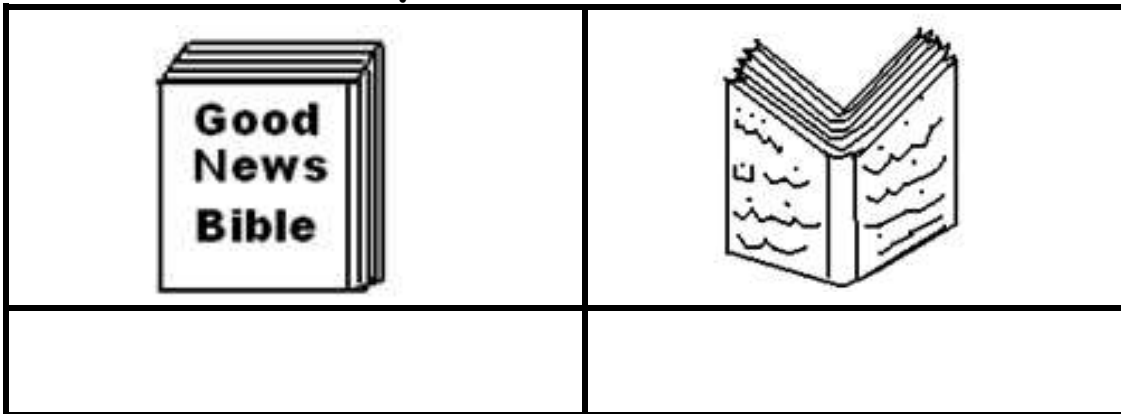
13. Christians talk to God by _____
(praying, playing)

14. _____ was the mother of prophet Muhammad.
(Amina, Aisha)

15. Write any two Christian names for girls.

i) _____ ii) _____


16. Name these Holy Books.



(Quran, textbooks, Bible)

-2-

17. Draw and name the symbol found on the church.



18. Match correctly.

Good Friday

Christians begin fasting

Palm Sunday

Jesus died on the cross

Easter Sunday

Jesus entered Jerusalem



Ash Wednesday

Jesus rose from the dead.

19. Write two Muslim names

i) _____ ii) _____

20. Name these things God created.



21. Muslims go to the _____ on Friday.

-3-

22. A _____ heads the Muslim community.
(Muft, pope)

23. Draw those needy people in the community.

--	--

The lame	The sick

24. Write any two needs of people.

i) _____

ii) _____

25. Christians go to _____ on Sunday.

26. Jesus changed water into _____.

27. Circle the apostles of Jesus.

(Andrew, St. Kizito, Simon Peter, Gonzaga)

28. Write any two gifts God gave us.

i) _____ ii) _____

29. Who leads Christians in the Mass?

-4-

30. _____ was the first apostles of Jesus.

(Andrew, Martin)


31. Jesus Christ _____ the sick people.

(healed, heeled)

32. Jesus Christ loved by _____ for them.

(praying, fighting)

33. How do those people talk to God?



By _____

34. Fill in the missing letters.

A ___ah,

Q__r__n,

B__b__e

C___ss

END

MUSAB

END OF TERM TWO EXAMINATION FOR P.1 - 2019

SUBJECT: LITERACY ONE "A"

NAME:

SCHOOL:

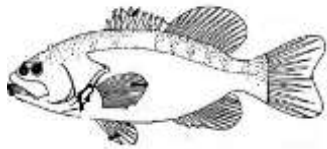
STREAM: **DATE:**

1. Name this sense organ.



2. _____ is something good to eat or drink.

3. Name these foods we eat.





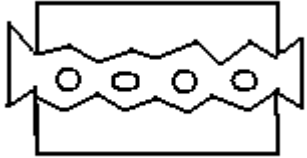
4. _____ treat sick people.

(nurses, doctors)

5. An _____ is a sudden injury to the body.


(accident, accept)

6. Name these things which cause accidents.

(razorblade, thorns, axe)

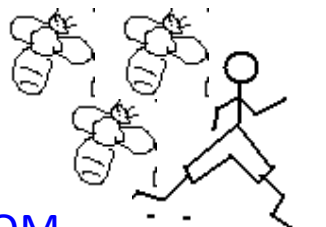
7. The first help given to an injured is called _____.
(first aid, first)
8. The general cleanliness of a person is called _____.
(personal hygiene, healthy)
9. We must _____ hands before and after eating food.
10. Name these things to clean our body.

11. Write two domestic animals.
i) _____ ii) _____
12. Name the animals that give us milk.

13. What insect gives us honey?

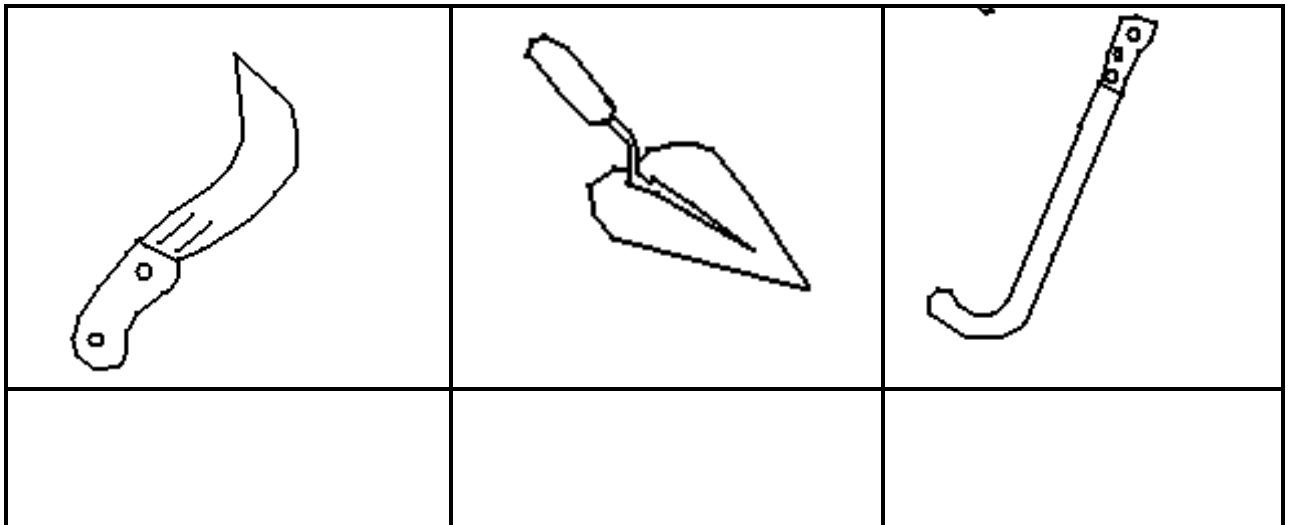
14. Name these accidents.



(sting, snakebite)

-2-

15. We use eyes for _____.
16. A _____ is used for digging.
17. A _____ is used for collecting grass.
18. Name these garden tools.



19. Circle the sources of food.

garden, hospital, shops, class, market

20. Match the tools to their uses.

sickle

for slashing

panga

for transplanting

slasher

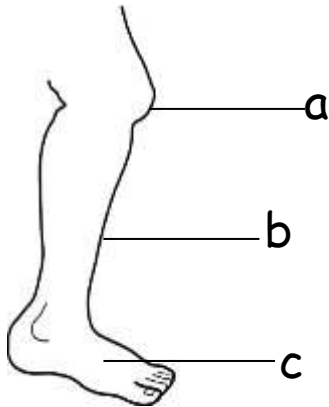
for cutting

21. Identify any two senses.

i) _____ ii) _____

-3-

22. Name these parts of the leg.



a _____

b _____

c _____

24. What do we use for biting? (**teeth, feet**)

25. We use a _____ and water to brush teeth.

26. Match animals to their young ones.

Animal

young one

dog

cub

hen

lamp

lion

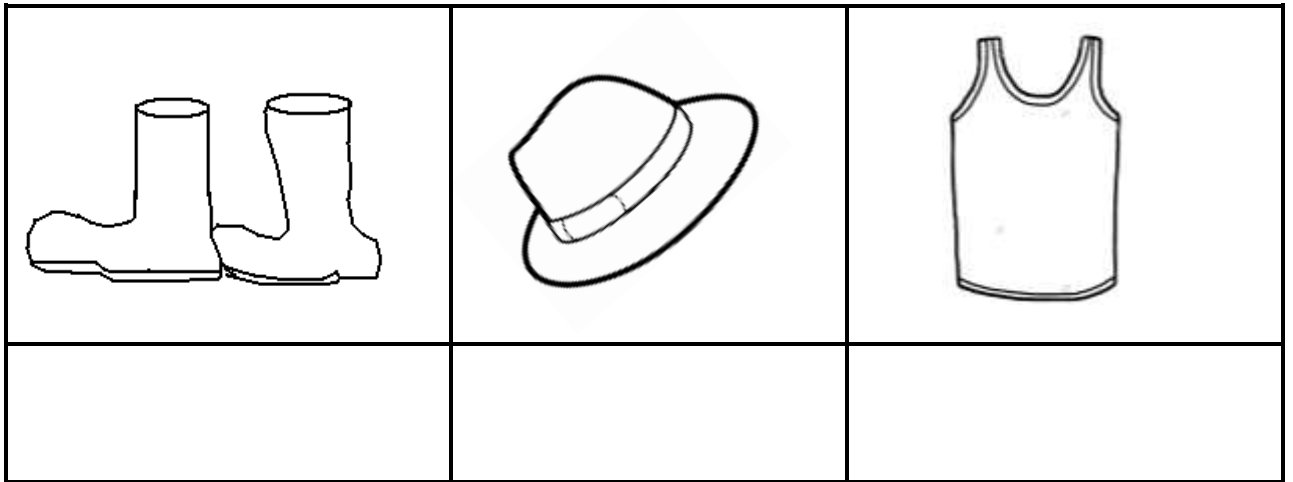
puppy

sheep

chick

27. Fish live in _____.

29. Name these clothes used to manage weather.



END

MUSAB

END OF TERM TWO EXAMINATION FOR P.1 - 2019

SUBJECT: LITERACY ONE "B"

NAME:

SCHOOL:

STREAM: **DATE:**

1. Name this element of weather.



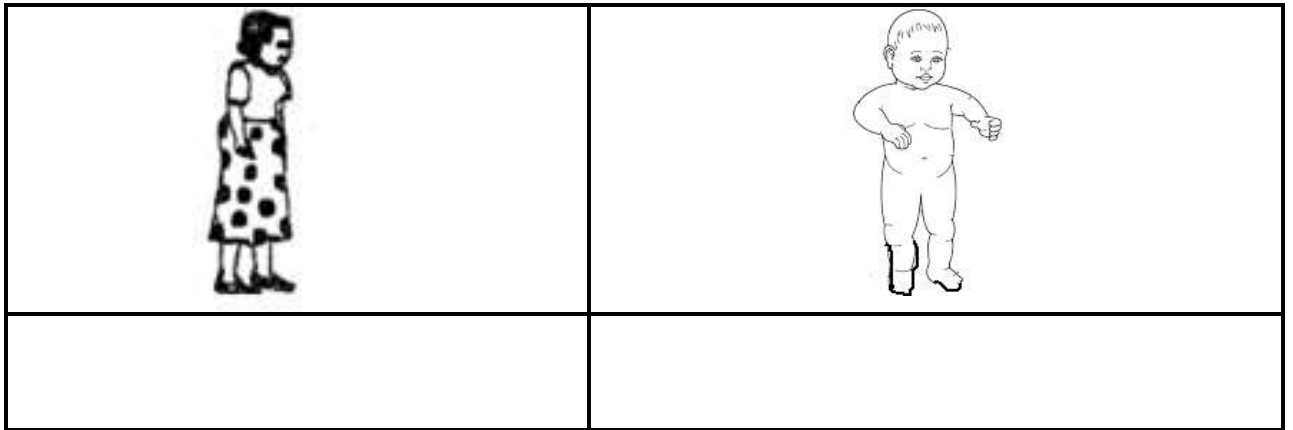
2. Who heads a school? (teacher, headteacher)

3. A teacher use _____ to write on the chalkboard. (chalk, stick)

4. Write any two things we find in the classroom.

i) _____ ii) _____

5. Name these people we find at home.



6. Circle the buildings we find at school.

hospital, kitchen, bank, latrine

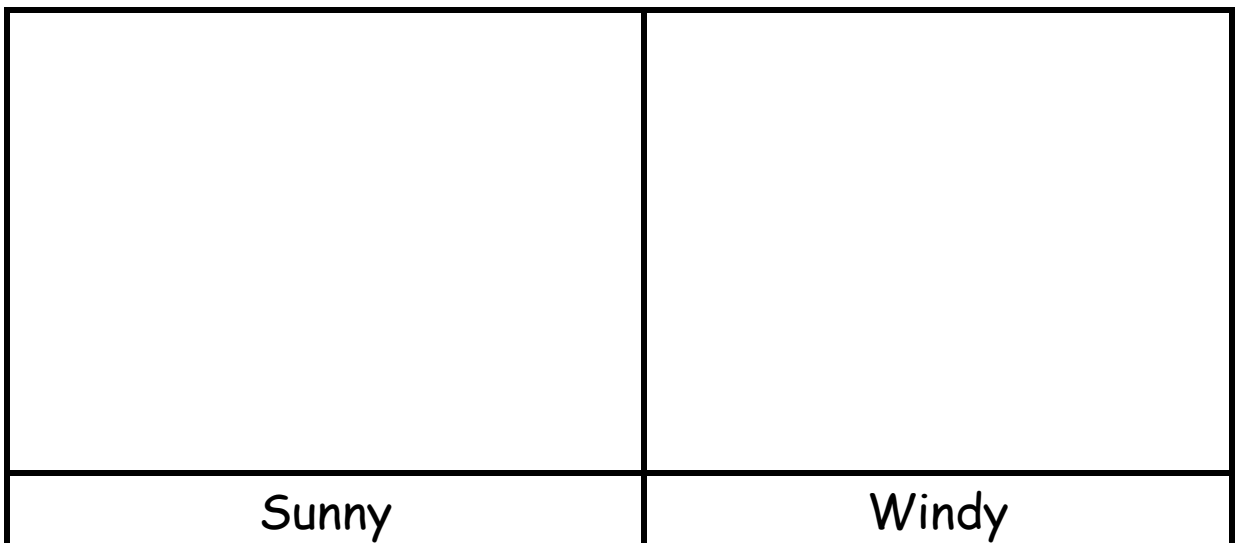
- 1 -

7. Write the two seasons of the year.

i) _____ season

ii) _____ season

8. Draw these types of weather




9. Give the uses of these tools.

Brooms for _____

Chalk for _____

10. Name these school symbols.



11. Who cooks food at home?

-2-

12. Match correctly.

teacher

types exams

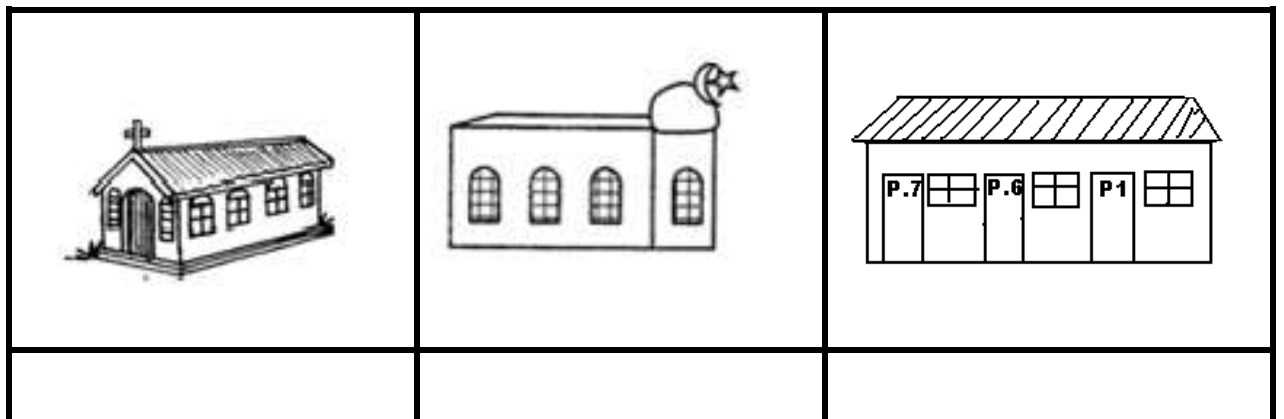
bursar

teaches pupils

secretary

collects school money

13. Name these important building in the community.



--	--	--

14. Write down two things we make.

i) _____ ii) _____

15. Underline religious leaders in the community.

Bishops, policemen, pastors, teacher

16. Match people in the community to their places of work.

doctor lakes or rivers

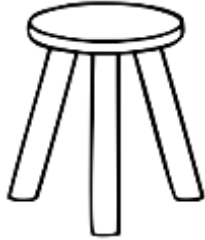


pilots workshops

fishermen hospitals

carpenters airports

-3-

17. Name these things used at home.

18. Match the animal to its home.

Animal

Home

dog

nest

bird

bush



snake

kennel

19. Draw these people in the community.

pilot	drivers

20. Name these basic needs of people.

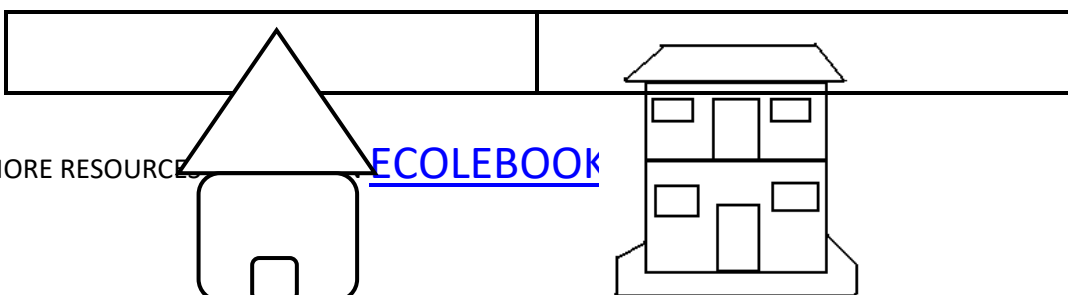
	

-4-

21. We use _____ to build huts.
(grass, iron sheets)

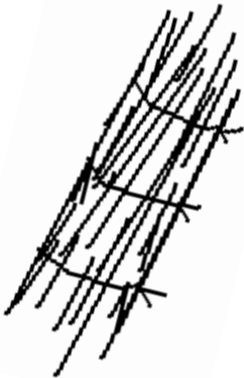
22. A person who builds houses is called a _____.
(carpenter, builder)

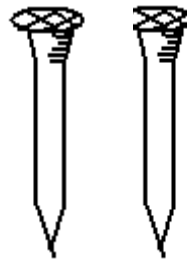
23. Name the examples of houses.



24. Write one person we find at school.

25. Name these building materials.





26. Write one thing we use at school.

*****END*****

MUSAB

END OF TERM TWO EXAMINATION FOR P.1 - 2019

SUBJECT: ENGLISH

NAME:

SCHOOL:

STREAM: **DATE:**

Fill in the missing letters.

1. s__h__ __l

2. th__rns

3. f__re

Read and draw.

4. Three flowers	5. She is sitting on the mat

Arrange in ABC order.

6. girl, man woman boy

7. desk, chair, book, flag

Write a little word.

8. father - _____

9. dog - _____

Write the plural word.

Singular


Plural


10. box _____

11. teacher _____

12. mango _____

Use Yes, it is a / No, it is not a

13.  Is this a snake?

14.  Is this a ball?

Rewrite the words correctly.

15. uct - _____ 16. snnyu - _____

Write the action word.

verb

action

17. sit _____

18. write _____

19. read _____

20. carry _____

Fill the gaps with "an" / "a".


21. She has _____apple.

22. There is _____ knife in the basket.

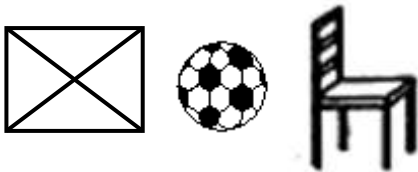
-2-


Use the words in the brackets and fill the gaps.


(under, between, over, after)

23.  John is running _____ the hen.

24. The ball is _____ the box and the chair.



25.  The aeroplane is flying _____ the tree.

26.  There is a stone _____ the bench.

Form sentences from the table.

I		a new uniform
She	has	ten sweets
They	have	long legs

27. _____

28. _____

29. _____

-3-

Complete the sentence correctly.

30. Mary is reading a _____



31. Alex is driving a _____



32. I am jumping a _____



What are these?

33.  _____

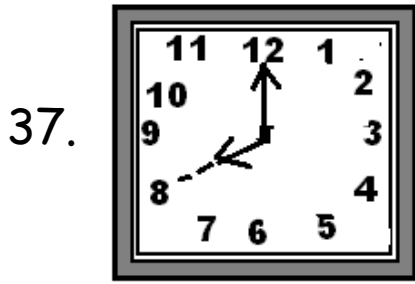
34.  _____

Fill in the correct number name.

35. Mother has _____ handbags. (4)

36. Those are _____ bricks. (9)

Read and tell the time.



It is _____ O'clock.

-4-

Arrange the words and form a correct sentence.

38. going school Mary is to.

39. kicking a He is ball.

Punctuate the sentences correctly.

40. this is a knife

41. those are thorns

Circle the odd word.

42. Two , play, Three, Five


43. cut, burn, fall, cloudy

Write in big letter.

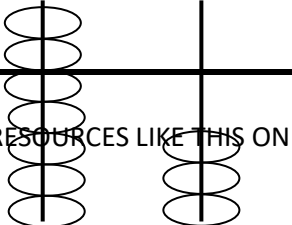
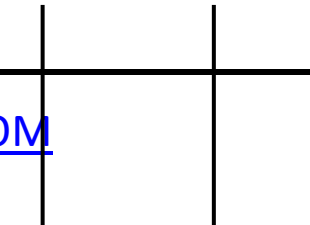
44. bite - _____

3.	<p>Fill in tens and ones.</p> <p>45 = _____ Tens _____ Ones</p> <p>_____ = 3Tens 2 Ones.</p>

- 2 -

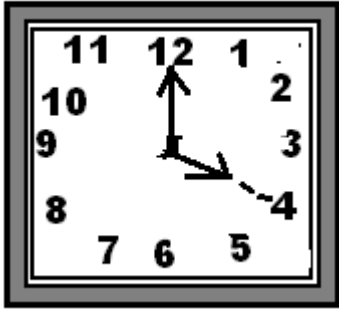
4.	<p>Name the sets below.</p> <div style="display: flex; align-items: center; justify-content: center;">  <div style="margin-left: 20px;"> <p>_____</p> </div> </div>
----	---

5.	<p>Take away.</p> <p>a) $9 - 6 =$ _____</p> <p>b) $\begin{array}{r} 1 \quad 1 \\ - \quad 3 \\ \hline \end{array}$</p>
----	--

6.	<p>Complete the abacus.</p> <div style="display: flex; justify-content: space-around;"> <div style="text-align: center;"> <p>a) T O</p>  </div> <div style="text-align: center;"> <p>b) T O</p>  </div> </div>
----	--

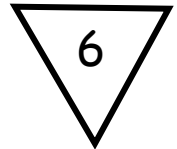




= 4 6

7. Read and tell the time.



It is _____ O'clock.

8. Fill in the missing numbers.



-3-

9. Write the number name /word

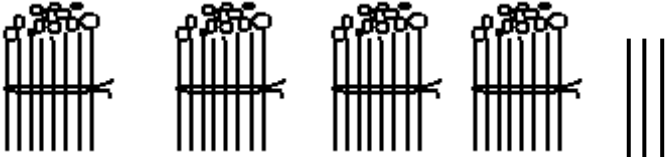
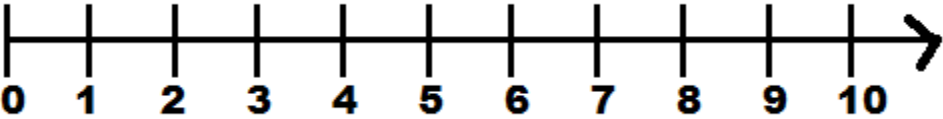
8 = _____

11 = _____

SECTION B:

10. Circle the bigger number.

a) 32 or 23

	<p>b) 14 or 41</p>
<p>11.</p>	<p>Draw bundles.</p> <p>2 Tens</p> <p>3 Ones</p>
<p>12.</p>	<p>Fill in correctly.</p>  <p style="text-align: center;">= _____</p> <p>_____ Tens _____ Ones</p> <p style="text-align: center;">-4-</p>
<p>12.</p>	<p>Add using a numberline.</p> <p>a) $2 + 3 =$ _____</p> 

b) $5 + 0 =$ _____




13. **Multiply:**

a) $3 \times 3 =$ _____

b) $2 \times 0 =$ _____

14. **Compare the sets using "less" or "more"**



A




B



Set A has _____ members

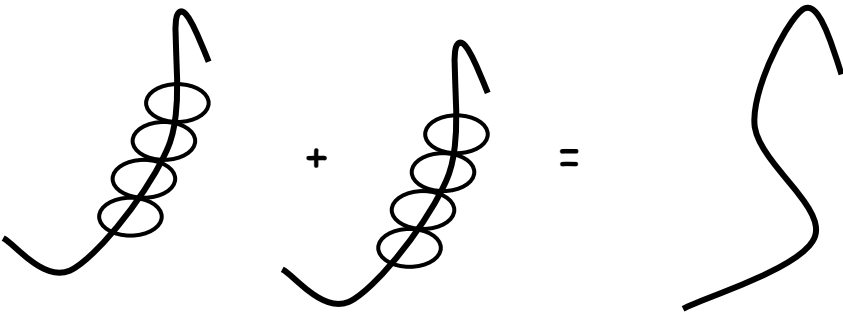
Set B has _____ members

-5-

15. **Name these shapes.**

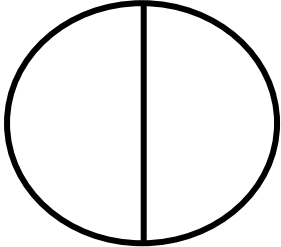


	<p>_____</p> <p>(triangle, circle, rectangle)</p>
16.	<p>Draw beads.</p> <p>9 = </p> <p>7 = </p>
17.	<p>Write the next number.</p> <p>a) 13, 14, _____</p> <p>b) 26, 27, 28 _____</p>
18.	<p>A _____ is a group or collection of things</p>
19.	<p>There are _____ days in a week.</p>
20.	<p>Fill in the missing letters.</p> <p>M__n__d__y</p> <p>T__esday</p>

21.	Arrange the numbers in order. 5, 6, 2, 3, 1, 0 _____				
22.	Add: Two books plus Two books equals _____				
23	Mary has 4 balls. Jane has 6 balls. Altogether they have _____ balls.				
24.					
25.	Draw these shape. <table border="1" data-bbox="236 1422 1209 1765"><tr><td data-bbox="236 1422 726 1697"></td><td data-bbox="726 1422 1209 1697"></td></tr><tr><td data-bbox="236 1697 726 1765">Oval</td><td data-bbox="726 1697 1209 1765">square</td></tr></table>			Oval	square
Oval	square				
26.	a) Five minus Two equals _____ b) Six minus Two equals _____				

-7-

27. **Shade the fraction.**



$$= \frac{1}{2}$$

28. **Add the fraction.**

$$\frac{1}{2} + \frac{1}{3} =$$

29. **Match correctly**

1st

third

2nd

tenth

3rd

first

	10 th second
END	