

LOHANA SCHOOLS

P.5 RELIGIOUS EDUCATION REVISION WORK: 2020

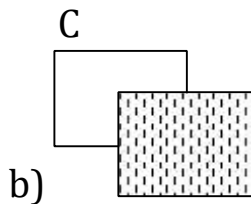
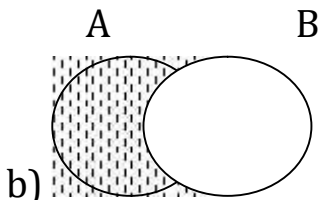
ACTIVITY ONE

1. Either: Name the book in the Holy Bible that talks about creation. Or: Name the prophet in Islam who is related to creation.
2. Either: Which word do Christians say at the end of every prayer?
Or: Which word in Islam means cleanliness of some body parts before prayer.
3. Either: Give one reason why God created man.
Or: Give one reason why Allah created man.
4. Either: Who is a Christian?
Or: Who is a Moslem?
5. For both: Give one way you can help the needy in society.
6. Either: How was Judas Iscariot unfaithful during Jesus' ministry? Or: How was Aminah related to the last prophet in Islam?
7. Either: Why do Christians celebrate each of the following days?
a) Good Friday b) Easter Sunday c) Ascension day
d) Christmas day
Or:
a) Name the Holy books that Allah revealed to the following prophets in Islam.
i) Prophet Musa ii) Prophet Isa iii) Prophet Dauda
b) Name the prophet who is remembered for building the Kaaba.
8. Both: Write a short prayer thanking God for promoting you to P.5.
9. Either: Name the creature that tempted Eve in the Garden of Eden. Or: Name the holy book that was given to prophet Dauda
10. Both: Give one way a P.5 child can make his/her parents proud.
11. Either: Write your Christian name.
Or: Write your Islamic name.

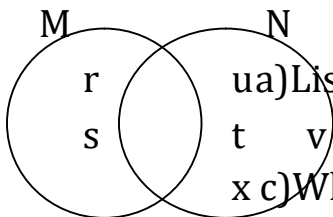
12. Both: Give one reason why Christians and Moslems are encouraged to help the needy.
13. Both: State any one example of bad decision made by school children.
14. Either: Mention one way you can take care of God’s creation. Or:
 Mention one way you can care for Allah’s creation.

P.5 MATHS REVISION WORK ACTIVITY ONE: 2020

1. Name the set symbol below.
2. Given that set $K = \{1, 2, 3, 4, 5\}$, describe set K.
3. $P = \{a, e, I, o, u\}$, $Q = \{a, b, c, d, e\}$ Find $P \cup Q$.
4. Name the shaded region.



5. Use the Venn diagram below to interpret the questions.



- a) List the element of N.
- b) Find the $n(M - N)$
- c) What is $M \cap N$

d) How many elements are in $M \cup N$?

6. Stella had sh.40000 and she bought a chair for sh. 10000 2 books for sh. 3000 a book. 5 apples for sh. 1000 each apple 2 cakes for sh. 5000 per cake.

- a) Calculate Stella’s expenditure.
- b) What was her balance?

7. Simplify: $2x + 4x =$
8. Subtract: 20 spoons – 13 spoons.
9. Solve: $3 \times r = 1$.
10. Collect like terms: a) $X + 3y + 2x$

$$b) 4m + 5t + m - t.$$

11. The length is a square is Xcm. Find its perimeter.
12. Given that $a = 2$, $b = 4$ and $c = 0$, Find.
- a) $a + b + c$ (b) $b \div a$ (c) $b + c - a$
d) $2b - a$ (e) $\frac{a \cdot b}{b}$

13. Multiply : 14×2 .
14. Round off 43 to the nearest tens.
15. Write XXII in Hindu Arabic numerals.

3

16. What is $\frac{3}{5}$ of 40 pencils.

P.5 SCIENCE REVISION WORK ACTIVITY ONE: 2020

1. Give the difference between poultry and poultry keeping.
2. How is a capon different from a pullet?
3. Besides picking food, mention any one use of a beak to a poultry.
4. In which way do crop farmers benefit from a poultry farmer?
5. Give the meaning of the term culling as used in poultry keeping.
6. Mention any one use of bones got from poultry.
7. Of what importance is a spur to a domestic fowl?
8. Draw and name any four domestic birds.
9. a) Identify any two uses of feathers to poultry apart from enabling them to fly.
10. Kapere a poultry farmer was given a tender of supplying eggs at Sheraton hotel, which type of chicken would you recommend him to rear?
11. Name the type of chicken commonly referred to as table birds.
12. Why do farmers prefer keeping exotic breeds of chicken to local breeds of chicken?
13. How can Joel improve on the quality of his local breeds?
14. What is cross breeding?
15. Give one difference between local breeds and exotic breeds of chicken.

[DOWNLOAD MORE RESOURCES LIKE THIS ON ECOLEBOOKS.COM](https://www.ecolebooks.com)

16. How are feathers important to the people?

17. Complete the table below.

Type Layer	Breed White leghorn i) _____ ii) _____
Broilers	Light Sussex iii) _____
Dual purpose	Black Aushtralorp i) _____ ii) _____

18. List down the four systems of poultry keeping.

i) _____ ii) _____ iii) _____ iv) _____

19. Identify any one exotic breed of rabbits.

20. How are feathers important to a bird?

21. Name the type of chicken mainly kept for meat.

P.5 ENGLISH REVISION WORK ACTIVITY ONE: 2020

Use the correct form of the words given in the brackets to complete the sentences.

- Our English teacher taught us about _____ last week. (punctuate)
- Mr. Opolots bicycle ____broke down as he was riding down the hill. (carry)
- Have you ever learnt about vehicle repair and_____? (maintain)
- My father’s car_____were dirty because the mad man stepped on them. (sit)
- A_____mark is used to quote the exact words of a speaker. (quote) 6.
Primary Five pupils_____the bus as they were going to the zoo. (board) **Fill in what a correct word should be to make sensible sentences.**
- James caused an accident because the _____on his vehicle broke down.

8. Every machine cannot move without an _____.
9. All passengers should always remember to tie the seat _____ to hold and keep them safe in case of an accident.
10. The _____ rode his bicycle so fast that he won the race.

Construct meaningful sentences using these words to show that you understand and know their meaning.

11. a) brake
b) break
12. a) seat
b) sit
13. a) wheel
b) will
14. a) tyre
b) tear

Punctuate these sentences correctly

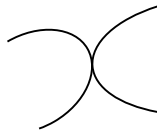
15. i wont go to dodoma said mary
16. we learn english maths sst and science at lohana academy
17. where is martha going
18. That is toms car it is his
19. i once lived in tanzania and nigeria
20. what a tall lady Kathy is
21. thirty six is a compound number

P.5 SOCIAL STUDIES REVISION WORK ACTIVITY ONE: 2020

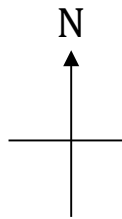
1. Name any one district in Central Uganda.
2. State any one duty performed by Resident District Commissioner at the district.
3. How is a compass important to a pilot?
4. What challenge will Suzan face while using a map without a title?
5. What is a sketch map?

[DOWNLOAD MORE RESOURCES LIKE THIS ON ECOLEBOOKS.COM](http://Ecolebooks.com)

6. Why are signs and symbols used on a map instead of real objects?
7. a)What is an Island?
b)Name any one Island district in Uganda.
c)State any one way how Island districts are important in Uganda.
d)Mention any one problem faced by people living on Islands.
8. Mention any one Island district in Uganda.
9. How was the tool below useful to the early man?



10. What type of house is made using reeds and mud?
11. How are commercial banks useful to traders in our community?
12. Give the use of a fence around a school.
13. How is a market important to a school near it?
14. a)Mention any two ways of locating places in Uganda.
b)Identify the map symbols drawn below.



15. a)What is rural urban migration?
b)Give any two reasons why people move from villages to towns.
c)What can the government do to discourage rural urban migration?