



HILLSIDE PRIMARY SCHOOL EXAMINATIONS BOARD
PRIMARY SEVEN HOLIDAY PACKAGE FOR TERM ONE
2020

SET THREE MATHEMATICS

Time Allowed: 2 Hours 30 Minutes

	EMIS No.					Personal No.		
INDEX NUMBER								

Candidate's Name.....Stream.....

Candidate's Signature.....

EMIS No.

District Name.....

FOR EXAMINERS' USE ONLY		
Qn. No.	MARKS	EXR'S NO
1 - 5		
- 10		
- 15		

Read the following instructions carefully

1. This paper has **two** sections: **A** and **B**. Section **A** has **20** questions and Section B has 12 questions.
2. Answer **all** questions. **All** the working for both sections **A** and **B** must be shown in the spaces provided.
3. **All** working must be done using a **blue** or **black** ball-point pen or fountain pen. Any work done in pencil other than graphs and diagrams will not be marked.
4. No calculators are allowed in the examination room.
5. Unnecessary changes in your work may lead to loss of marks.
6. Any handwriting that cannot easily be read may lead to loss of marks.
7. Do not fill anything in the table indicated: **“For Examiners’ Use Only”** and boxes inside the question paper.

- 20		
- 22		
- 24		
- 26		
- 28		
- 30		
- 32		
TOTAL		

SECTION A: 40 MARKS

Answer **all** questions in this section.

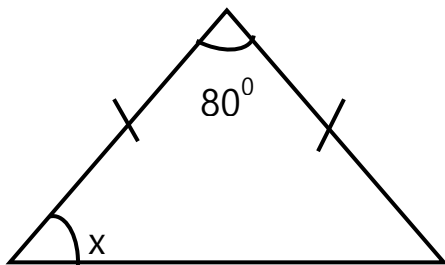
Questions **1** to **20** carry two marks each.

1. Work out: $714 \div 7$

11. The ratio of boys to girls is 2:3. When increased by p , it becomes 14:15. Find the value of p .

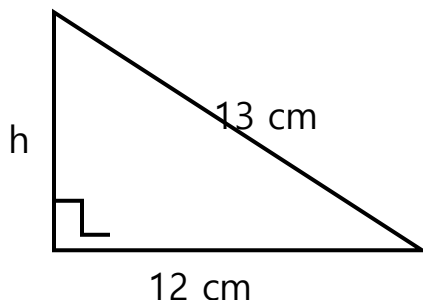
12. Mr. Esau deposited sh. 240,000 in stanbic bank at the interest rate of 15% per year for 9 months. Find his simple interest.

13. Find the value of x in the figure below.



14. Simplify: $-4 - -11$
15. A man's stride is 30cm. How many strides does he have to make to cover a distance of 150 metres?
16. Find the square root of $6\frac{1}{4}$.
17. Evaluate $a^2 - b$ if $a = -3$ and $b = 2$.
18. In a class of 32 boys, the ratio of boys to girls is 2:3. Find the number of girls in the class.

19. Find the area of the figure below.



20. Solve: $2^{2x} = 64$

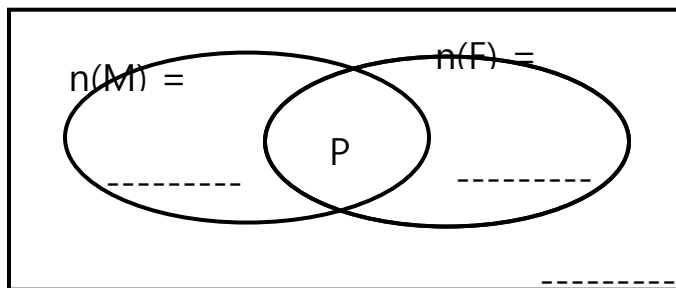
SECTIONS B: 60 MARKS

21. In a class of 40 candidates, all like chicken (C), 20 like meat (M) and chicken, 25 like fish (F) and chicken, p like all the three types of food while 5 candidates like chicken only.

a) Complete the Venn diagram below.

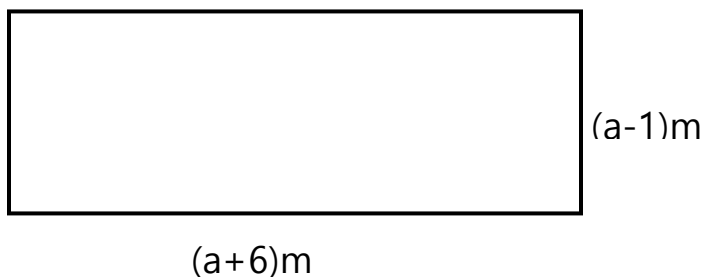
(3marks) $n(\epsilon)$

=40



b) How many candidates like all the three types of food? (2marks)

22. The figure below is a rectangle whose perimeter is 46 m. Use it to answer the questions that follow.



a) Find the value of a . (2marks)

b) Work out the area of the figure above. (3marks)

23. Mary went to the market and bought the following items.

- 2 kg of meat at sh. 8,000 per kg
- $1\frac{1}{4}$ kg of sugar at sh. 6,000 each kg
- 500g of maize flour at sh. 3,000 per kg \square 12 tomatoes at sh. 1,000 for every 3 tomatoes

a) How much money did she spend altogether? (5marks)

b) If she was given a change of sh. 21,000, how much money did she have at first? (1mark)

24. The sum of three consecutive even numbers is 66. If the last number is r ,

a) Find the numbers. (3marks)

b) Work out the range of the numbers. (1mark)

25. The table below shows marks scored by some pupils.

Marks	80	k	70	90
No. of pupils	2	4	3	1

a) How many pupils did the test? (2marks)

b) Find the value of k if the mean mark is 66. (3marks)

26. The table below shows the arrival and the departure time of the bus from Kampala to Tororo. Use it to answer the questions that follow.

Town	Arrival	Departure
------	---------	-----------

Kampala		7: 00 am
Jinja	8: 45 am	9: 00 am
Iganga	10: 00 am	10: 20 am
Bugiri	11: 00 am	11: 15 am
Tororo	12: 00 noon	

- a) How long did the bus take to travel from Iganga to Tororo? (2marks)
- b) For how long did the bus stay in Jinja? (1mark)
- c) If the distance from Kampala to Tororo is 255 km, calculate the average speed at which the bus was traveling. (2marks)

27. Mulokosi is twice as old as his brother now. In 5 years' time, their total age will be 40 years.

- a) How old is Mulokosi's brother now? (4marks)

b) How old will Mulokosi be in 5 years' time? (1mark)

28. a) Using a ruler, a pencil and a pair of compasses only, construct a triangle ABC in which $AB = 6$ cm, $BC = 8$ cm and $AC = 10$ cm (4marks)

b) Measure angle ABD. (1mark)

29. Pautinoh, Robbinoh and Ronaldinoh shared a certain amount of money in the ratio of 2: 3: 4 respectively. If Robbinoh got sh. 90,000;

a) Find their total share. (3marks)

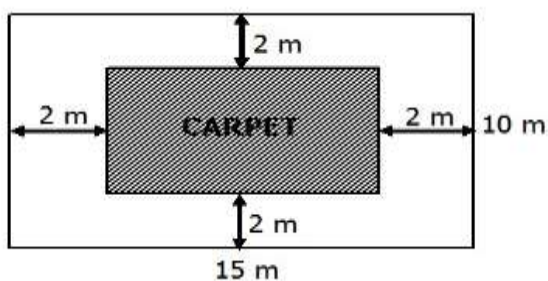
b) How much more money did Ronaldinoh get than Pautinoh? (2marks)

30. The interior and exterior angles are in the ratio of 7:2.

a) Find the size of each angle. (3marks)

b) Calculate its interior angle sum. (2marks)

31. The figure below represents the sitting room of 15 m by 10 m with a carpet placed in the middle. Use it to find the area of the space that is not covered by the carpet. (5marks)



32. Given that $y = x - 2$. Complete the table below. (5marks)

x	-2	_____	0	_____	2
y	_____	-3	_____	-1	_____

END